




Determine which choice best describes the coins in the order shown.

Answers



- A. quarter, nickel, penny, dime
- B. nickel, quarter, penny, dime
- C. quarter, penny, dime, nickel
- D. dime, quarter, penny, nickel

1. \_\_\_\_\_



- A. nickel, dime, penny, quarter
- B. nickel, quarter, dime, penny
- C. penny, quarter, dime, nickel
- D. quarter, dime, nickel, penny

2. \_\_\_\_\_

3. \_\_\_\_\_



- A. dime, nickel, quarter, penny
- B. penny, dime, quarter, nickel
- C. penny, dime, nickel, quarter
- D. nickel, dime, penny, quarter

4. \_\_\_\_\_

5. \_\_\_\_\_

6. \_\_\_\_\_



- A. quarter, dime, penny, nickel
- B. nickel, dime, quarter, penny
- C. dime, quarter, nickel, penny
- D. nickel, quarter, dime, penny

7. \_\_\_\_\_

8. \_\_\_\_\_




- A. nickel, dime, penny, quarter
- B. penny, nickel, quarter, dime
- C. dime, quarter, nickel, penny
- D. penny, quarter, nickel, dime



- A. dime, penny, quarter, nickel
- B. quarter, dime, penny, nickel
- C. nickel, quarter, dime, penny
- D. penny, nickel, quarter, dime



- A. quarter, penny, dime, nickel
- B. nickel, quarter, penny, dime
- C. dime, quarter, nickel, penny
- D. dime, nickel, penny, quarter



- A. dime, nickel, penny, quarter
- B. nickel, penny, dime, quarter
- C. quarter, dime, nickel, penny
- D. dime, nickel, quarter, penny



Determine which choice best describes the coins in the order shown.



- A. quarter, nickel, penny, dime
- B. nickel, quarter, penny, dime
- C. quarter, penny, dime, nickel
- D. dime, quarter, penny, nickel



- A. nickel, dime, penny, quarter
- B. nickel, quarter, dime, penny
- C. penny, quarter, dime, nickel
- D. quarter, dime, nickel, penny



- A. dime, nickel, quarter, penny
- B. penny, dime, quarter, nickel
- C. penny, dime, nickel, quarter
- D. nickel, dime, penny, quarter



- A. quarter, dime, penny, nickel
- B. nickel, dime, quarter, penny
- C. dime, quarter, nickel, penny
- D. nickel, quarter, dime, penny




- A. nickel, dime, penny, quarter
- B. penny, nickel, quarter, dime
- C. dime, quarter, nickel, penny
- D. penny, quarter, nickel, dime



- A. dime, penny, quarter, nickel
- B. quarter, dime, penny, nickel
- C. nickel, quarter, dime, penny
- D. penny, nickel, quarter, dime



- A. quarter, penny, dime, nickel
- B. nickel, quarter, penny, dime
- C. dime, quarter, nickel, penny
- D. dime, nickel, penny, quarter



- A. dime, nickel, penny, quarter
- B. nickel, penny, dime, quarter
- C. quarter, dime, nickel, penny
- D. dime, nickel, quarter, penny

Answers

1.     **C**    

2.     **A**    

3.     **A**    

4.     **B**    

5.     **B**    

6.     **B**    

7.     **D**    

8.     **B**