



Count the number of quarters (25¢), dimes(10¢), nickels(5¢) and pennies(1¢).

Answers



Ex. 2 3 2 2



1. \_\_\_\_\_



2. \_\_\_\_\_



3. \_\_\_\_\_



4. \_\_\_\_\_



5. \_\_\_\_\_



6. \_\_\_\_\_



7. \_\_\_\_\_



8. \_\_\_\_\_



9. \_\_\_\_\_



10. \_\_\_\_\_



Count the number of quarters (25¢), dimes(10¢), nickels(5¢) and pennies(1¢).

Ex)

1)

2)

3)

4)

5)

6)

7)

8)

9)

10)

Answers

|     |          |          |          |          |
|-----|----------|----------|----------|----------|
| Ex. | <u>2</u> | <u>3</u> | <u>2</u> | <u>2</u> |
| 1.  | <u>3</u> | <u>2</u> | <u>1</u> | <u>3</u> |
| 2.  | <u>2</u> | <u>2</u> | <u>2</u> | <u>3</u> |
| 3.  | <u>3</u> | <u>2</u> | <u>2</u> | <u>2</u> |
| 4.  | <u>2</u> | <u>2</u> | <u>2</u> | <u>3</u> |
| 5.  | <u>2</u> | <u>2</u> | <u>3</u> | <u>2</u> |
| 6.  | <u>2</u> | <u>2</u> | <u>4</u> | <u>1</u> |
| 7.  | <u>1</u> | <u>4</u> | <u>2</u> | <u>2</u> |
| 8.  | <u>3</u> | <u>1</u> | <u>2</u> | <u>3</u> |
| 9.  | <u>3</u> | <u>2</u> | <u>2</u> | <u>2</u> |
| 10. | <u>1</u> | <u>4</u> | <u>3</u> | <u>1</u> |



Count the number of quarters (25¢), dimes(10¢), nickels(5¢) and pennies(1¢).

Answers

Ex)

Ex. 1 1 4 3

1)

1. \_\_\_\_\_

2)

2. \_\_\_\_\_

3)

3. \_\_\_\_\_

4)

4. \_\_\_\_\_

5)

5. \_\_\_\_\_

6)

6. \_\_\_\_\_

7)

7. \_\_\_\_\_

8)

8. \_\_\_\_\_

9)

9. \_\_\_\_\_

10)

10. \_\_\_\_\_



Count the number of quarters (25¢), dimes(10¢), nickels(5¢) and pennies(1¢).

Ex)

1)

2)

3)

4)

5)

6)

7)

8)

9)

10)

Answers

|     |          |          |          |          |
|-----|----------|----------|----------|----------|
| Ex. | <u>1</u> | <u>1</u> | <u>4</u> | <u>3</u> |
| 1.  | <u>3</u> | <u>2</u> | <u>1</u> | <u>3</u> |
| 2.  | <u>3</u> | <u>2</u> | <u>2</u> | <u>2</u> |
| 3.  | <u>2</u> | <u>2</u> | <u>2</u> | <u>3</u> |
| 4.  | <u>1</u> | <u>3</u> | <u>3</u> | <u>2</u> |
| 5.  | <u>1</u> | <u>2</u> | <u>2</u> | <u>4</u> |
| 6.  | <u>2</u> | <u>2</u> | <u>3</u> | <u>2</u> |
| 7.  | <u>4</u> | <u>2</u> | <u>2</u> | <u>1</u> |
| 8.  | <u>3</u> | <u>3</u> | <u>1</u> | <u>2</u> |
| 9.  | <u>1</u> | <u>2</u> | <u>4</u> | <u>2</u> |
| 10. | <u>1</u> | <u>2</u> | <u>3</u> | <u>3</u> |





Count the number of quarters (25¢), dimes(10¢), nickels(5¢) and pennies(1¢).

Answers

Ex)




Ex. 3 2 2 2

1)



1. \_\_\_\_\_

2)



2. \_\_\_\_\_

3)



3. \_\_\_\_\_

4)



4. \_\_\_\_\_

5)



5. \_\_\_\_\_

6)



6. \_\_\_\_\_

7)




7. \_\_\_\_\_

8)



8. \_\_\_\_\_

9)



9. \_\_\_\_\_

10)



10. \_\_\_\_\_



Count the number of quarters (25¢), dimes(10¢), nickels(5¢) and pennies(1¢).

Ex)

1)

2)

3)

4)

5)

6)

7)

8)

9)

10)


Answers

|     |          |          |          |          |
|-----|----------|----------|----------|----------|
| Ex. | <u>3</u> | <u>2</u> | <u>2</u> | <u>2</u> |
| 1.  | <u>2</u> | <u>2</u> | <u>3</u> | <u>2</u> |
| 2.  | <u>2</u> | <u>2</u> | <u>2</u> | <u>3</u> |
| 3.  | <u>2</u> | <u>5</u> | <u>1</u> | <u>1</u> |
| 4.  | <u>2</u> | <u>3</u> | <u>2</u> | <u>2</u> |
| 5.  | <u>2</u> | <u>2</u> | <u>2</u> | <u>3</u> |
| 6.  | <u>2</u> | <u>4</u> | <u>1</u> | <u>2</u> |
| 7.  | <u>3</u> | <u>1</u> | <u>1</u> | <u>4</u> |
| 8.  | <u>3</u> | <u>2</u> | <u>2</u> | <u>2</u> |
| 9.  | <u>3</u> | <u>2</u> | <u>1</u> | <u>3</u> |
| 10. | <u>1</u> | <u>2</u> | <u>2</u> | <u>4</u> |




Count the number of quarters (25¢), dimes(10¢), nickels(5¢) and pennies(1¢).

Answers


Ex) 

1) 

2) 

3) 

4) 

5) 

6) 

7) 

8) 

9) 

10) 

Ex. 3 2 1 3

1. \_\_\_\_\_

2. \_\_\_\_\_

3. \_\_\_\_\_

4. \_\_\_\_\_

5. \_\_\_\_\_

6. \_\_\_\_\_

7. \_\_\_\_\_

8. \_\_\_\_\_

9. \_\_\_\_\_

10. \_\_\_\_\_



Count the number of quarters (25¢), dimes(10¢), nickels(5¢) and pennies(1¢).

Ex)

1)

2)

3)

4)

5)

6)

7)

8)

9)

10)

Answers

|     |          |          |          |          |
|-----|----------|----------|----------|----------|
| Ex. | <u>3</u> | <u>2</u> | <u>1</u> | <u>3</u> |
| 1.  | <u>2</u> | <u>3</u> | <u>3</u> | <u>1</u> |
| 2.  | <u>1</u> | <u>3</u> | <u>3</u> | <u>2</u> |
| 3.  | <u>2</u> | <u>2</u> | <u>2</u> | <u>3</u> |
| 4.  | <u>3</u> | <u>2</u> | <u>2</u> | <u>2</u> |
| 5.  | <u>2</u> | <u>4</u> | <u>1</u> | <u>2</u> |
| 6.  | <u>2</u> | <u>2</u> | <u>3</u> | <u>2</u> |
| 7.  | <u>2</u> | <u>2</u> | <u>3</u> | <u>2</u> |
| 8.  | <u>2</u> | <u>1</u> | <u>3</u> | <u>3</u> |
| 9.  | <u>2</u> | <u>4</u> | <u>1</u> | <u>2</u> |
| 10. | <u>1</u> | <u>3</u> | <u>1</u> | <u>4</u> |





Count the number of quarters (25¢), dimes(10¢), nickels(5¢) and pennies(1¢).

Answers

Ex)

1)

2)

3)

4)

5)

6)

7)

8)

9)

10)

Ex. 2 2 2 3

1. \_\_\_\_\_

2. \_\_\_\_\_

3. \_\_\_\_\_

4. \_\_\_\_\_

5. \_\_\_\_\_

6. \_\_\_\_\_

7. \_\_\_\_\_

8. \_\_\_\_\_

9. \_\_\_\_\_

10. \_\_\_\_\_



Count the number of quarters (25¢), dimes(10¢), nickels(5¢) and pennies(1¢).

Ex)

1)

2)

3)

4)

5)

6)

7)

8)

9)

10)

Answers

|     |          |          |          |          |
|-----|----------|----------|----------|----------|
| Ex. | <u>2</u> | <u>2</u> | <u>2</u> | <u>3</u> |
| 1.  | <u>5</u> | <u>1</u> | <u>1</u> | <u>2</u> |
| 2.  | <u>2</u> | <u>2</u> | <u>2</u> | <u>3</u> |
| 3.  | <u>1</u> | <u>5</u> | <u>2</u> | <u>1</u> |
| 4.  | <u>3</u> | <u>1</u> | <u>2</u> | <u>3</u> |
| 5.  | <u>3</u> | <u>2</u> | <u>2</u> | <u>2</u> |
| 6.  | <u>3</u> | <u>2</u> | <u>2</u> | <u>2</u> |
| 7.  | <u>2</u> | <u>2</u> | <u>3</u> | <u>2</u> |
| 8.  | <u>2</u> | <u>3</u> | <u>2</u> | <u>2</u> |
| 9.  | <u>2</u> | <u>3</u> | <u>2</u> | <u>2</u> |
| 10. | <u>1</u> | <u>4</u> | <u>3</u> | <u>1</u> |



Count the number of quarters (25¢), dimes(10¢), nickels(5¢) and pennies(1¢).

Answers

Ex)

1)

2)

3)

4)

5)

6)

7)

8)

9)

10)

Ex. 2 2 3 2

1. \_\_\_\_\_

2. \_\_\_\_\_

3. \_\_\_\_\_

4. \_\_\_\_\_

5. \_\_\_\_\_

6. \_\_\_\_\_

7. \_\_\_\_\_

8. \_\_\_\_\_

9. \_\_\_\_\_

10. \_\_\_\_\_



Count the number of quarters (25¢), dimes(10¢), nickels(5¢) and pennies(1¢).

Ex)

1)

2)

3)

4)

5)

6)

7)

8)

9)

10)

Answers

|     |          |          |          |          |
|-----|----------|----------|----------|----------|
| Ex. | <u>2</u> | <u>2</u> | <u>3</u> | <u>2</u> |
| 1.  | <u>2</u> | <u>2</u> | <u>3</u> | <u>2</u> |
| 2.  | <u>3</u> | <u>3</u> | <u>2</u> | <u>1</u> |
| 3.  | <u>2</u> | <u>2</u> | <u>2</u> | <u>3</u> |
| 4.  | <u>3</u> | <u>4</u> | <u>1</u> | <u>1</u> |
| 5.  | <u>4</u> | <u>2</u> | <u>1</u> | <u>2</u> |
| 6.  | <u>1</u> | <u>2</u> | <u>3</u> | <u>3</u> |
| 7.  | <u>2</u> | <u>3</u> | <u>1</u> | <u>3</u> |
| 8.  | <u>2</u> | <u>2</u> | <u>3</u> | <u>2</u> |
| 9.  | <u>2</u> | <u>2</u> | <u>2</u> | <u>3</u> |
| 10. | <u>2</u> | <u>2</u> | <u>2</u> | <u>3</u> |





Count the number of quarters (25¢), dimes(10¢), nickels(5¢) and pennies(1¢).

Answers

Ex)

Ex. 2 1 2 4

1)

1. \_\_\_\_\_

2)

2. \_\_\_\_\_

3)

3. \_\_\_\_\_

4)

4. \_\_\_\_\_

5)

5. \_\_\_\_\_

6)

6. \_\_\_\_\_

7)

7. \_\_\_\_\_

8)

8. \_\_\_\_\_

9)

9. \_\_\_\_\_

10)

10. \_\_\_\_\_



Count the number of quarters (25¢), dimes(10¢), nickels(5¢) and pennies(1¢).

Ex)

1)

2)

3)

4)

5)

6)

7)

8)

9)

10)

Answers

|     |          |          |          |          |
|-----|----------|----------|----------|----------|
| Ex. | <u>2</u> | <u>1</u> | <u>2</u> | <u>4</u> |
| 1.  | <u>2</u> | <u>1</u> | <u>3</u> | <u>3</u> |
| 2.  | <u>1</u> | <u>2</u> | <u>3</u> | <u>3</u> |
| 3.  | <u>3</u> | <u>4</u> | <u>1</u> | <u>1</u> |
| 4.  | <u>2</u> | <u>2</u> | <u>3</u> | <u>2</u> |
| 5.  | <u>3</u> | <u>1</u> | <u>2</u> | <u>3</u> |
| 6.  | <u>1</u> | <u>4</u> | <u>2</u> | <u>2</u> |
| 7.  | <u>3</u> | <u>2</u> | <u>2</u> | <u>2</u> |
| 8.  | <u>2</u> | <u>3</u> | <u>1</u> | <u>3</u> |
| 9.  | <u>2</u> | <u>3</u> | <u>3</u> | <u>1</u> |
| 10. | <u>1</u> | <u>3</u> | <u>4</u> | <u>1</u> |



Count the number of quarters (25¢), dimes(10¢), nickels(5¢) and pennies(1¢).

Answers

Ex)

Ex. 1 2 3 3

1)

1. \_\_\_\_\_

2)

2. \_\_\_\_\_

3)

3. \_\_\_\_\_

4)

4. \_\_\_\_\_

5)

5. \_\_\_\_\_

6)

6. \_\_\_\_\_

7)

7. \_\_\_\_\_

8)

8. \_\_\_\_\_

9)

9. \_\_\_\_\_

10)

10. \_\_\_\_\_



Count the number of quarters (25¢), dimes(10¢), nickels(5¢) and pennies(1¢).

Ex)

1)

2)

3)

4)

5)

6)

7)

8)

9)

10)

Answers

|     |          |          |          |          |
|-----|----------|----------|----------|----------|
| Ex. | <u>1</u> | <u>2</u> | <u>3</u> | <u>3</u> |
| 1.  | <u>3</u> | <u>1</u> | <u>3</u> | <u>2</u> |
| 2.  | <u>2</u> | <u>2</u> | <u>2</u> | <u>3</u> |
| 3.  | <u>2</u> | <u>3</u> | <u>1</u> | <u>3</u> |
| 4.  | <u>2</u> | <u>3</u> | <u>2</u> | <u>2</u> |
| 5.  | <u>2</u> | <u>3</u> | <u>2</u> | <u>2</u> |
| 6.  | <u>3</u> | <u>3</u> | <u>1</u> | <u>2</u> |
| 7.  | <u>2</u> | <u>3</u> | <u>2</u> | <u>2</u> |
| 8.  | <u>2</u> | <u>2</u> | <u>3</u> | <u>2</u> |
| 9.  | <u>2</u> | <u>3</u> | <u>2</u> | <u>2</u> |
| 10. | <u>2</u> | <u>2</u> | <u>3</u> | <u>2</u> |





Count the number of quarters (25¢), dimes(10¢), nickels(5¢) and pennies(1¢).

Answers

Ex)

Ex. 1 2 3 3

1)

1. \_\_\_\_\_

2)

2. \_\_\_\_\_

3)

3. \_\_\_\_\_

4)

4. \_\_\_\_\_

5)

5. \_\_\_\_\_

6)

6. \_\_\_\_\_

7)

7. \_\_\_\_\_

8)

8. \_\_\_\_\_

9)

9. \_\_\_\_\_

10)

10. \_\_\_\_\_



Count the number of quarters (25¢), dimes(10¢), nickels(5¢) and pennies(1¢).

Ex)

1)

2)

3)

4)

5)

6)

7)

8)

9)

10)


Answers

|     |          |          |          |          |
|-----|----------|----------|----------|----------|
| Ex. | <u>1</u> | <u>2</u> | <u>3</u> | <u>3</u> |
| 1.  | <u>2</u> | <u>2</u> | <u>3</u> | <u>2</u> |
| 2.  | <u>2</u> | <u>2</u> | <u>2</u> | <u>3</u> |
| 3.  | <u>3</u> | <u>3</u> | <u>1</u> | <u>2</u> |
| 4.  | <u>2</u> | <u>2</u> | <u>3</u> | <u>2</u> |
| 5.  | <u>1</u> | <u>3</u> | <u>3</u> | <u>2</u> |
| 6.  | <u>2</u> | <u>1</u> | <u>3</u> | <u>3</u> |
| 7.  | <u>3</u> | <u>3</u> | <u>2</u> | <u>1</u> |
| 8.  | <u>4</u> | <u>2</u> | <u>2</u> | <u>1</u> |
| 9.  | <u>2</u> | <u>2</u> | <u>3</u> | <u>2</u> |
| 10. | <u>1</u> | <u>5</u> | <u>1</u> | <u>2</u> |




Count the number of quarters (25¢), dimes(10¢), nickels(5¢) and pennies(1¢).

Answers



Ex. 3 1 3 2




1. \_\_\_\_\_



2. \_\_\_\_\_



3. \_\_\_\_\_



4. \_\_\_\_\_



5. \_\_\_\_\_



6. \_\_\_\_\_



7. \_\_\_\_\_



8. \_\_\_\_\_



9. \_\_\_\_\_



10. \_\_\_\_\_



Count the number of quarters (25¢), dimes(10¢), nickels(5¢) and pennies(1¢).

Ex)

1)

2)

3)

4)

5)

6)

7)

8)

9)

10)

Answers

|     |          |          |          |          |
|-----|----------|----------|----------|----------|
| Ex. | <u>3</u> | <u>1</u> | <u>3</u> | <u>2</u> |
| 1.  | <u>2</u> | <u>2</u> | <u>2</u> | <u>3</u> |
| 2.  | <u>2</u> | <u>3</u> | <u>2</u> | <u>2</u> |
| 3.  | <u>1</u> | <u>4</u> | <u>2</u> | <u>2</u> |
| 4.  | <u>1</u> | <u>3</u> | <u>1</u> | <u>4</u> |
| 5.  | <u>1</u> | <u>3</u> | <u>3</u> | <u>2</u> |
| 6.  | <u>1</u> | <u>4</u> | <u>2</u> | <u>2</u> |
| 7.  | <u>3</u> | <u>3</u> | <u>2</u> | <u>1</u> |
| 8.  | <u>3</u> | <u>3</u> | <u>2</u> | <u>1</u> |
| 9.  | <u>2</u> | <u>3</u> | <u>2</u> | <u>2</u> |
| 10. | <u>2</u> | <u>2</u> | <u>3</u> | <u>2</u> |