

Solve each problem.


Answers

1) Victor spent \$10.46 buying some new toys. He bought them using a twenty dollar bill. How much change should he get back?



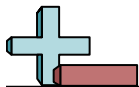
- 1. _____
- 2. _____
- 3. _____

2) Olivia bought a new board game for \$7.90. She gave the cashier a ten dollar bill. How much change should she get back?



3) At the book fair Oliver spent \$12.53 buying books. He gave the cashier a twenty dollar bill. How much change should he get back?






Solve each problem.


1) Victor spent \$10.46 buying some new toys. He bought them using a twenty dollar bill. How much change should he get back?



2) Olivia bought a new board game for \$7.90. She gave the cashier a ten dollar bill. How much change should she get back?



3) At the book fair Oliver spent \$12.53 buying books. He gave the cashier a twenty dollar bill. How much change should he get back?



Answers

1. **C**

2. **C**

3. **C**