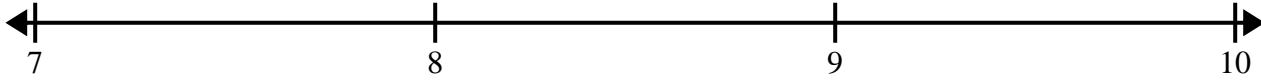





Create and label the line plot using the set of numbers provided.


- 1) $8\frac{2}{4}$ $8\frac{2}{4}$ $8\frac{2}{4}$ $7\frac{3}{4}$ $9\frac{3}{4}$ $8\frac{3}{4}$ $8\frac{3}{4}$ $7\frac{3}{4}$
 $9\frac{2}{4}$ 9 $7\frac{1}{4}$ $8\frac{3}{4}$ $9\frac{3}{4}$ $7\frac{2}{4}$ $7\frac{3}{4}$ $9\frac{2}{4}$




- 2) 7 7 7 9 $9\frac{1}{2}$ $9\frac{1}{2}$ $9\frac{1}{2}$ 8
 8 8 $7\frac{1}{2}$ $8\frac{1}{2}$ 9 $7\frac{1}{2}$ $7\frac{1}{2}$ 9




- 3) 6 6 $8\frac{1}{2}$ 7 $8\frac{1}{2}$ 7 $7\frac{1}{2}$ $8\frac{1}{2}$
 $7\frac{1}{2}$ 7 $6\frac{1}{2}$ 6 8 $6\frac{1}{2}$ 8 $7\frac{1}{2}$



- 4) 6 8 $7\frac{3}{4}$ 7 $6\frac{1}{4}$ $8\frac{2}{4}$ $7\frac{3}{4}$ $8\frac{2}{4}$
 $6\frac{2}{4}$ $6\frac{3}{4}$ 6 8 $8\frac{2}{4}$ $7\frac{2}{4}$ $7\frac{3}{4}$ 7



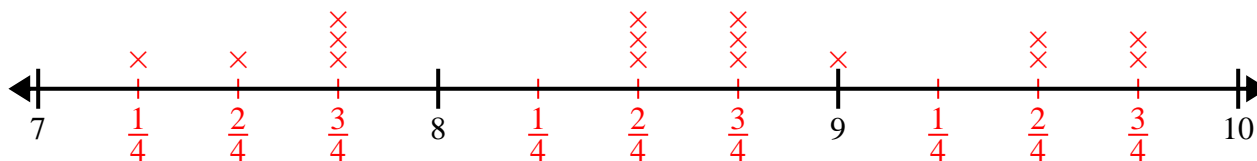
- 5) $8\frac{4}{8}$ $7\frac{2}{8}$ $7\frac{5}{8}$ $7\frac{6}{8}$ $8\frac{2}{8}$ $6\frac{2}{8}$ $7\frac{3}{8}$ $7\frac{3}{8}$
 $6\frac{6}{8}$ $6\frac{5}{8}$ $6\frac{4}{8}$ $8\frac{3}{8}$ 6 $6\frac{2}{8}$ $7\frac{5}{8}$ 8



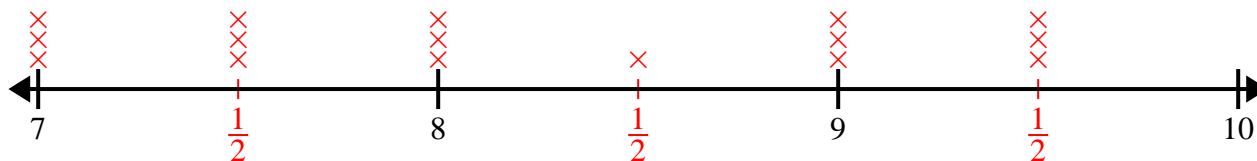


Create and label the line plot using the set of numbers provided.

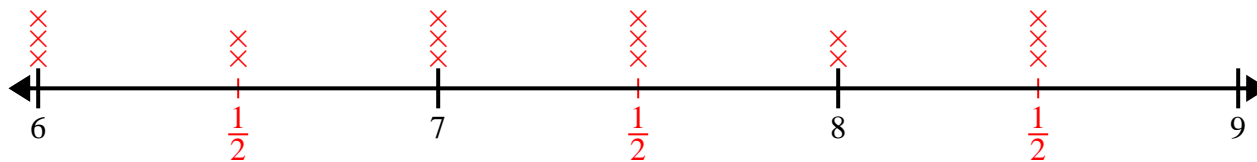
- 1) $8\frac{2}{4}$ $8\frac{2}{4}$ $8\frac{2}{4}$ $7\frac{3}{4}$ $9\frac{3}{4}$ $8\frac{3}{4}$ $8\frac{3}{4}$ $7\frac{3}{4}$
 $9\frac{2}{4}$ 9 $7\frac{1}{4}$ $8\frac{3}{4}$ $9\frac{3}{4}$ $7\frac{2}{4}$ $7\frac{3}{4}$ $9\frac{2}{4}$



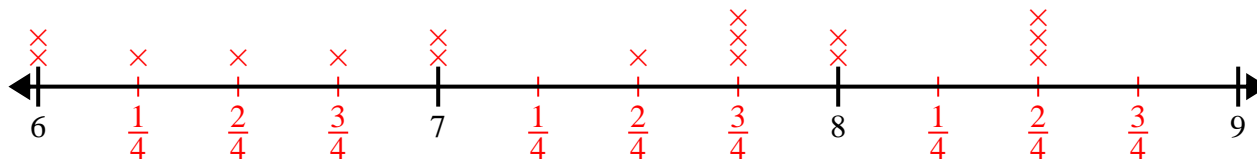
- 2) 7 7 7 9 $9\frac{1}{2}$ $9\frac{1}{2}$ $9\frac{1}{2}$ 8
 8 8 $7\frac{1}{2}$ $8\frac{1}{2}$ 9 $7\frac{1}{2}$ $7\frac{1}{2}$ 9



- 3) 6 6 $8\frac{1}{2}$ 7 $8\frac{1}{2}$ 7 $7\frac{1}{2}$ $8\frac{1}{2}$
 $7\frac{1}{2}$ 7 $6\frac{1}{2}$ 6 8 $6\frac{1}{2}$ 8 $7\frac{1}{2}$



- 4) 6 8 $7\frac{3}{4}$ 7 $6\frac{1}{4}$ $8\frac{2}{4}$ $7\frac{3}{4}$ $8\frac{2}{4}$
 $6\frac{2}{4}$ $6\frac{3}{4}$ 6 8 $8\frac{2}{4}$ $7\frac{2}{4}$ $7\frac{3}{4}$ 7



- 5) $8\frac{4}{8}$ $7\frac{2}{8}$ $7\frac{5}{8}$ $7\frac{6}{8}$ $8\frac{2}{8}$ $6\frac{2}{8}$ $7\frac{3}{8}$ $7\frac{3}{8}$
 $6\frac{6}{8}$ $6\frac{5}{8}$ $6\frac{4}{8}$ $8\frac{3}{8}$ 6 $6\frac{2}{8}$ $7\frac{5}{8}$ 8

