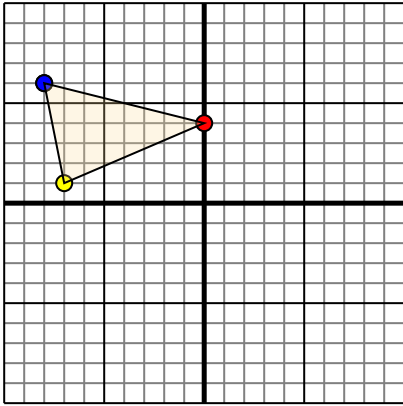




Translate each shape as described.

1)

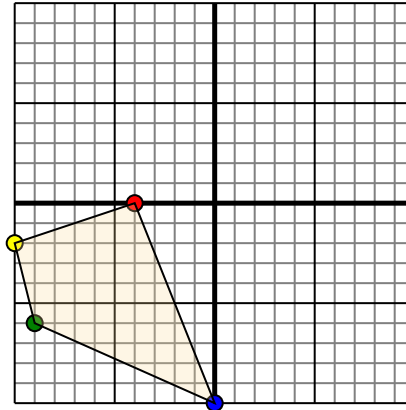


The shape above has the following coordinates:

- A. (0,4)
- B. (-7,1)
- C. (-8,6)

Move the shape 7 units right and 4 units down.

2)

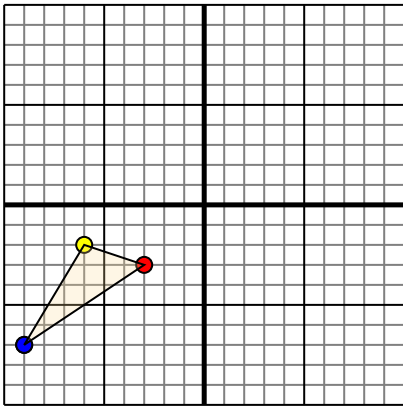


The shape above has the following coordinates:

- A. (-4,0)
- B. (-10,-2)
- C. (-9,-6)
- D. (0,-10)

Move the shape 10 units right and 3 units up.

3)

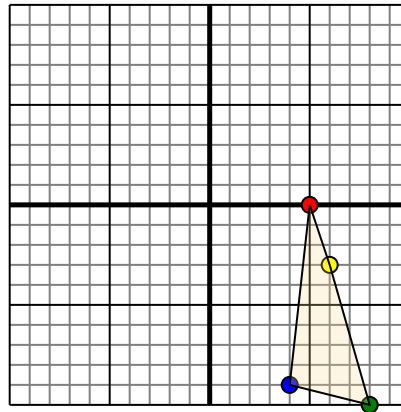


The shape above has the following coordinates:

- A. (-3,-3)
- B. (-6,-2)
- C. (-9,-7)

Move the shape 4 units right and 9 units up.

4)



The shape above has the following coordinates:

- A. (5,0)
- B. (6,-3)
- C. (8,-10)
- D. (4,-9)

Move the shape 5 units left and 9 units up.

Answers

1. _____ [Graph](#)

2. _____ [Graph](#)

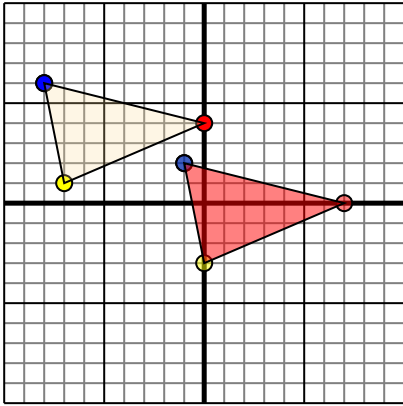
3. _____ [Graph](#)

4. _____ [Graph](#)



Translate each shape as described.

1)

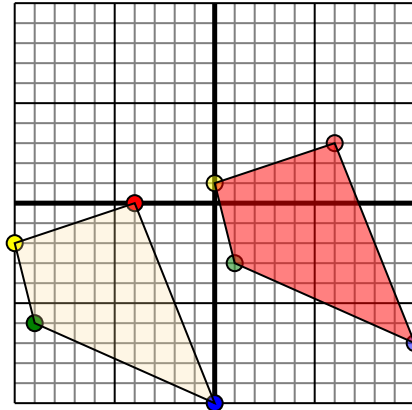


The shape above has the following coordinates:

- A. (0,4)
- B. (-7,1)
- C. (-8,6)

Move the shape 7 units right and 4 units down.

2)

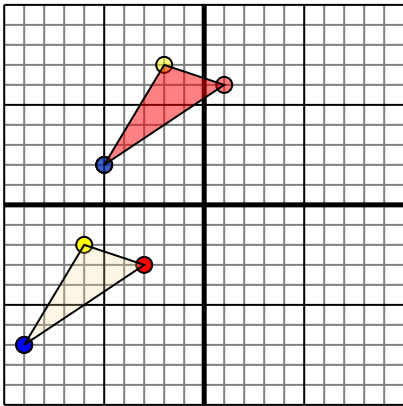


The shape above has the following coordinates:

- A. (-4,0)
- B. (-10,-2)
- C. (-9,-6)
- D. (0,-10)

Move the shape 10 units right and 3 units up.

3)

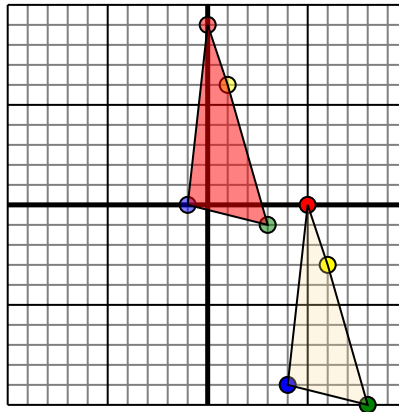


The shape above has the following coordinates:

- A. (-3,-3)
- B. (-6,-2)
- C. (-9,-7)

Move the shape 4 units right and 9 units up.

4)



The shape above has the following coordinates:

- A. (5,0)
- B. (6,-3)
- C. (8,-10)
- D. (4,-9)

Move the shape 5 units left and 9 units up.

Answers

1. **7,0** **0,-3** **-1,2** [Graph](#)
2. **6,3** **0,1** **1,-3** **10,-7** [Graph](#)
3. **1,6** **-2,7** **-5,2** [Graph](#)
4. **0,9** **1,6** **3,-1** **-1,0** [Graph](#)