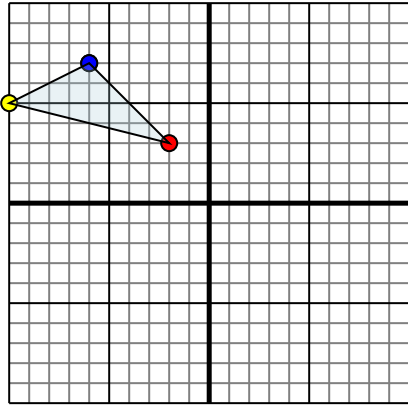




Reflect each shape as described.

1)

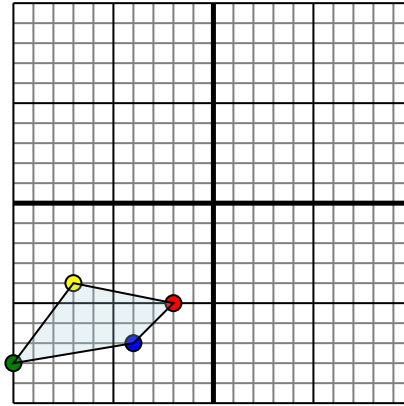


The shape above has the following coordinates:

- A. (-2,3)
- B. (-10,5)
- C. (-6,7)

Reflect the shape over the X axis.

2)

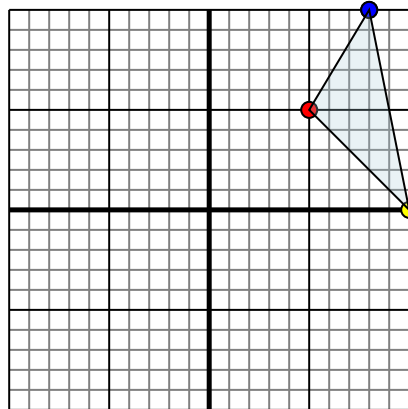


The shape above has the following coordinates:

- A. (-2,-5)
- B. (-7,-4)
- C. (-10,-8)
- D. (-4,-7)

Reflect the shape over the X axis.

3)

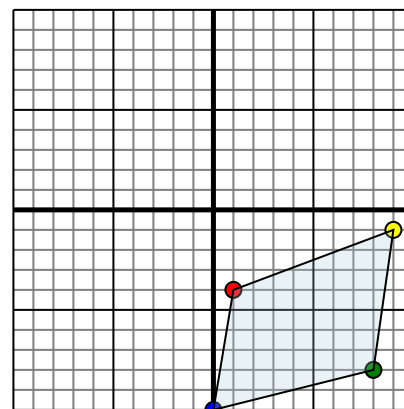


The shape above has the following coordinates:

- A. (5,5)
- B. (10,0)
- C. (8,10)

Reflect the shape over the X axis.

4)



The shape above has the following coordinates:

- A. (1,-4)
- B. (9,-1)
- C. (8,-8)
- D. (0,-10)

Reflect the shape over the X axis.

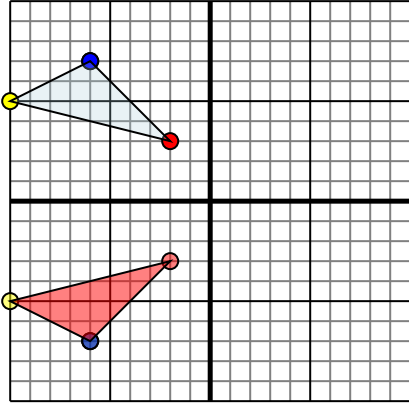
Answers

- 1. _____
- 2. _____
- 3. _____
- 4. _____



Reflect each shape as described.

1)

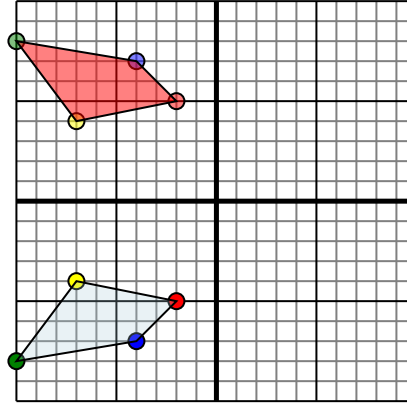


The shape above has the following coordinates:

- A. (-2,3)
- B. (-10,5)
- C. (-6,7)

Reflect the shape over the X axis.

2)

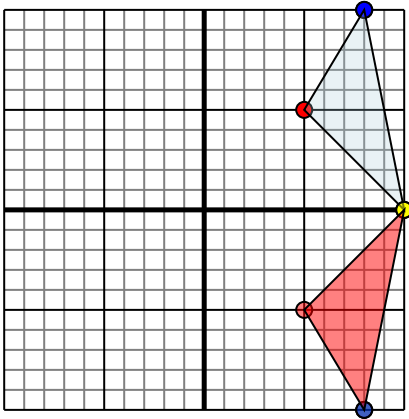


The shape above has the following coordinates:

- A. (-2,-5)
- B. (-7,-4)
- C. (-10,-8)
- D. (-4,-7)

Reflect the shape over the X axis.

3)

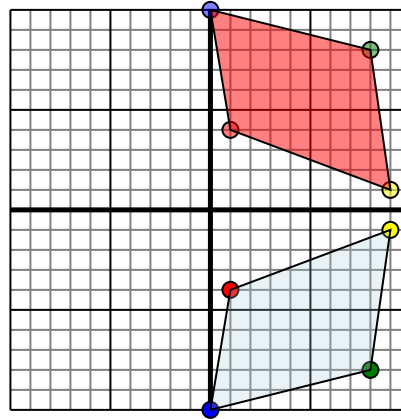


The shape above has the following coordinates:

- A. (5,5)
- B. (10,0)
- C. (8,10)

Reflect the shape over the X axis.

4)



The shape above has the following coordinates:

- A. (1,-4)
- B. (9,-1)
- C. (8,-8)
- D. (0,-10)

Reflect the shape over the X axis.

Answers

1. -2,-3 -10,-5 -6,-7 Graph
2. -2,5 -7,4 -10,8 -4,7 Graph
3. 5,-5 10,0 8,-10 Graph
4. 1,4 9,1 8,8 0,10 Graph