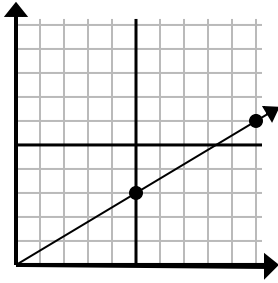




Determine which choice represents a point on the line if it were to continue.

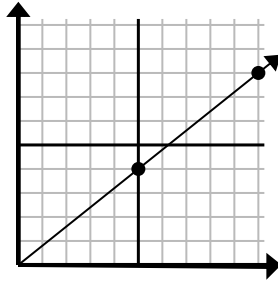
Answers

1)



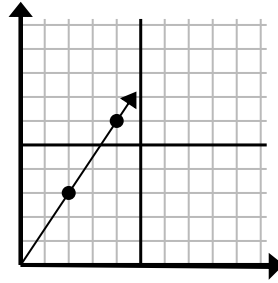
- A. (20 , 12)
- B. (13 , 5)
- C. (35 , 21)
- D. (15 , 9)

2)



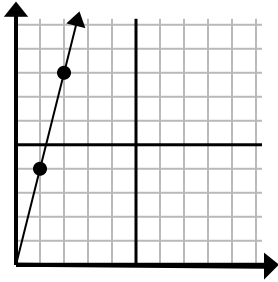
- A. (35 , 28)
- B. (25 , 20)
- C. (11 , 9)
- D. (15 , 12)

3)



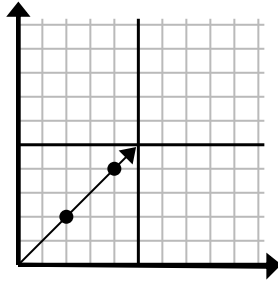
- A. (10 , 15)
- B. (6 , 9)
- C. (5 , 6)
- D. (5 , 4)

4)



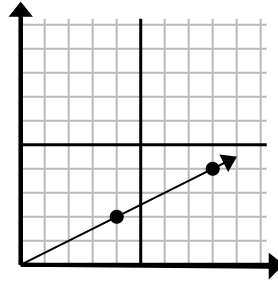
- A. (5 , 9)
- B. (3 , 12)
- C. (6 , 8)
- D. (4 , 16)

5)



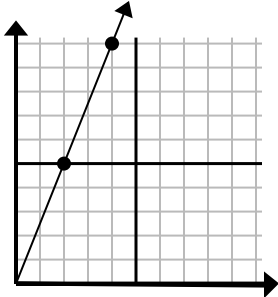
- A. (6 , 6)
- B. (5 , 3)
- C. (7 , 4)
- D. (14 , 14)

6)



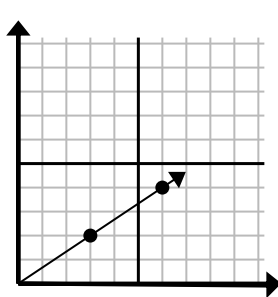
- A. (12 , 6)
- B. (28 , 14)
- C. (12 , 4)
- D. (11 , 3)

7)



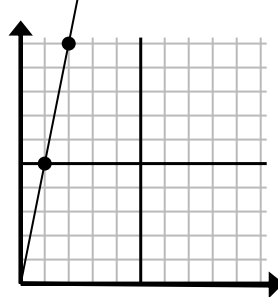
- A. (5 , 10)
- B. (6 , 15)
- C. (9 , 10)
- D. (14 , 35)

8)



- A. (12 , 8)
- B. (9 , 6)
- C. (21 , 14)
- D. (11 , 4)

9)



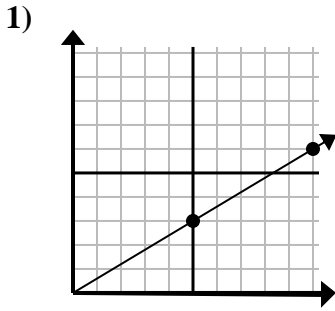
- A. (3 , 15)
- B. (3 , 9)
- C. (5 , 25)
- D. (5 , 7)

1. _____
2. _____
3. _____
4. _____
5. _____
6. _____
7. _____
8. _____
9. _____

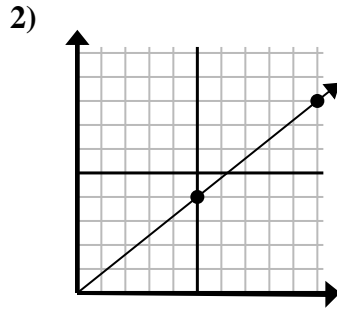


Determine which choice represents a point on the line if it were to continue.

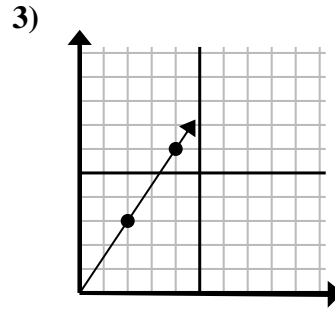
Answers



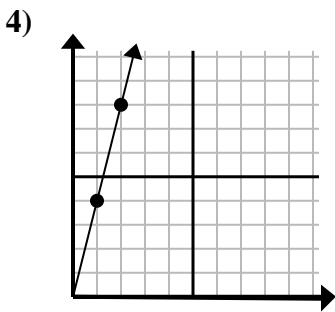
- A. (20 , 12)
- B. (13 , 5)
- C. (35 , 21)
- D. (15 , 9)



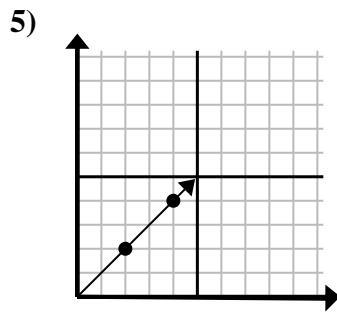
- A. (35 , 28)
- B. (25 , 20)
- C. (11 , 9)
- D. (15 , 12)



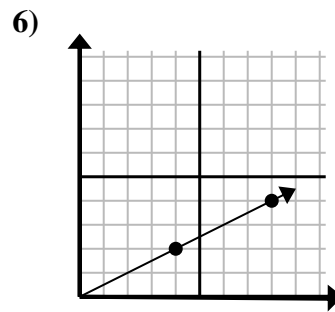
- A. (10 , 15)
- B. (6 , 9)
- C. (5 , 6)
- D. (5 , 4)



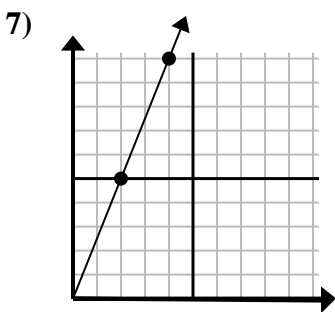
- A. (5 , 9)
- B. (3 , 12)
- C. (6 , 8)
- D. (4 , 16)



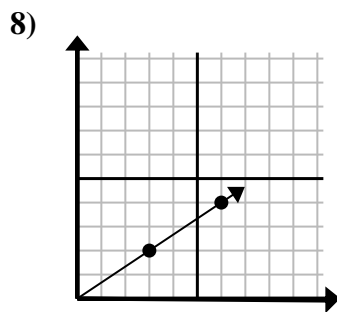
- A. (6 , 6)
- B. (5 , 3)
- C. (7 , 4)
- D. (14 , 14)



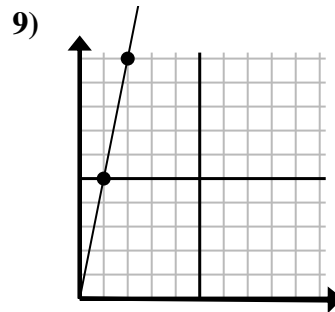
- A. (12 , 6)
- B. (28 , 14)
- C. (12 , 4)
- D. (11 , 3)



- A. (5 , 10)
- B. (6 , 15)
- C. (9 , 10)
- D. (14 , 35)



- A. (12 , 8)
- B. (9 , 6)
- C. (21 , 14)
- D. (11 , 4)



- A. (3 , 15)
- B. (3 , 9)
- C. (5 , 25)
- D. (5 , 7)

- 1. **D**
- 2. **D**
- 3. **B**
- 4. **B**
- 5. **A**
- 6. **A**
- 7. **B**
- 8. **B**
- 9. **A**