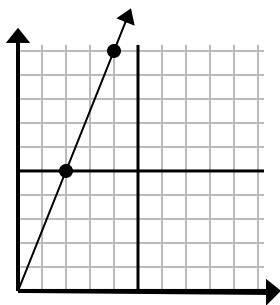




Determine which choice represents a point on the line if it were to continue.

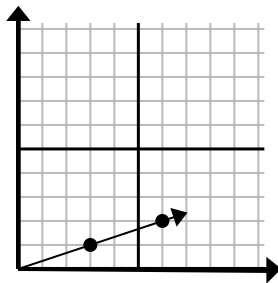
Answers

1)



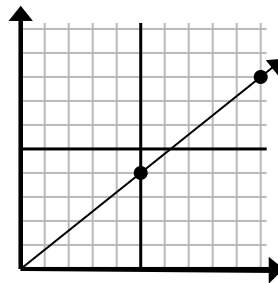
- A. (12 , 30)
B. (8 , 20)
C. (8 , 10)
D. (6 , 15)

2)



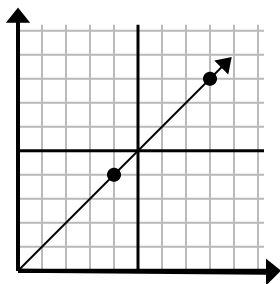
- A. (9 , 3)
B. (10 , 6)
C. (15 , 5)
D. (18 , 6)

3)



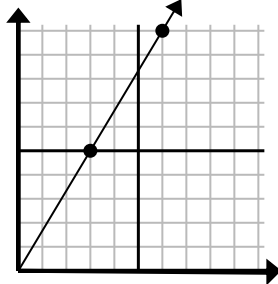
- A. (11 , 9)
B. (15 , 12)
C. (20 , 16)
D. (25 , 20)

4)



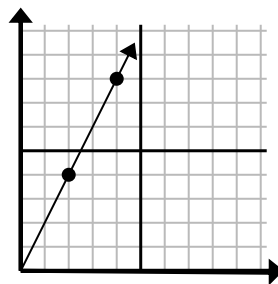
- A. (16 , 16)
B. (12 , 12)
C. (13 , 5)
D. (28 , 28)

5)



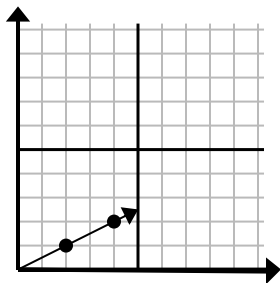
- A. (8 , 10)
B. (15 , 25)
C. (7 , 6)
D. (9 , 15)

6)



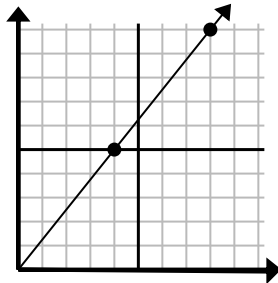
- A. (6 , 5)
B. (6 , 12)
C. (12 , 24)
D. (8 , 16)

7)



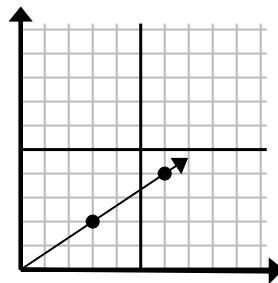
- A. (9 , 2)
B. (6 , 3)
C. (14 , 7)
D. (7 , 4)

8)



- A. (9 , 10)
B. (12 , 15)
C. (20 , 25)
D. (24 , 30)

9)



- A. (18 , 12)
B. (8 , 7)
C. (11 , 5)
D. (9 , 6)

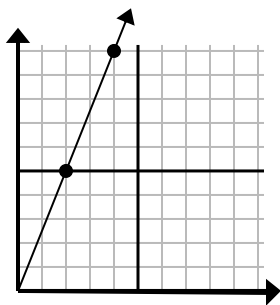
1. _____
2. _____
3. _____
4. _____
5. _____
6. _____
7. _____
8. _____
9. _____



Determine which choice represents a point on the line if it were to continue.

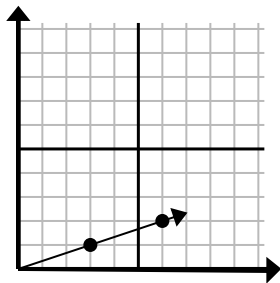
Answers

1)



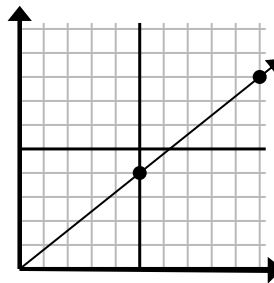
- A. (12 , 30)
B. (8 , 20)
C. (8 , 10)
D. (6 , 15)

2)



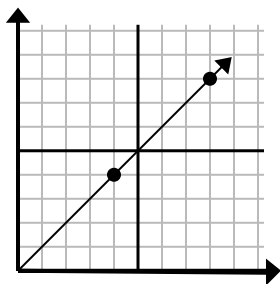
- A. (9 , 3)
B. (10 , 6)
C. (15 , 5)
D. (18 , 6)

3)



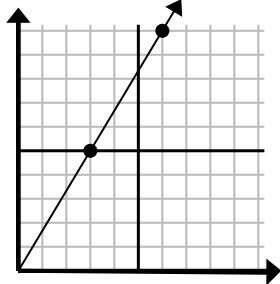
- A. (11 , 9)
B. (15 , 12)
C. (20 , 16)
D. (25 , 20)

4)



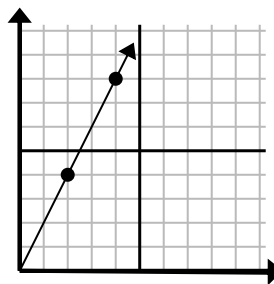
- A. (16 , 16)
B. (12 , 12)
C. (13 , 5)
D. (28 , 28)

5)



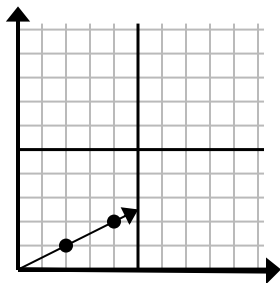
- A. (8 , 10)
B. (15 , 25)
C. (7 , 6)
D. (9 , 15)

6)



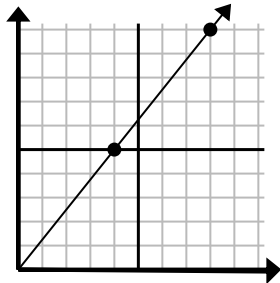
- A. (6 , 5)
B. (6 , 12)
C. (12 , 24)
D. (8 , 16)

7)



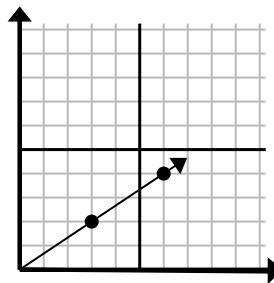
- A. (9 , 2)
B. (6 , 3)
C. (14 , 7)
D. (7 , 4)

8)



- A. (9 , 10)
B. (12 , 15)
C. (20 , 25)
D. (24 , 30)

9)



- A. (18 , 12)
B. (8 , 7)
C. (11 , 5)
D. (9 , 6)

1. **D**
2. **A**
3. **B**
4. **B**
5. **D**
6. **B**
7. **B**
8. **B**
9. **D**