



Fill in the grid using the chart.

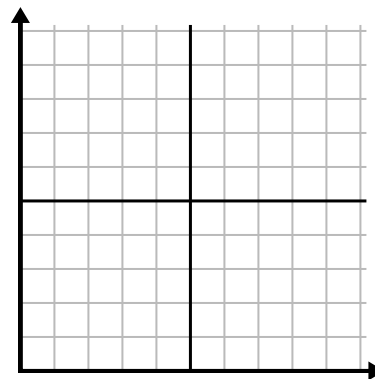
1)

Year	1	2	3	4	5	6
Ink Cartridges Used	14	20	8	2	18	6



2)

Month	1	2	3	4	5
Electric Bill Price	25	75	200	250	175



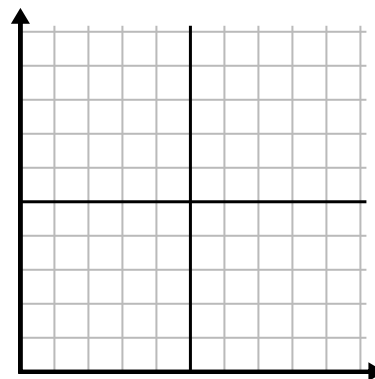
3)

Hour	1	2	3	4	5	6	7
Amount Sold	5	8	9	4	10	1	2



4)

Year	1	2	3	4	5
Boxes of Pens Used	10	8	2	7	4



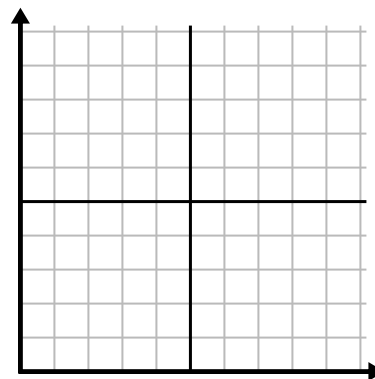
5)

Day	1	2	3	4	5
Youtube Videos Watched	180	90	270	240	120



6)

Week	1	2	3	4	5	6
Hours of TV watched	35	50	5	10	25	20

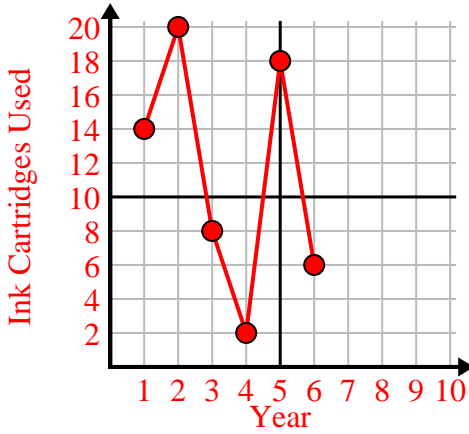




Fill in the grid using the chart.

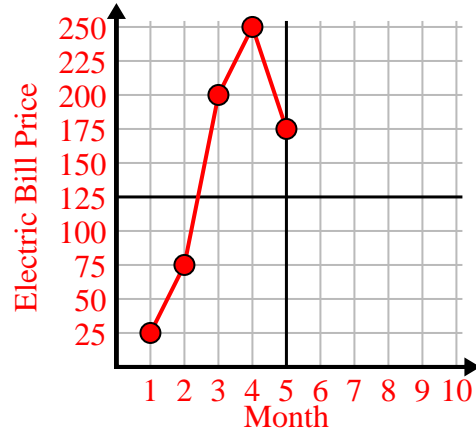
1)

Year	1	2	3	4	5	6
Ink Cartridges Used	14	20	8	2	18	6



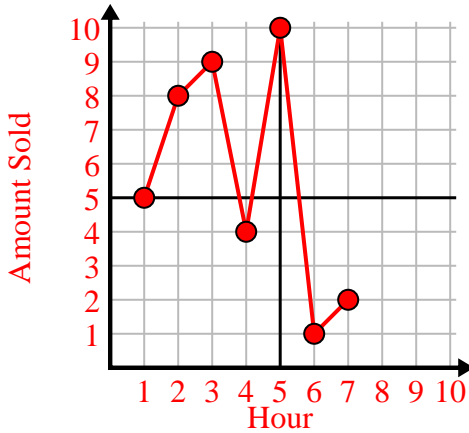
2)

Month	1	2	3	4	5
Electric Bill Price	25	75	200	250	175



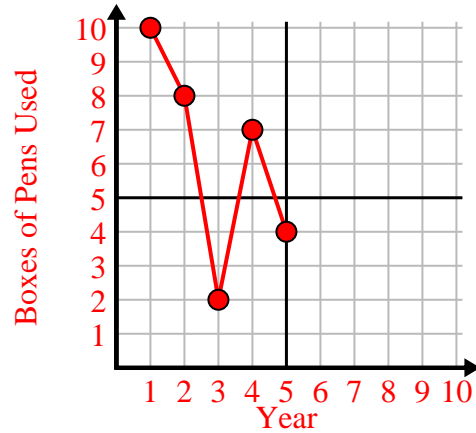
3)

Hour	1	2	3	4	5	6	7
Amount Sold	5	8	9	4	10	1	2



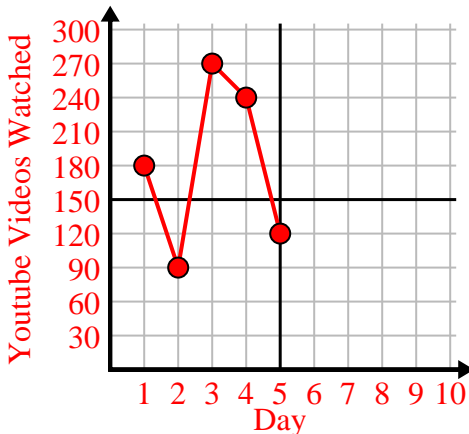
4)

Year	1	2	3	4	5
Boxes of Pens Used	10	8	2	7	4



5)

Day	1	2	3	4	5
Youtube Videos Watched	180	90	270	240	120



6)

Week	1	2	3	4	5	6
Hours of TV watched	35	50	5	10	25	20

