
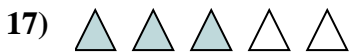
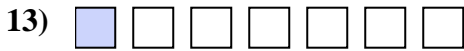
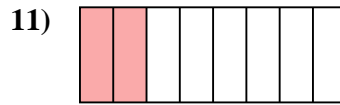
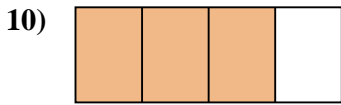
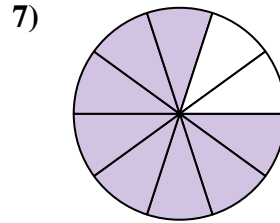
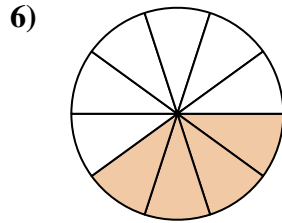
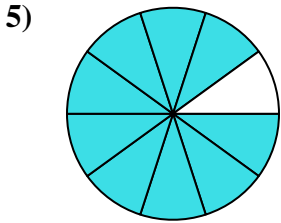

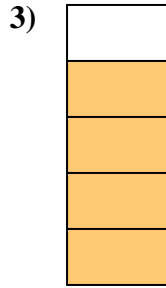
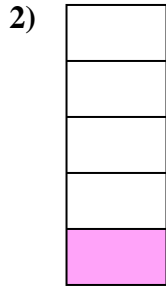





Determine if the shaded amount is 'more', 'less' or 'equal' to half.

Answers



1. _____

2. _____

3. _____

4. _____

5. _____

6. _____

7. _____

8. _____

9. _____

10. _____

11. _____

12. _____

13. _____

14. _____

15. _____

16. _____

17. _____

18. _____

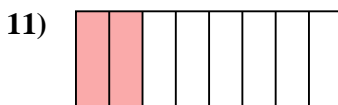
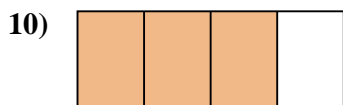
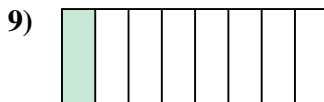
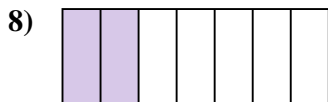
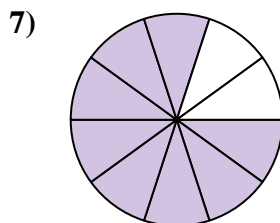
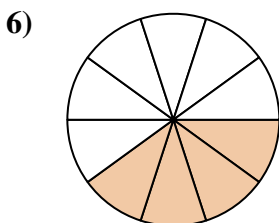
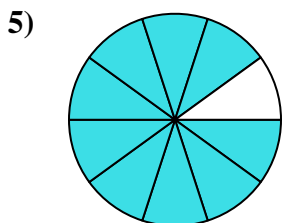

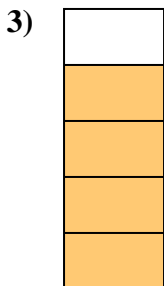
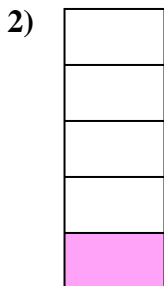

19. _____

20. _____



Determine if the shaded amount is 'more', 'less' or 'equal' to half.

Answers



1. more

2. less

3. more

4. more

5. more

6. less

7. more

8. less

9. less

10. more

11. less

12. more

13. less

14. less

15. less

16. equal

17. more

18. equal

19. equal

20. more