



Use the numberline to solve each problem. The first is marked for you.

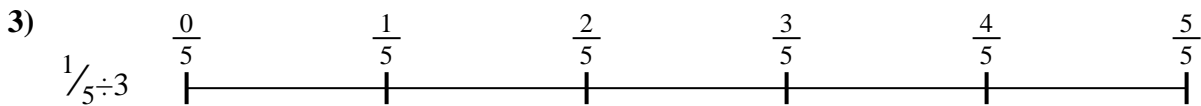
Answers




1. _____



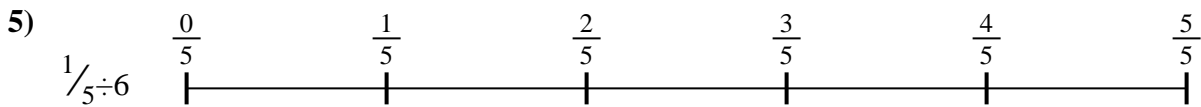
2. _____



3. _____




4. _____



5. _____



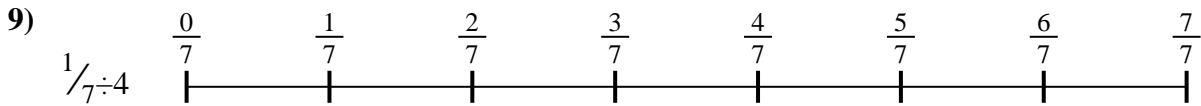
6. _____



7. _____



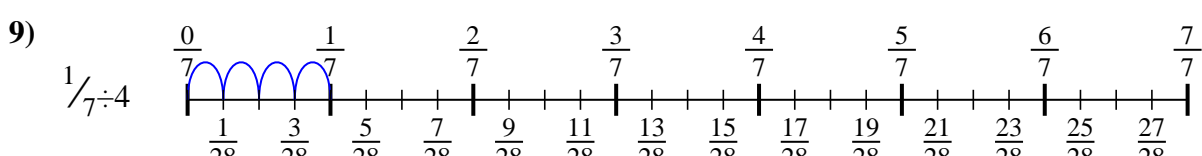
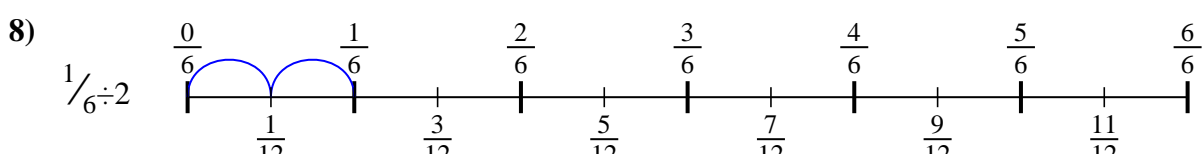
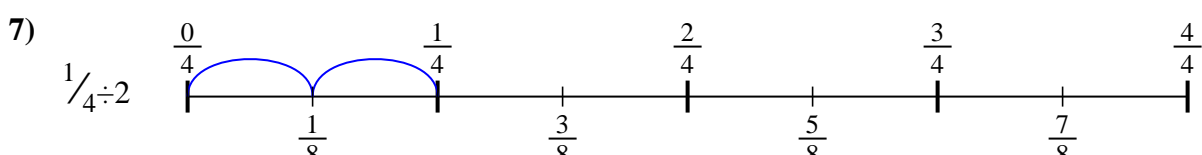
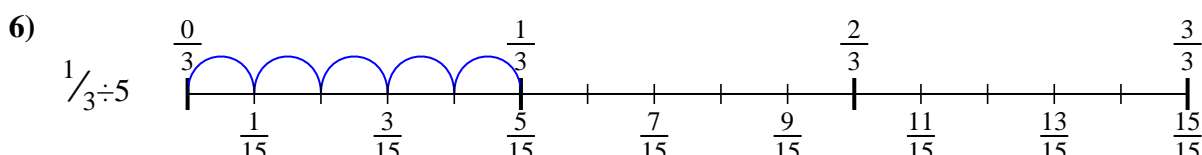
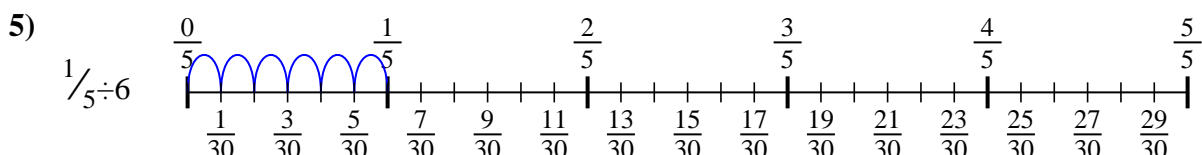
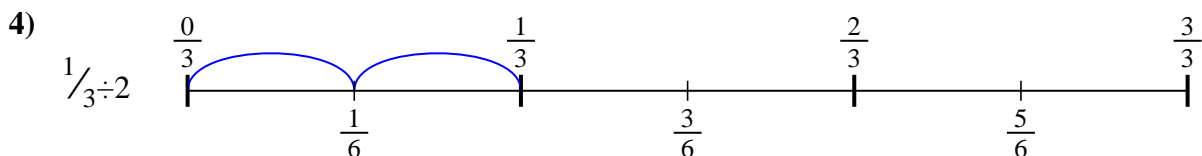
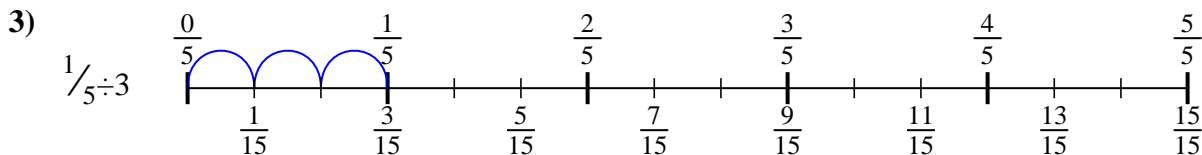
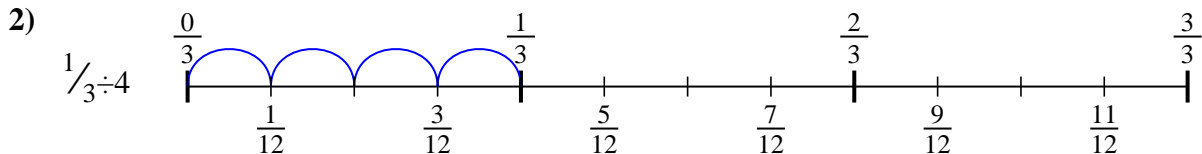
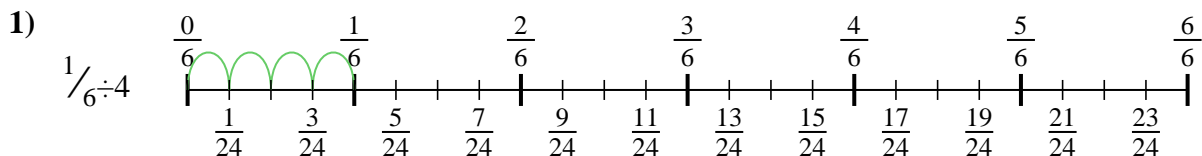
8. _____



9. _____



Use the numberline to solve each problem. The first is marked for you.



Answers

1. $\frac{1}{24}$

2. $\frac{1}{12}$

3. $\frac{1}{15}$

4. $\frac{1}{6}$

5. $\frac{1}{30}$

6. $\frac{1}{15}$

7. $\frac{1}{8}$

8. $\frac{1}{12}$

9. $\frac{1}{28}$



Use the numberline to solve each problem. The first is marked for you.

Answers

$\frac{1}{15}$

$\frac{1}{24}$

$\frac{1}{12}$

$\frac{1}{8}$

$\frac{1}{28}$

$\frac{1}{12}$

$\frac{1}{6}$

$\frac{1}{15}$

$\frac{1}{30}$

1. _____

2. _____

3. _____

4. _____

5. _____

6. _____

7. _____

8. _____

9. _____

