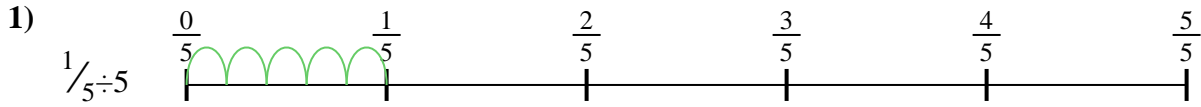


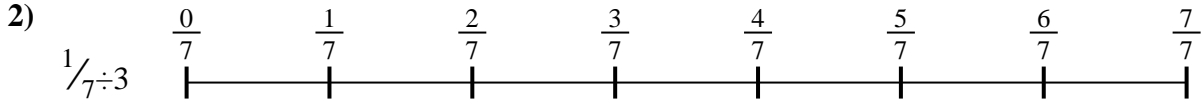


Use the numberline to solve each problem. The first is marked for you.

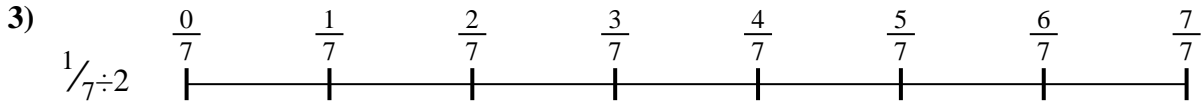
Answers



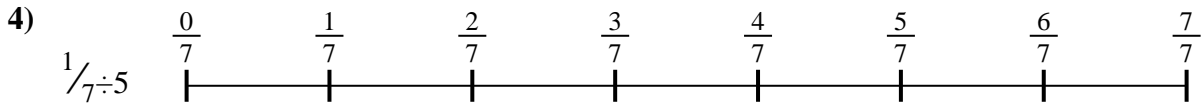
1. _____




2. _____



3. _____




4. _____



5. _____



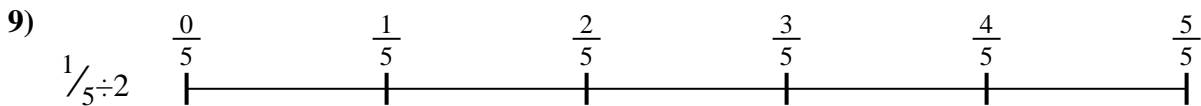
6. _____



7. _____



8. _____

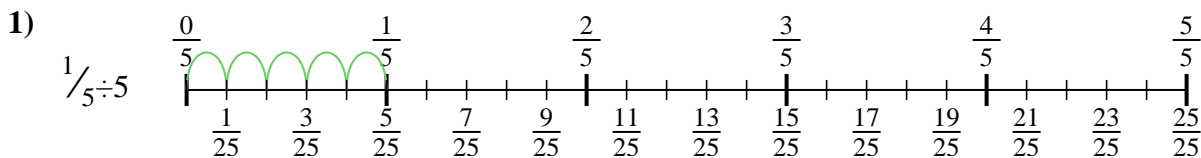


9. _____

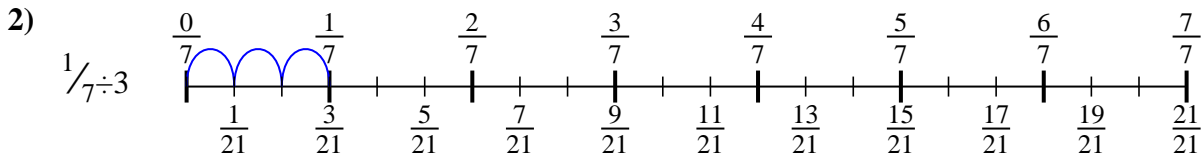


Use the numberline to solve each problem. The first is marked for you.

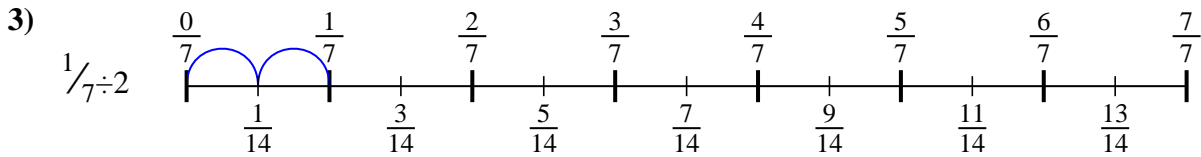
Answers



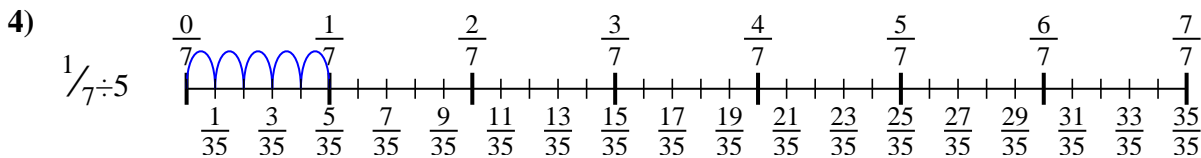
1. $\frac{1}{25}$



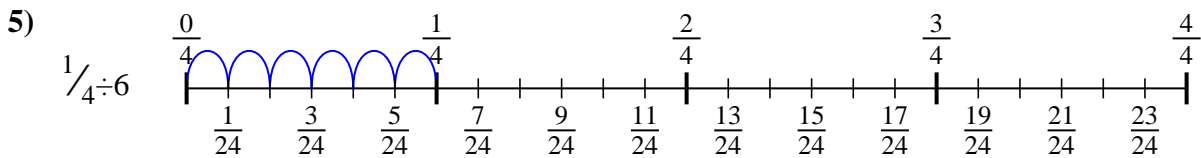
2. $\frac{1}{21}$



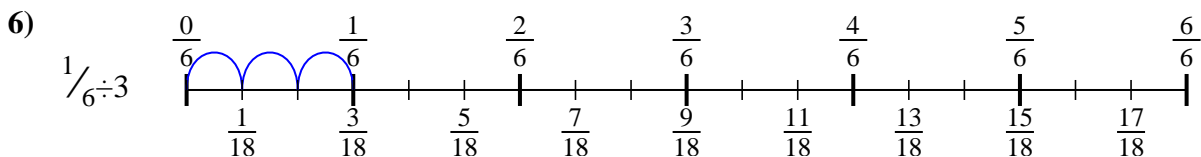
3. $\frac{1}{14}$



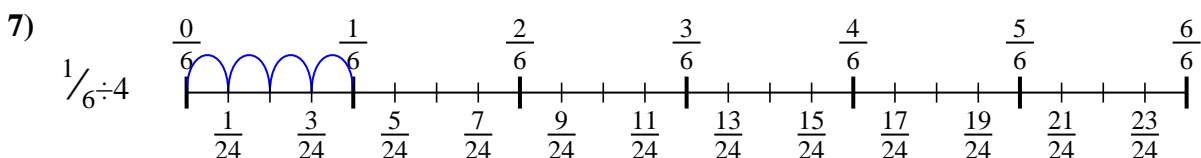
4. $\frac{1}{35}$



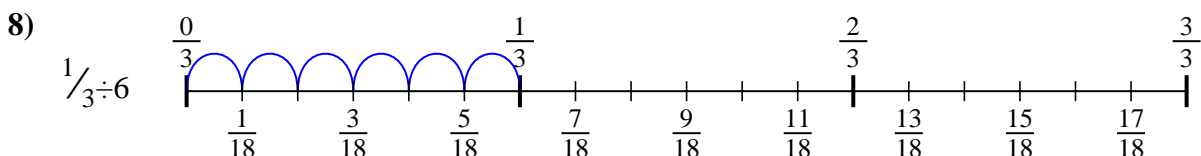
5. $\frac{1}{24}$



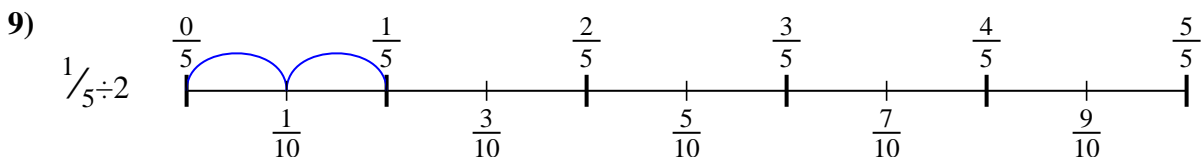
6. $\frac{1}{18}$



7. $\frac{1}{24}$



8. $\frac{1}{18}$



9. $\frac{1}{10}$



Use the numberline to solve each problem. The first is marked for you.

Answers

$\frac{1}{18}$

$\frac{1}{35}$

$\frac{1}{18}$

$\frac{1}{21}$

$\frac{1}{24}$

$\frac{1}{14}$

$\frac{1}{10}$

$\frac{1}{25}$

$\frac{1}{24}$

1. _____

2. _____

3. _____

4. _____

5. _____

6. _____

7. _____

8. _____

9. _____

