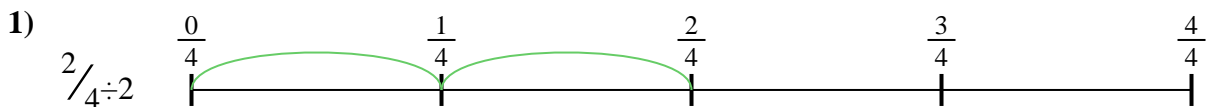


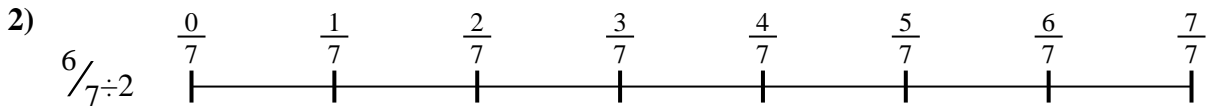


Use the numberline to solve each problem. The first is marked for you.

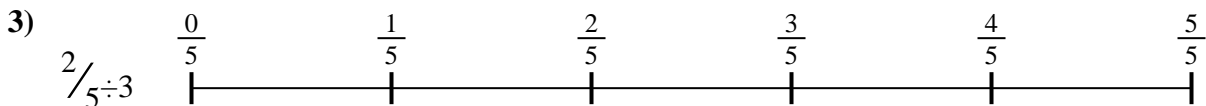
**Answers**




1. \_\_\_\_\_



2. \_\_\_\_\_



3. \_\_\_\_\_




4. \_\_\_\_\_



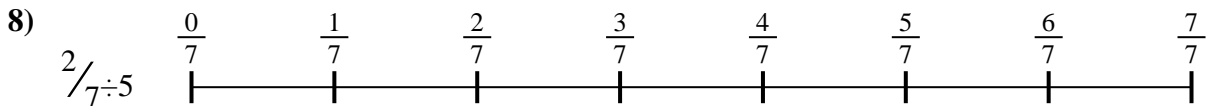
5. \_\_\_\_\_



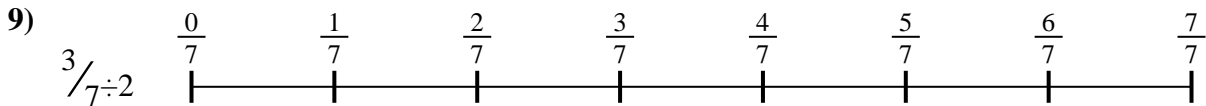
6. \_\_\_\_\_



7. \_\_\_\_\_



8. \_\_\_\_\_

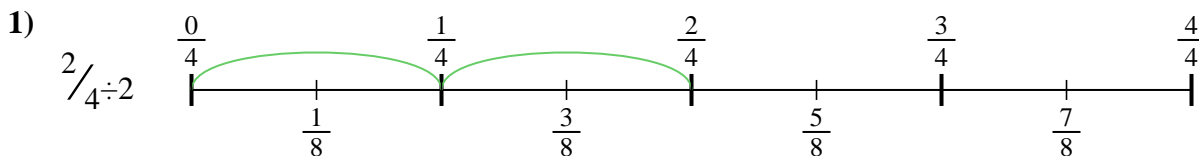


9. \_\_\_\_\_

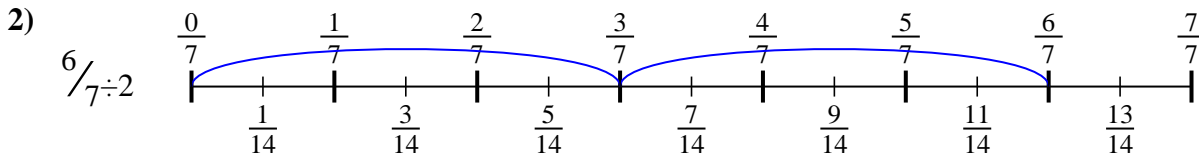


Use the numberline to solve each problem. The first is marked for you.

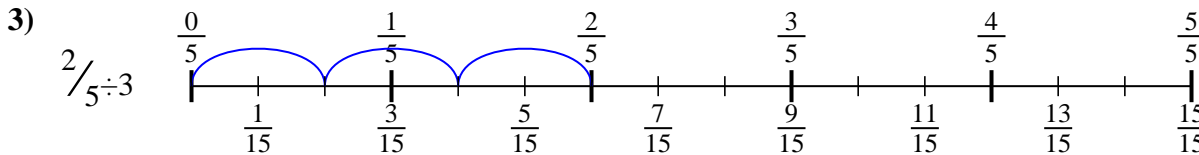
**Answers**



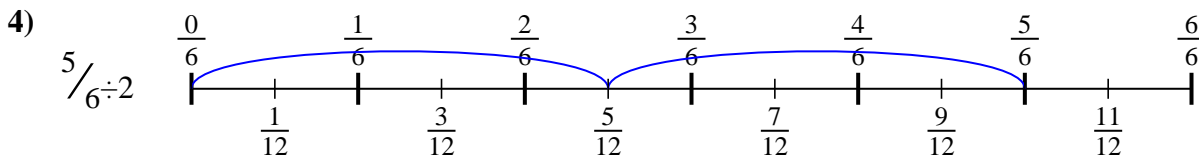
1.  $\frac{2}{8}$



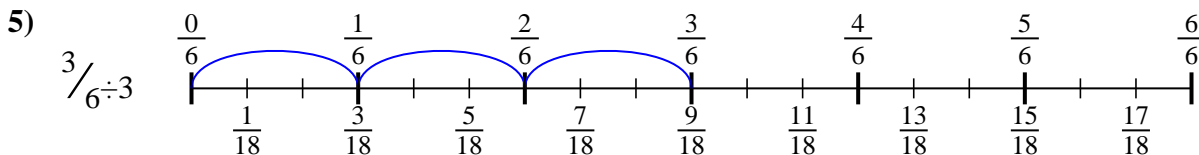
2.  $\frac{6}{14}$



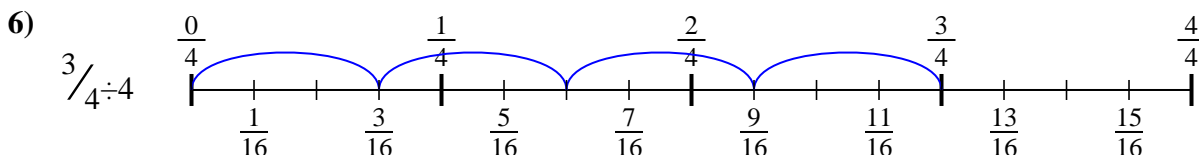
3.  $\frac{2}{15}$



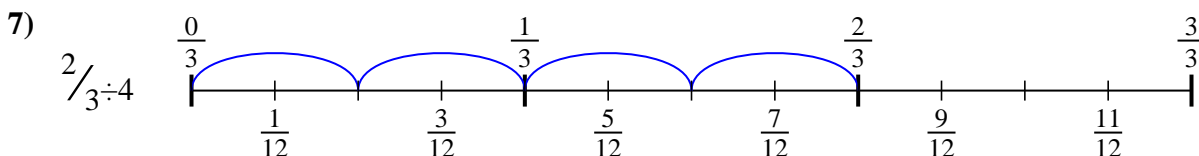
4.  $\frac{5}{12}$



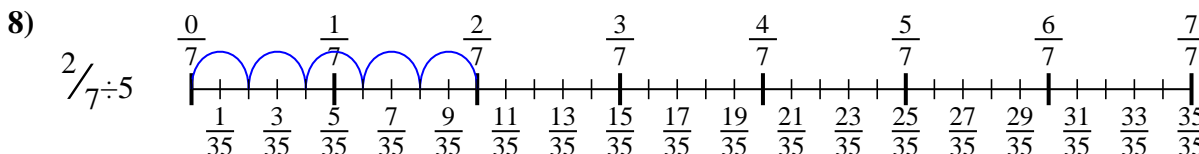
5.  $\frac{3}{18}$



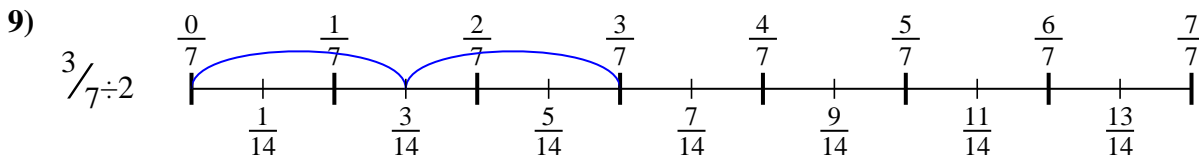
6.  $\frac{3}{16}$



7.  $\frac{2}{12}$



8.  $\frac{2}{35}$



9.  $\frac{3}{14}$



Use the numberline to solve each problem. The first is marked for you.

**Answers**

$\frac{2}{15}$

$\frac{2}{8}$

$\frac{2}{35}$

$\frac{5}{12}$

$\frac{2}{12}$

$\frac{3}{18}$

$\frac{6}{14}$

$\frac{3}{14}$

$\frac{3}{16}$

1. \_\_\_\_\_
2. \_\_\_\_\_
3. \_\_\_\_\_
4. \_\_\_\_\_
5. \_\_\_\_\_
6. \_\_\_\_\_
7. \_\_\_\_\_
8. \_\_\_\_\_
9. \_\_\_\_\_

