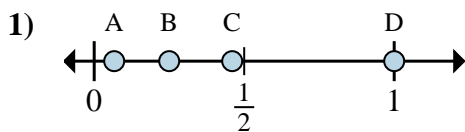




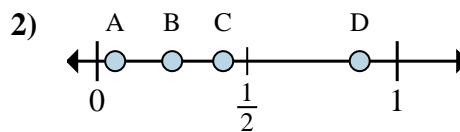
Determine which letter best shows the location of the fraction.

**Answers**



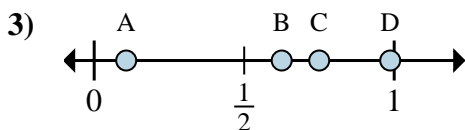
a. Which letter best shows  $\frac{4}{4}$ ?

b. Which letter best shows  $\frac{1}{4}$ ?



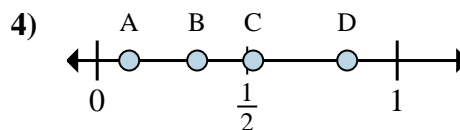
a. Which letter best shows  $\frac{7}{8}$ ?

b. Which letter best shows  $\frac{2}{8}$ ?



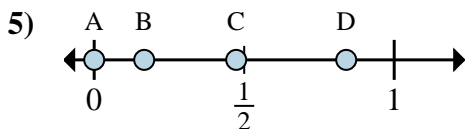
a. Which letter best shows  $\frac{5}{8}$ ?

b. Which letter best shows  $\frac{6}{8}$ ?



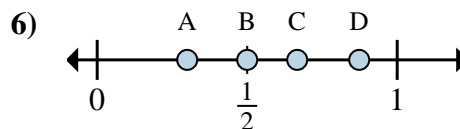
a. Which letter best shows  $\frac{5}{6}$ ?

b. Which letter best shows  $\frac{2}{6}$ ?



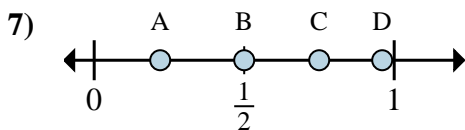
a. Which letter best shows  $\frac{0}{6}$ ?

b. Which letter best shows  $\frac{1}{6}$ ?



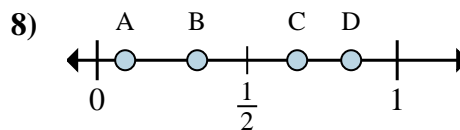
a. Which letter best shows  $\frac{3}{6}$ ?

b. Which letter best shows  $\frac{4}{6}$ ?



a. Which letter best shows  $\frac{3}{4}$ ?

b. Which letter best shows  $\frac{2}{4}$ ?



a. Which letter best shows  $\frac{2}{3}$ ?

b. Which letter best shows  $\frac{1}{3}$ ?

1. \_\_\_\_\_

2. \_\_\_\_\_

3. \_\_\_\_\_

4. \_\_\_\_\_

5. \_\_\_\_\_

6. \_\_\_\_\_

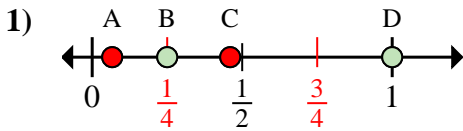
7. \_\_\_\_\_

8. \_\_\_\_\_

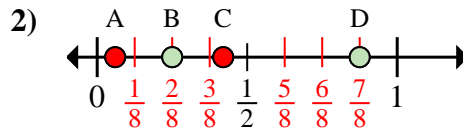


Determine which letter best shows the location of the fraction.

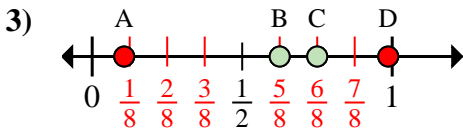
**Answers**



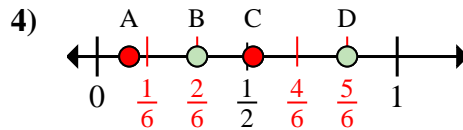
- a. Which letter best shows  $\frac{4}{4}$ ?
- b. Which letter best shows  $\frac{1}{4}$ ?



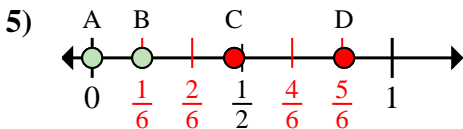
- a. Which letter best shows  $\frac{7}{8}$ ?
- b. Which letter best shows  $\frac{2}{8}$ ?



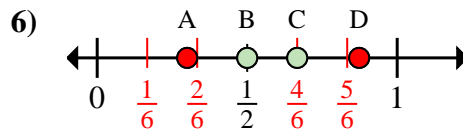
- a. Which letter best shows  $\frac{5}{8}$ ?
- b. Which letter best shows  $\frac{6}{8}$ ?



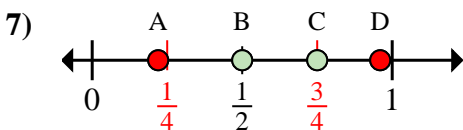
- a. Which letter best shows  $\frac{5}{6}$ ?
- b. Which letter best shows  $\frac{2}{6}$ ?



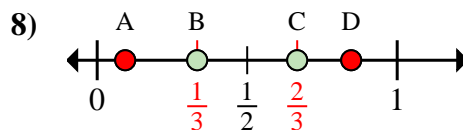
- a. Which letter best shows  $\frac{0}{6}$ ?
- b. Which letter best shows  $\frac{1}{6}$ ?



- a. Which letter best shows  $\frac{3}{6}$ ?
- b. Which letter best shows  $\frac{4}{6}$ ?



- a. Which letter best shows  $\frac{3}{4}$ ?
- b. Which letter best shows  $\frac{2}{4}$ ?



- a. Which letter best shows  $\frac{2}{3}$ ?
- b. Which letter best shows  $\frac{1}{3}$ ?

- 1.   D     B
- 2.   D     B
- 3.   B     C
- 4.   D     B
- 5.   A     B
- 6.   B     C
- 7.   C     B
- 8.   C     B