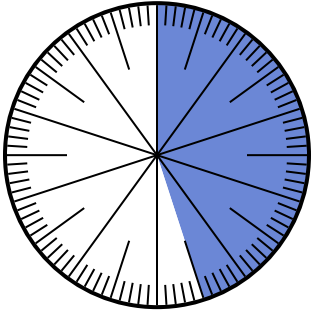




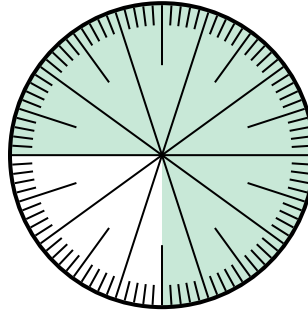
Solve each problem.

- 1) Which choice represents the shaded portion of the number wheel?



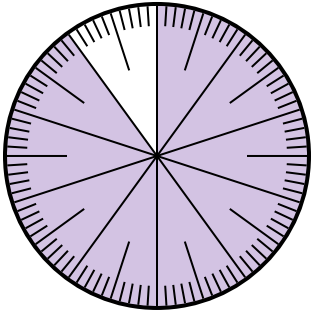
- A.  $\frac{45}{100}$       B.  $\frac{55}{45}$   
 C.  $\frac{45}{55}$       D.  $\frac{4.5}{100}$

- 2) Which choice represents the shaded portion of the number wheel?



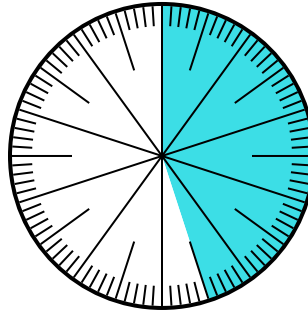
- A.  $\frac{0.75}{100}$       B. 0.75  
 C.  $\frac{7.50}{100}$       D.  $\frac{7.5}{100}$

- 3) Which choice represents the shaded portion of the number wheel?



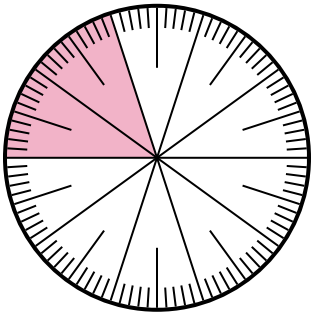
- A. 90      B. 0.090  
 C.  $\frac{90}{100}$       D.  $\frac{9}{100}$

- 4) Which choice represents the un-shaded portion of the number wheel?



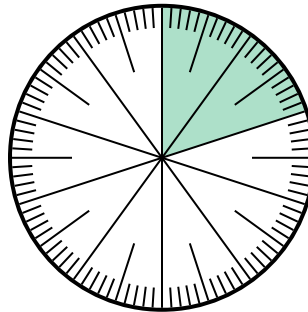
- A. 5.5      B. 55  
 C.  $\frac{5.5}{100}$       D.  $\frac{55}{100}$

- 5) Which choice represents the un-shaded portion of the number wheel?



- A.  $\frac{20}{80}$       B. 0.80  
 C.  $\frac{8}{100}$       D. 8

- 6) Which choice represents the un-shaded portion of the number wheel?



- A. 80      B. 8  
 C.  $\frac{0.8}{100}$       D.  $\frac{80}{100}$

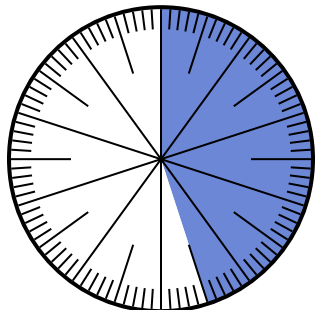
**Answers**

1. \_\_\_\_\_  
 2. \_\_\_\_\_  
 3. \_\_\_\_\_  
 4. \_\_\_\_\_  
 5. \_\_\_\_\_  
 6. \_\_\_\_\_



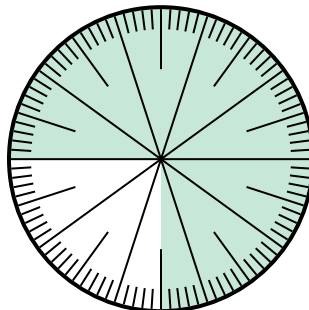
Solve each problem.

1) Which choice represents the shaded portion of the number wheel?



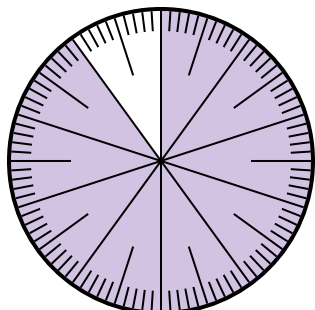
- A.  $\frac{45}{100}$       B.  $\frac{55}{45}$   
 C.  $\frac{45}{55}$       D.  $\frac{4.5}{100}$

2) Which choice represents the shaded portion of the number wheel?



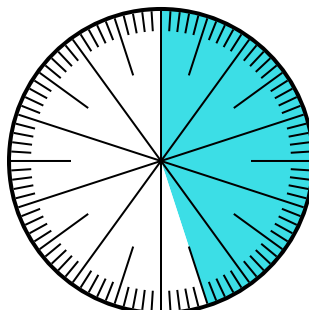
- A.  $\frac{0.75}{100}$       B. 0.75  
 C.  $\frac{7.50}{100}$       D.  $\frac{7.5}{100}$

3) Which choice represents the shaded portion of the number wheel?



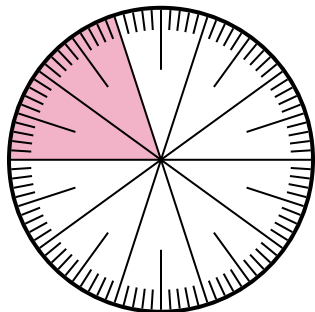
- A. 90      B. 0.090  
 C.  $\frac{90}{100}$       D.  $\frac{9}{100}$

4) Which choice represents the un-shaded portion of the number wheel?



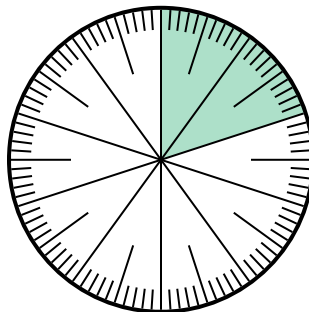
- A. 5.5      B. 55  
 C.  $\frac{5.5}{100}$       D.  $\frac{55}{100}$

5) Which choice represents the un-shaded portion of the number wheel?



- A.  $\frac{20}{80}$       B. 0.80  
 C.  $\frac{8}{100}$       D. 8

6) Which choice represents the un-shaded portion of the number wheel?



- A. 80      B. 8  
 C.  $\frac{0.8}{100}$       D.  $\frac{80}{100}$

**Answers**

1.   **A**    
 2.   **B**    
 3.   **C**    
 4.   **D**    
 5.   **B**    
 6.   **D**