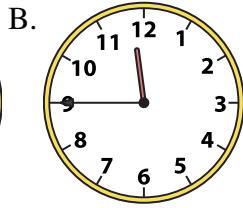
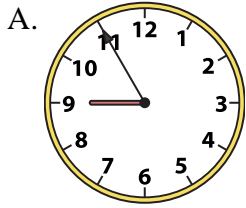




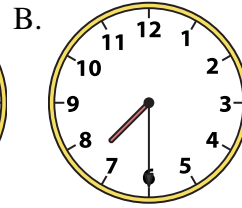
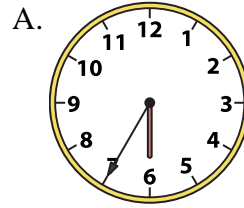
Determine which clock accurately shows the time.

Answers


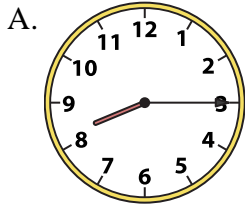
1) 11:45



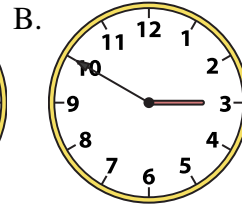
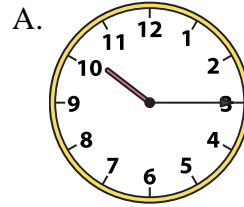
2) 7:30




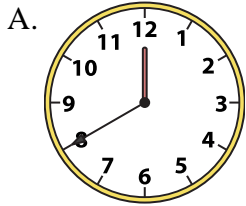
3) 8:15



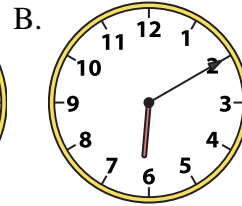
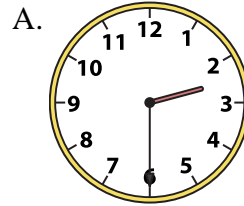
4) 10:15




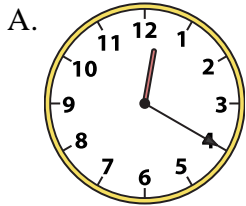
5) 8:00



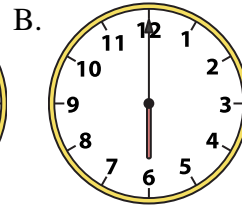
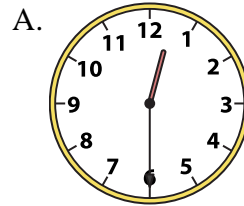
6) 2:30




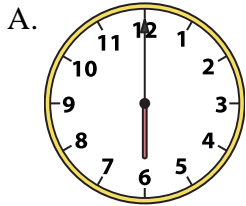
7) 4:00



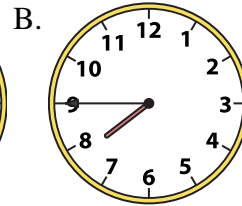
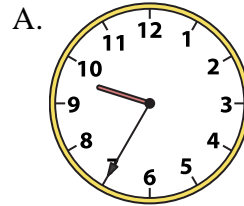
8) 12:30



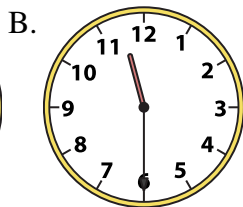
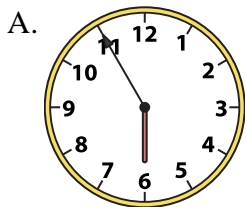
9) 12:30



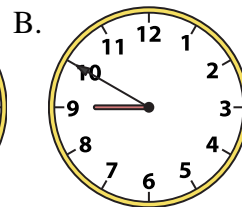
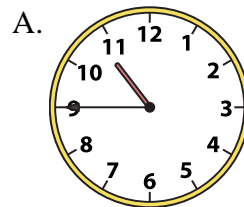
10) 7:45



11) 11:30



12) 10:45



1. _____
2. _____
3. _____
4. _____
5. _____
6. _____
7. _____
8. _____
9. _____
10. _____
11. _____
12. _____

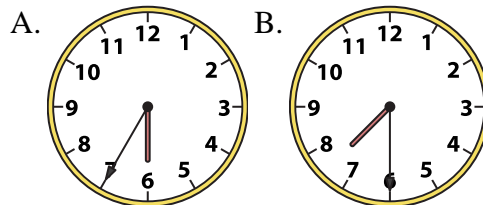
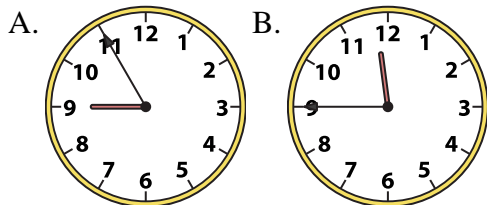


Determine which clock accurately shows the time.

Answers

1) 11:45

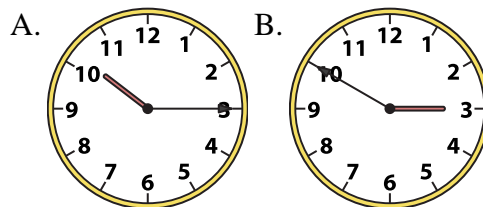
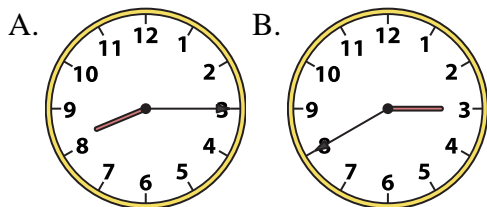
2) 7:30



- 1. **B**
- 2. **B**
- 3. **A**

3) 8:15

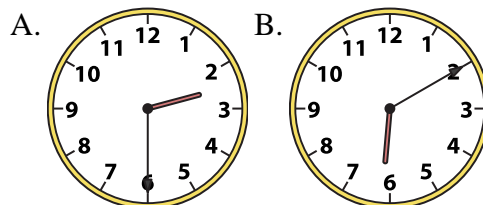
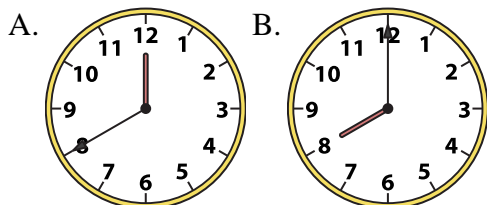
4) 10:15



- 4. **A**
- 5. **B**
- 6. **A**

5) 8:00

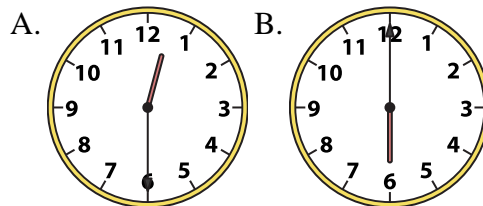
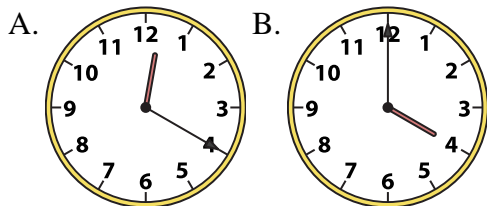
6) 2:30



- 7. **B**
- 8. **A**
- 9. **B**

7) 4:00

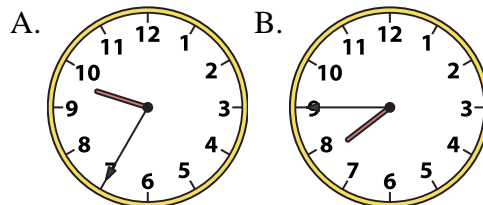
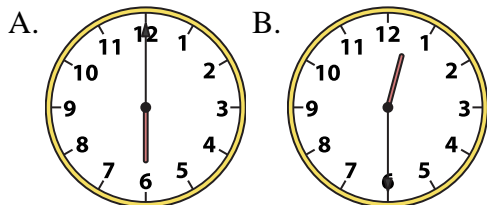
8) 12:30



- 10. **B**
- 11. **B**
- 12. **A**

9) 12:30

10) 7:45



11) 11:30

12) 10:45

