




Solve each problem.

Ex) Express the stars as a fraction of the entire set.



1) Express the pentagons as a fraction of the entire set.




2) Express the hearts as a fraction of the entire set.



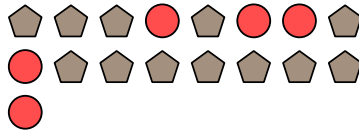
3) Express the pentagons as a fraction of the entire set.




4) Express the stars as a fraction of the entire set.



5) Express the circles as a fraction of the entire set.



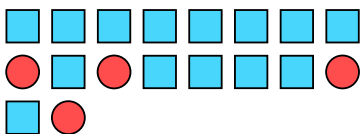
6) Express the pentagons as a fraction of the entire set.



7) Express the triangles as a fraction of the entire set.



8) Express the squares as a fraction of the entire set.



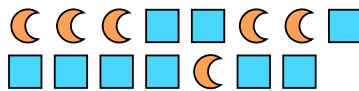
9) Express the stars as a fraction of the entire set.



10) Express the moons as a fraction of the entire set.



11) Express the moons as a fraction of the entire set.



Answers

Ex. $\frac{15}{25}$

1. $\frac{8}{20}$

2. $\frac{10}{12}$

3. $\frac{11}{16}$

4. $\frac{3}{13}$

5. $\frac{5}{17}$

6. $\frac{14}{29}$

7. $\frac{8}{14}$

8. $\frac{14}{18}$

9. $\frac{7}{12}$

10. $\frac{8}{13}$

11. $\frac{6}{15}$