




Solve each problem.


Ex) Express the moons as a fraction of the entire set.




1) Express the moons as a fraction of the entire set.



2) Express the hearts as a fraction of the entire set.



3) Express the triangles as a fraction of the entire set.



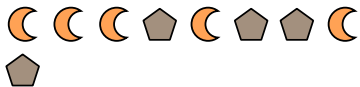
4) Express the stars as a fraction of the entire set.



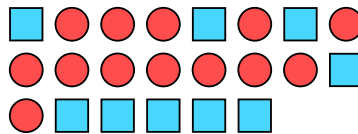
5) Express the stars as a fraction of the entire set.



6) Express the pentagons as a fraction of the entire set.



7) Express the circles as a fraction of the entire set.



8) Express the stars as a fraction of the entire set.



9) Express the triangles as a fraction of the entire set.



10) Express the stars as a fraction of the entire set.



11) Express the stars as a fraction of the entire set.



Answers

Ex. $\frac{5}{15}$

1. $\frac{14}{27}$

2. $\frac{11}{18}$

3. $\frac{14}{29}$

4. $\frac{8}{11}$

5. $\frac{2}{5}$

6. $\frac{4}{9}$

7. $\frac{13}{22}$

8. $\frac{15}{22}$

9. $\frac{10}{18}$

10. $\frac{2}{6}$

11. $\frac{2}{13}$