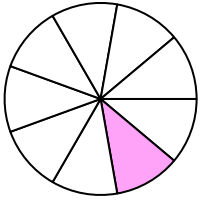


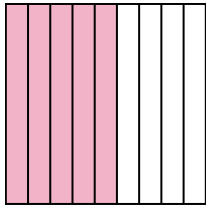


Write the shaded amount in word form.


Ex)



1)



2)



Answers

Ex. one-ninth

1. _____

2. _____

3. _____

4. _____

5. _____

6. _____

7. _____

8. _____

9. _____

10. _____

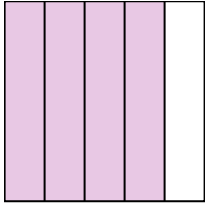
11. _____

12. _____

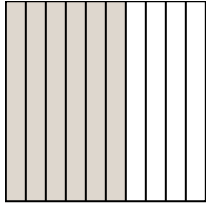
13. _____

14. _____


3)



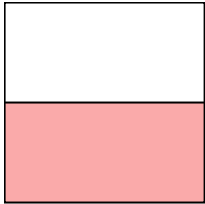
4)



5)




6)




7)



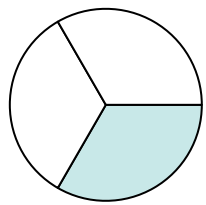
8)




9)



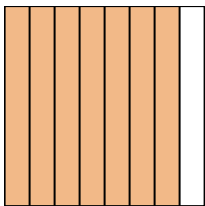
10)



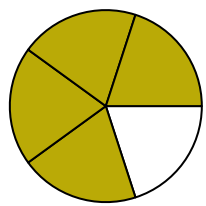
11)



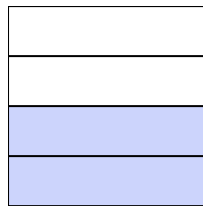
12)



13)



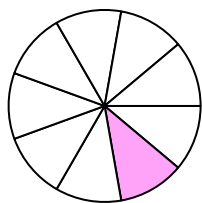
14)



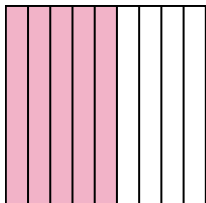


Write the shaded amount in word form.


Ex)



1)



2)



Answers

Ex. one-ninth

1. five-ninths

2. one-half

3. four-fifths

4. six-tenths

5. two-sixths

6. one-half

7. two-fourths

8. four-sevenths

9. four-sixths

10. one-third

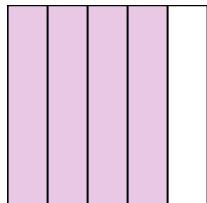
11. one-eighth

12. seven-eighths

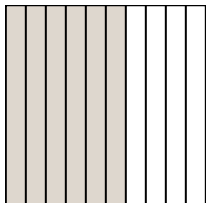
13. four-fifths

14. two-fourths

3)



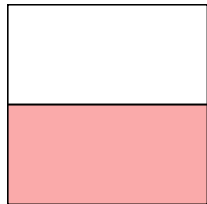
4)




5)




6)




7)



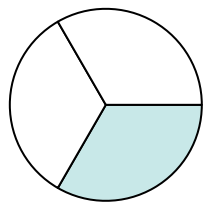
8)




9)



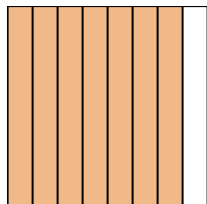
10)



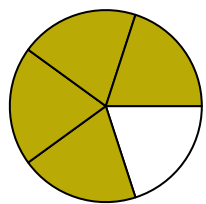
11)



12)



13)



14)

