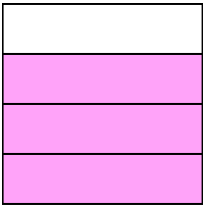





Write the shaded amount as a fraction.

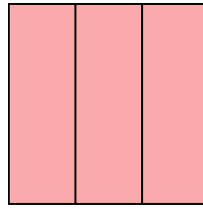
Ex)



1)



2)



**Answers**

Ex.  $\frac{3}{4}$

1. \_\_\_\_\_

2. \_\_\_\_\_

3. \_\_\_\_\_

4. \_\_\_\_\_

5. \_\_\_\_\_

6. \_\_\_\_\_

7. \_\_\_\_\_

8. \_\_\_\_\_

9. \_\_\_\_\_

10. \_\_\_\_\_


11. \_\_\_\_\_

12. \_\_\_\_\_

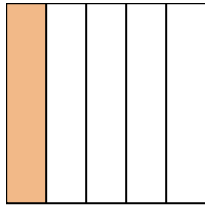
13. \_\_\_\_\_

14. \_\_\_\_\_

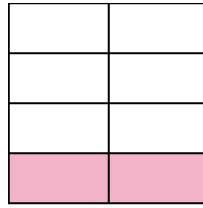
3)



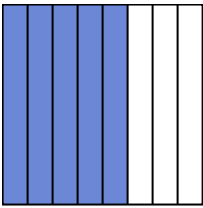
4)



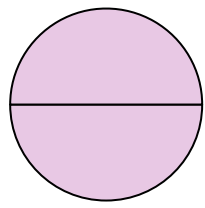
5)



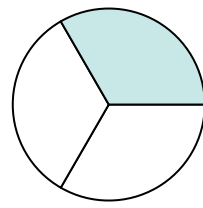
6)




7)



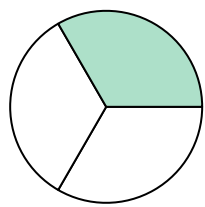
8)




9)




10)



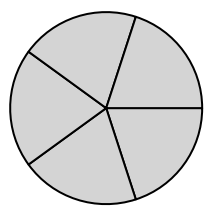
11)




12)



13)

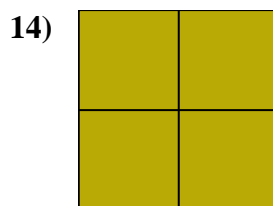
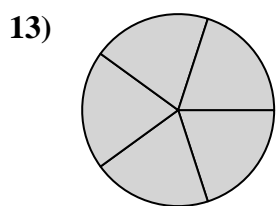
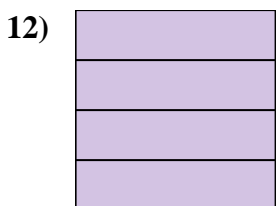
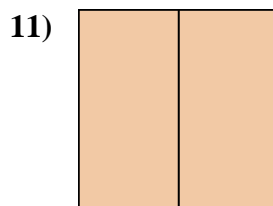
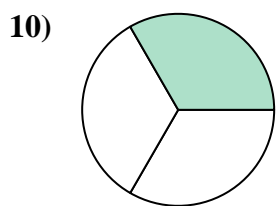
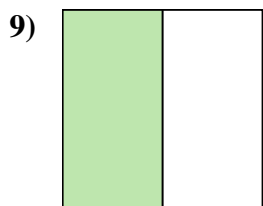
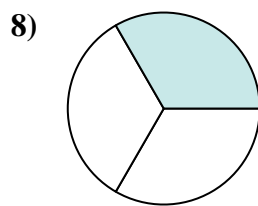
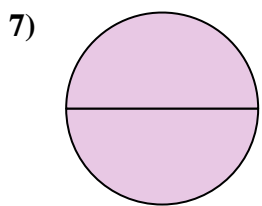
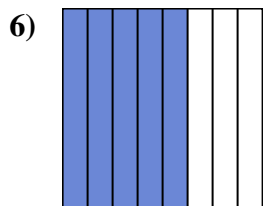
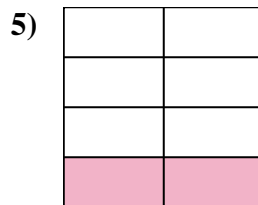
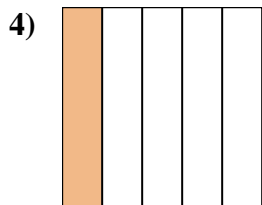
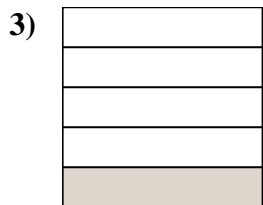
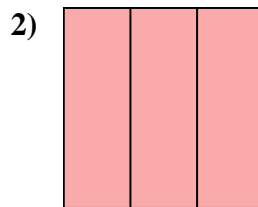

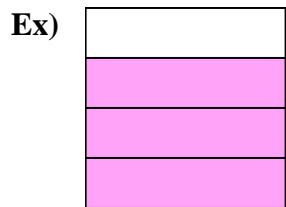


14)





Write the shaded amount as a fraction.



Answers

Ex. 3/4

1. 5/8

2. 3/3

3. 1/5

4. 1/5

5. 2/8

6. 5/8

7. 2/2

8. 1/3

9. 1/2

10. 1/3

11. 2/2

12. 4/4

13. 5/5

14. 4/4