

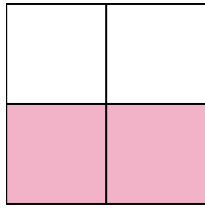


Write the shaded amount as a fraction.

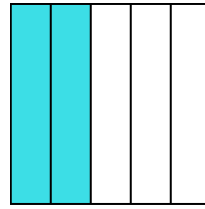
Ex)



1)



2)



**Answers**

Ex.  $\frac{1}{4}$

1. \_\_\_\_\_

2. \_\_\_\_\_

3. \_\_\_\_\_

4. \_\_\_\_\_

5. \_\_\_\_\_

6. \_\_\_\_\_

7. \_\_\_\_\_

8. \_\_\_\_\_

9. \_\_\_\_\_

10. \_\_\_\_\_


11. \_\_\_\_\_

12. \_\_\_\_\_

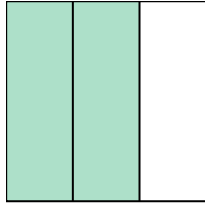
13. \_\_\_\_\_

14. \_\_\_\_\_

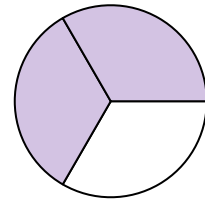
3)



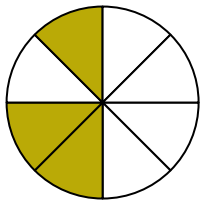
4)



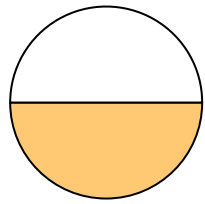
5)



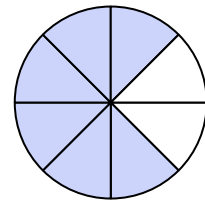
6)




7)




8)




9)




10)



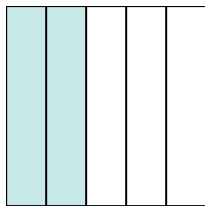
11)



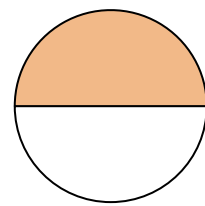
12)



13)

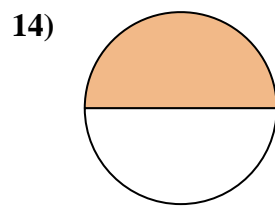
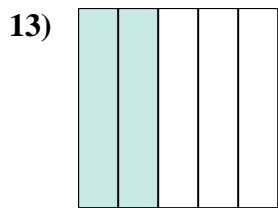
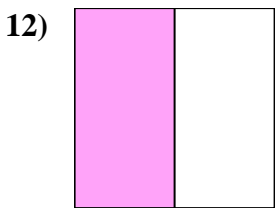

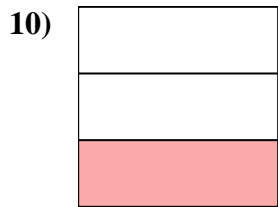
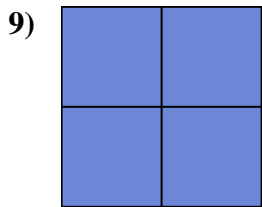
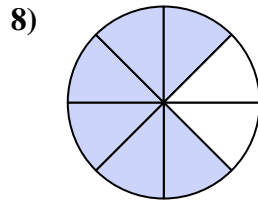
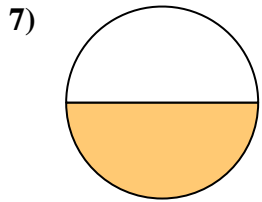
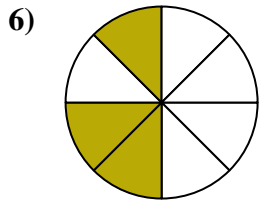
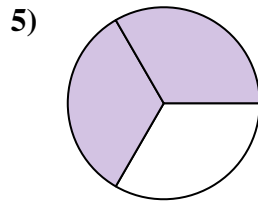
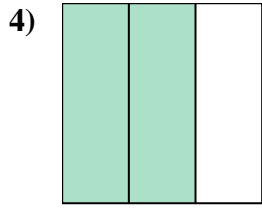
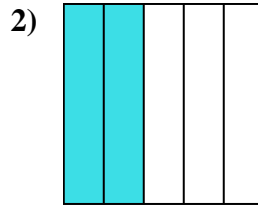
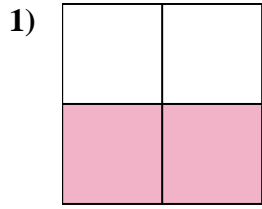
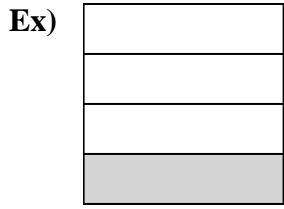


14)





Write the shaded amount as a fraction.



Answers

Ex. 1/4

1. 2/4

2. 2/5

3. 6/8

4. 2/3

5. 2/3

6. 3/8

7. 1/2

8. 6/8

9. 4/4

10. 1/3

11. 5/5

12. 1/2

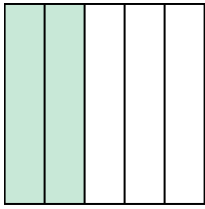
13. 2/5

14. 1/2




Write the shaded amount as a fraction.

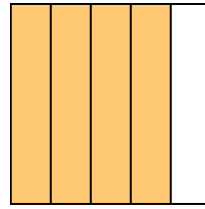
Ex)



1)



2)



**Answers**

Ex.  $\frac{2}{5}$

1. \_\_\_\_\_

2. \_\_\_\_\_

3. \_\_\_\_\_

4. \_\_\_\_\_

5. \_\_\_\_\_

6. \_\_\_\_\_

7. \_\_\_\_\_

8. \_\_\_\_\_

9. \_\_\_\_\_

10. \_\_\_\_\_

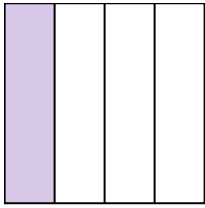
11. \_\_\_\_\_

12. \_\_\_\_\_


13. \_\_\_\_\_

14. \_\_\_\_\_

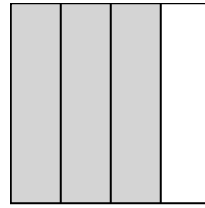
3)



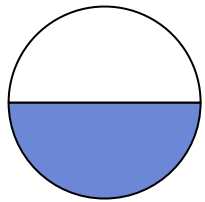
4)



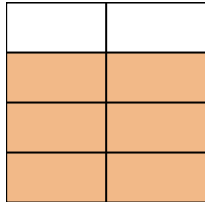
5)



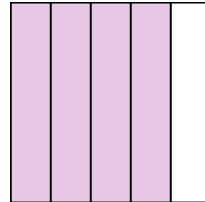
6)



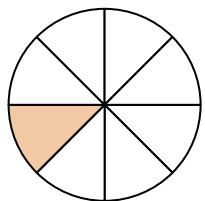
7)




8)




9)



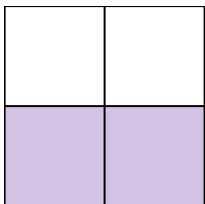
10)



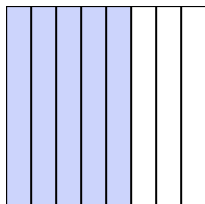
11)




12)



13)

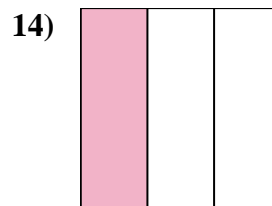
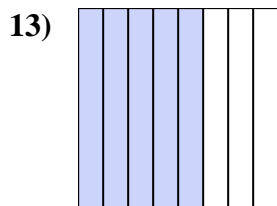
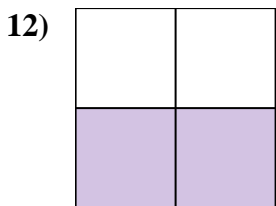
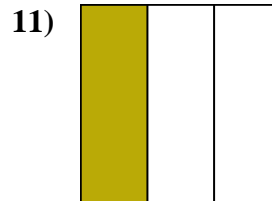
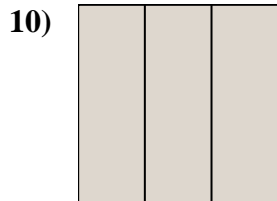
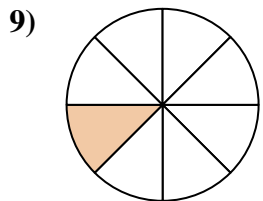
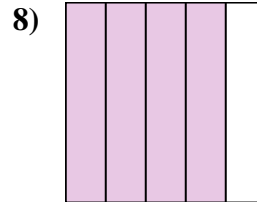
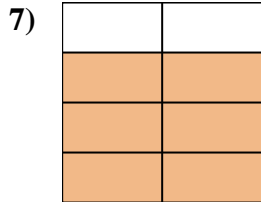
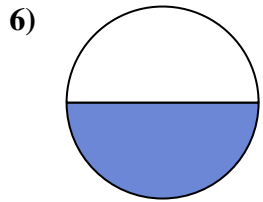
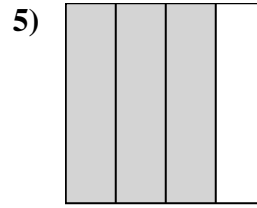
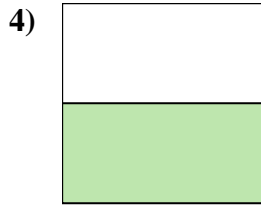
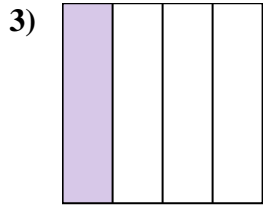
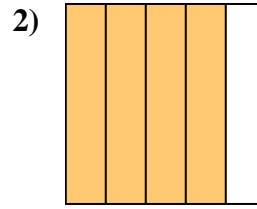
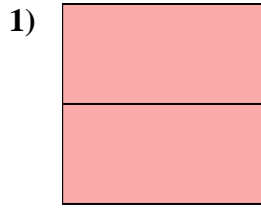
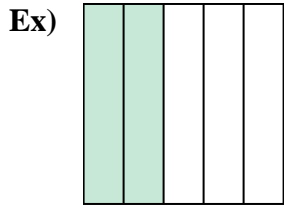


14)





Write the shaded amount as a fraction.



Answers

Ex. 2/5

1. 2/2

2. 4/5

3. 1/4

4. 1/2

5. 3/4

6. 1/2

7. 6/8

8. 4/5

9. 1/8

10. 3/3

11. 1/3

12. 2/4

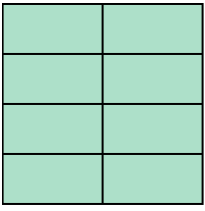
13. 5/8

14. 1/3




Write the shaded amount as a fraction.

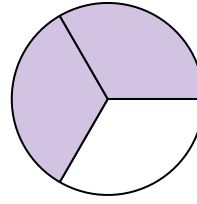
Ex)



1)



2)



**Answers**

Ex.  $\frac{8}{8}$

1. \_\_\_\_\_

2. \_\_\_\_\_

3. \_\_\_\_\_

4. \_\_\_\_\_

5. \_\_\_\_\_

6. \_\_\_\_\_

7. \_\_\_\_\_

8. \_\_\_\_\_

9. \_\_\_\_\_

10. \_\_\_\_\_

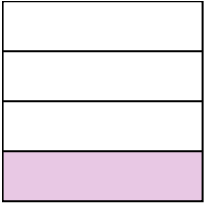
11. \_\_\_\_\_

12. \_\_\_\_\_

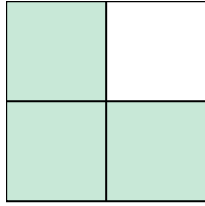
13. \_\_\_\_\_

14. \_\_\_\_\_


3)



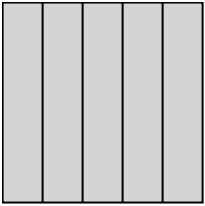
4)



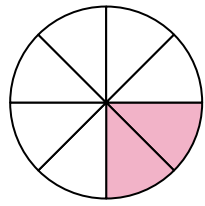
5)




6)




7)



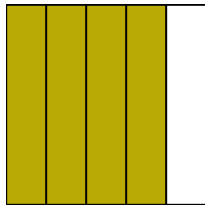
8)




9)




10)




11)




12)



13)

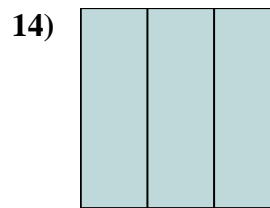
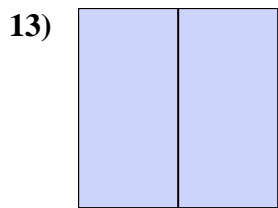
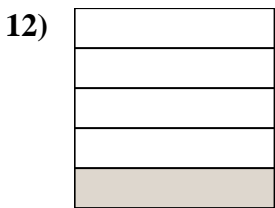
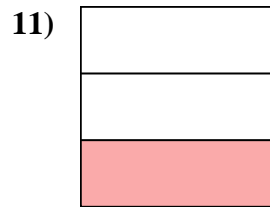
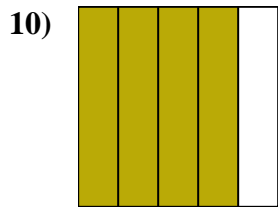
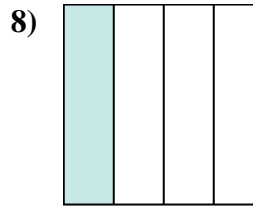
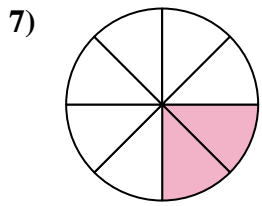
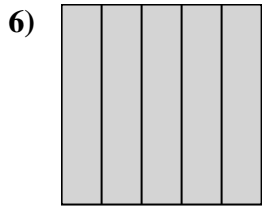
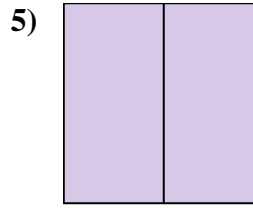
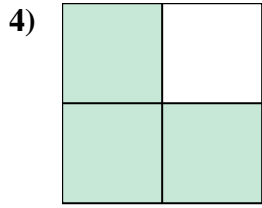
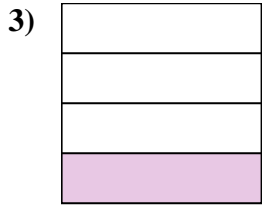
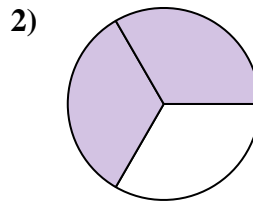
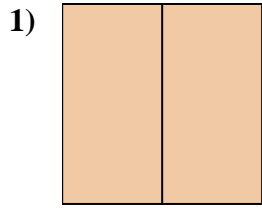
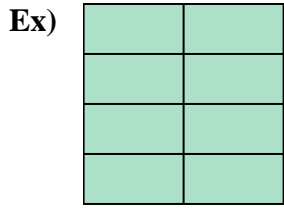


14)





Write the shaded amount as a fraction.



Answers

Ex. 8/8

1. 2/2

2. 2/3

3. 1/4

4. 3/4

5. 2/2

6. 5/5

7. 2/8

8. 1/4

9. 3/8

10. 4/5

11. 1/3

12. 1/5


13. 2/2

14. 3/3




Write the shaded amount as a fraction.

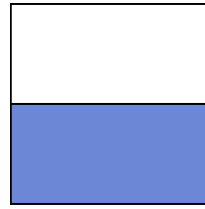
Ex)



1)



2)




**Answers**

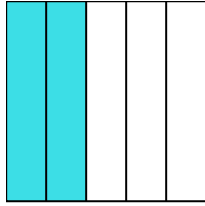
Ex.  $\frac{4}{8}$

- 1. \_\_\_\_\_
- 2. \_\_\_\_\_
- 3. \_\_\_\_\_
- 4. \_\_\_\_\_
- 5. \_\_\_\_\_
- 6. \_\_\_\_\_
- 7. \_\_\_\_\_
- 8. \_\_\_\_\_
- 9. \_\_\_\_\_
- 10. \_\_\_\_\_
- 11. \_\_\_\_\_
- 12. \_\_\_\_\_
- 13. \_\_\_\_\_
- 14. \_\_\_\_\_


3)



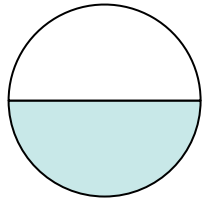
4)




5)




6)




7)



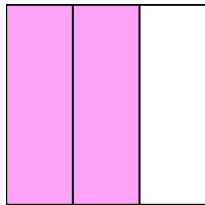
8)



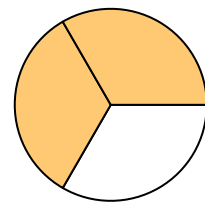
9)




10)



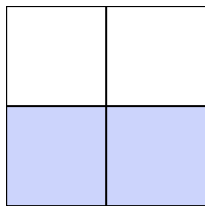
11)




12)



13)

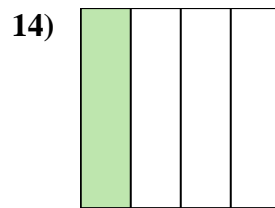
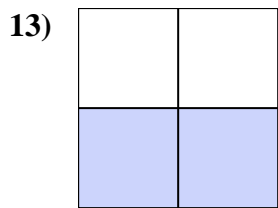
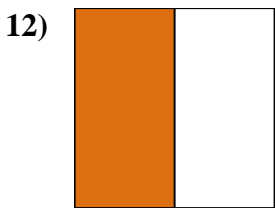
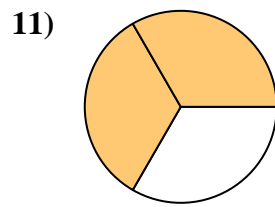
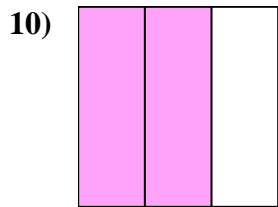
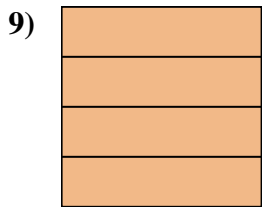
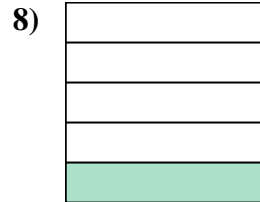

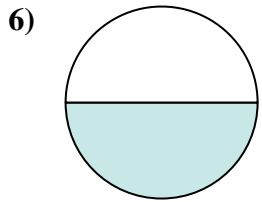
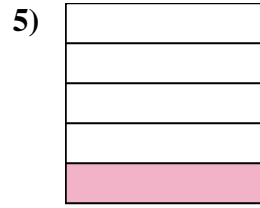
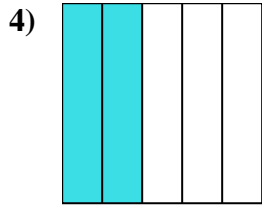
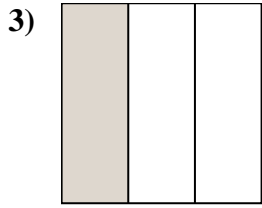
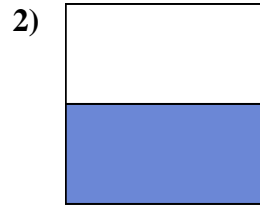


14)





Write the shaded amount as a fraction.



Answers

Ex. 4/8

1. 2/8

2. 1/2

3. 1/3

4. 2/5

5. 1/5

6. 1/2

7. 1/8

8. 1/5

9. 4/4

10. 2/3

11. 2/3

12. 1/2

13. 2/4


14. 1/4



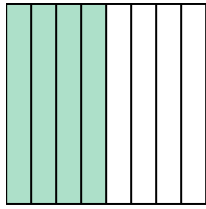


Write the shaded amount as a fraction.


Ex)



1)



2)



**Answers**

Ex.  $\frac{1}{2}$

1. \_\_\_\_\_

2. \_\_\_\_\_

3. \_\_\_\_\_

4. \_\_\_\_\_

5. \_\_\_\_\_

6. \_\_\_\_\_

7. \_\_\_\_\_

8. \_\_\_\_\_

9. \_\_\_\_\_

10. \_\_\_\_\_


11. \_\_\_\_\_

12. \_\_\_\_\_

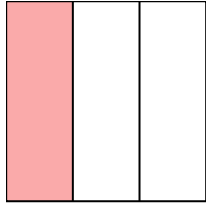
13. \_\_\_\_\_

14. \_\_\_\_\_


3)



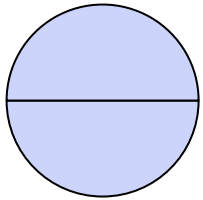
4)




5)



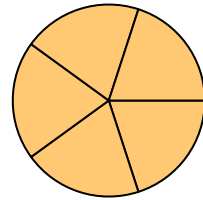
6)



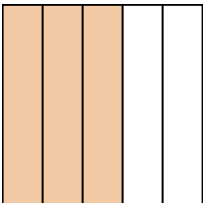
7)



8)




9)




10)



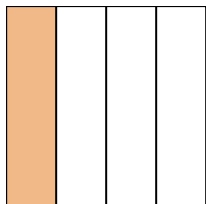
11)



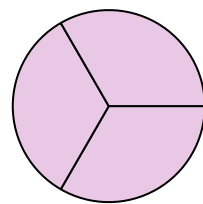
12)



13)

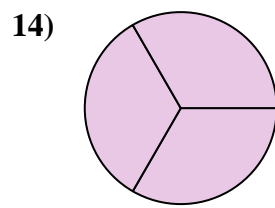
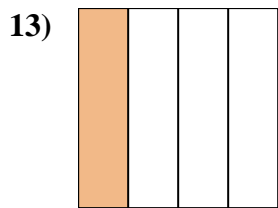
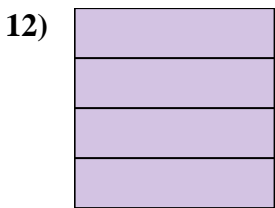
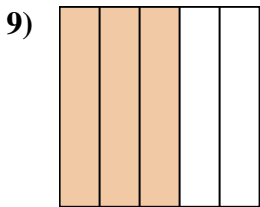
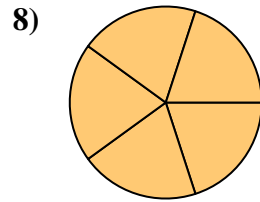
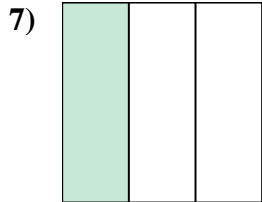
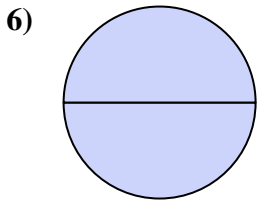
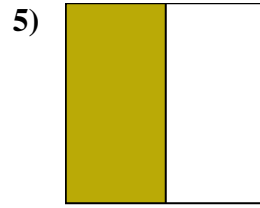
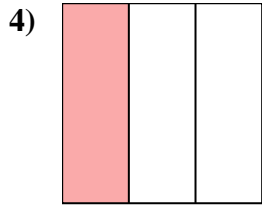
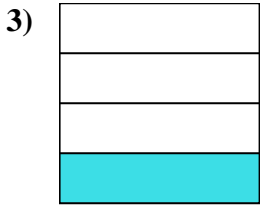
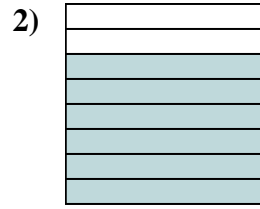
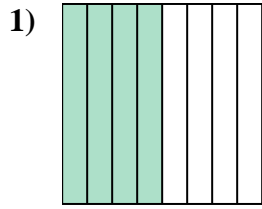
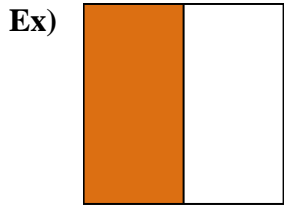


14)





Write the shaded amount as a fraction.



**Answers**

Ex. 1/2

1. 4/8

2. 6/8

3. 1/4

4. 1/3

5. 1/2

6. 2/2

7. 1/3

8. 5/5

9. 3/5

10. 3/5

11. 7/8

12. 4/4

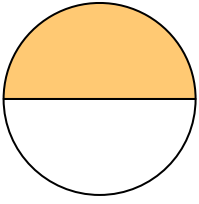
13. 1/4

14. 3/3




Write the shaded amount as a fraction.

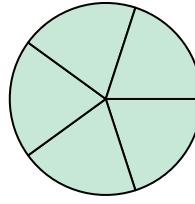
Ex)



1)



2)

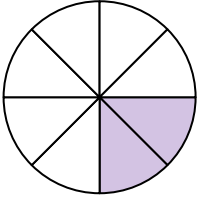


**Answers**


Ex.  $\frac{1}{2}$

- 1. \_\_\_\_\_
- 2. \_\_\_\_\_
- 3. \_\_\_\_\_
- 4. \_\_\_\_\_
- 5. \_\_\_\_\_
- 6. \_\_\_\_\_
- 7. \_\_\_\_\_
- 8. \_\_\_\_\_
- 9. \_\_\_\_\_
- 10. \_\_\_\_\_
- 11. \_\_\_\_\_
- 12. \_\_\_\_\_
- 13. \_\_\_\_\_
- 14. \_\_\_\_\_


3)



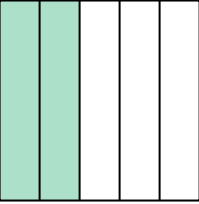
4)



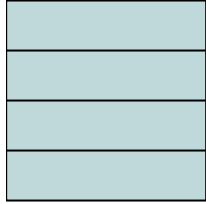
5)



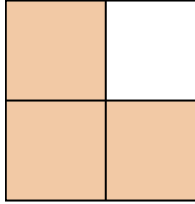
6)




7)




8)




9)



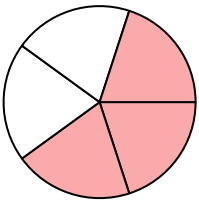
10)




11)



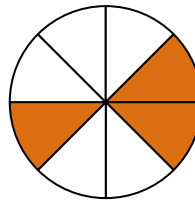
12)



13)



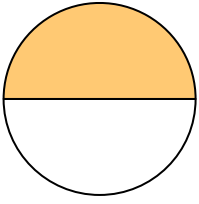
14)






Write the shaded amount as a fraction.

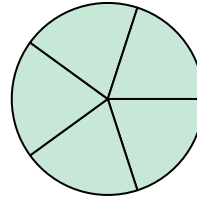
Ex)



1)



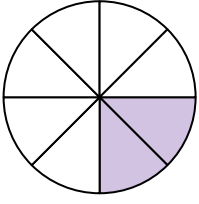
2)




Answers

Ex. 1/2


3)



4)



5)



1. 3/3

2. 5/5

3. 2/8

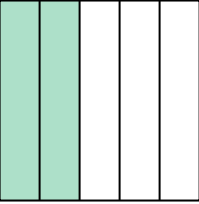
4. 3/3

5. 1/8


6. 2/5

7. 4/4


6)



7)



8)




8. 3/4

9. 2/2


10. 4/4

11. 3/3


9)



10)



11)

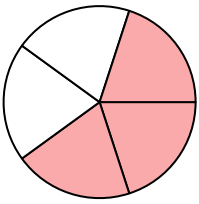


12. 3/5


13. 1/2

14. 3/8

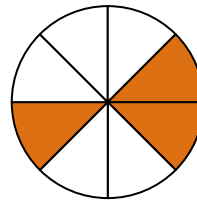
12)



13)



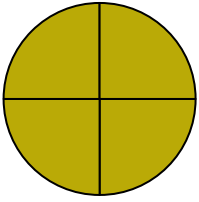
14)



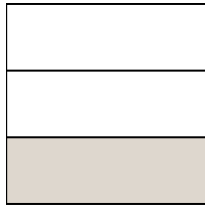


Write the shaded amount as a fraction.

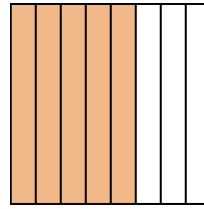
Ex)



1)



2)

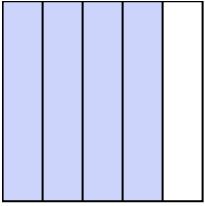


**Answers**

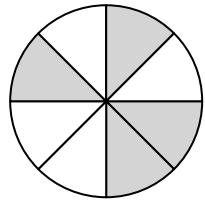
Ex.  $\frac{4}{4}$

- 1. \_\_\_\_\_
- 2. \_\_\_\_\_
- 3. \_\_\_\_\_
- 4. \_\_\_\_\_
- 5. \_\_\_\_\_
- 6. \_\_\_\_\_
- 7. \_\_\_\_\_
- 8. \_\_\_\_\_
- 9. \_\_\_\_\_
- 10. \_\_\_\_\_
- 11. \_\_\_\_\_
- 12. \_\_\_\_\_
- 13. \_\_\_\_\_
- 14. \_\_\_\_\_

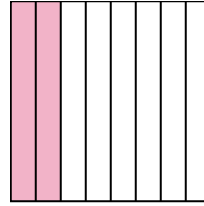
3)




4)



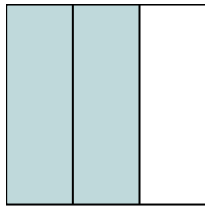
5)



6)



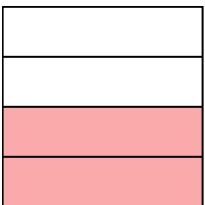
7)




8)



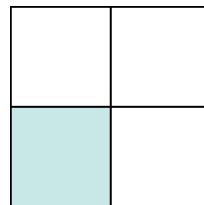
9)




10)



11)




12)



13)



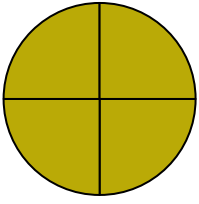
14)






Write the shaded amount as a fraction.

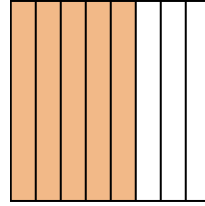
Ex)



1)



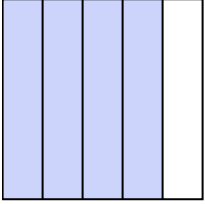
2)



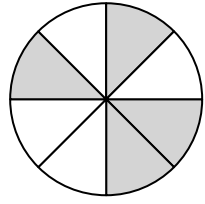
Answers

Ex. 4/4

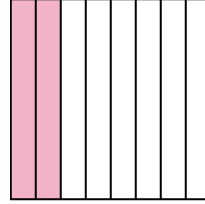
3)



4)



5)



1. 1/3

2. 5/8

3. 4/5


4. 4/8

5. 2/8

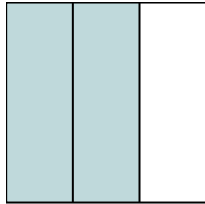
6. 1/2

7. 2/3


6)



7)



8)




8. 5/5

9. 2/4


10. 1/2

11. 1/4

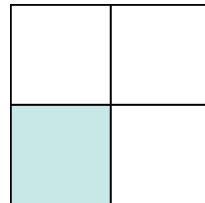
9)



10)



11)




12. 2/2


13. 1/5

14. 1/3

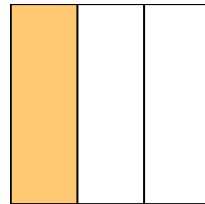
12)



13)



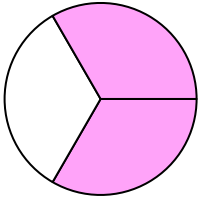
14)



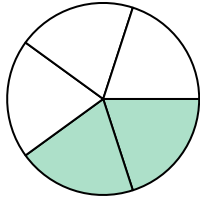


Write the shaded amount as a fraction.

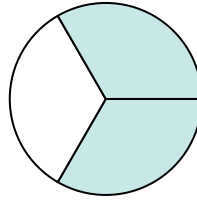
Ex)



1)



2)



**Answers**

Ex.  $\frac{2}{3}$

1. \_\_\_\_\_

2. \_\_\_\_\_

3. \_\_\_\_\_

4. \_\_\_\_\_

5. \_\_\_\_\_

6. \_\_\_\_\_

7. \_\_\_\_\_

8. \_\_\_\_\_

9. \_\_\_\_\_

10. \_\_\_\_\_

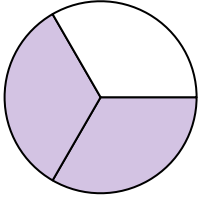
11. \_\_\_\_\_

12. \_\_\_\_\_

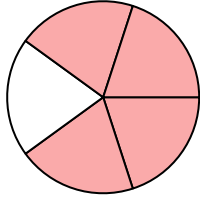
13. \_\_\_\_\_

14. \_\_\_\_\_


3)




4)



5)




6)



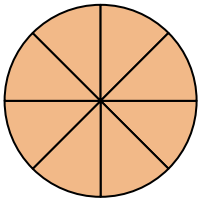
7)



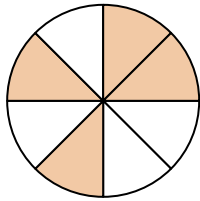
8)




9)



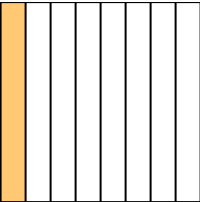
10)



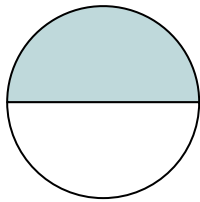
11)



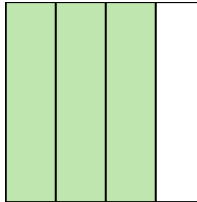
12)



13)



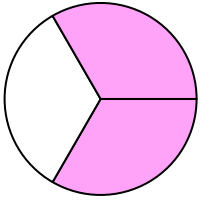
14)



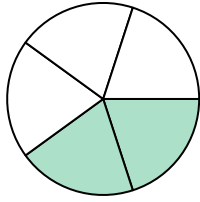


Write the shaded amount as a fraction.

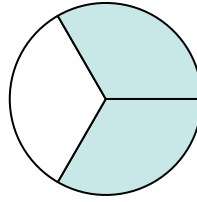
Ex)



1)



2)



Answers

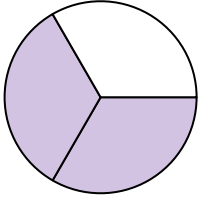
Ex. 2/3

1. 2/5

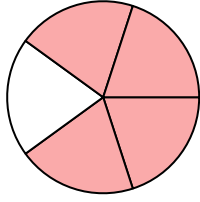
2. 2/3

3. 2/3


3)



4)



5)




4. 4/5

5. 2/2

6. 4/4


6)



7)



8)



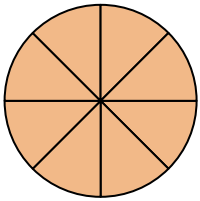
7. 1/4

8. 4/5

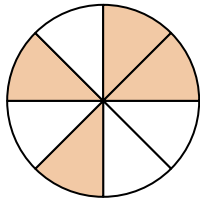
9. 8/8

10. 4/8


9)



10)



11)



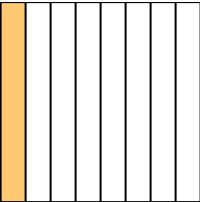
11. 1/2

12. 1/8

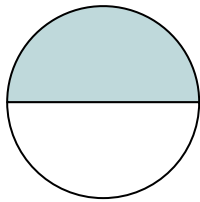
13. 1/2

14. 3/4

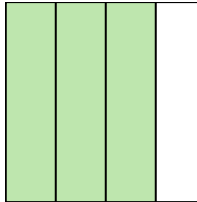
12)



13)



14)






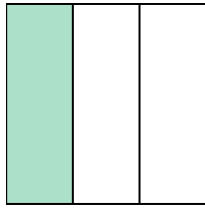


Write the shaded amount as a fraction.

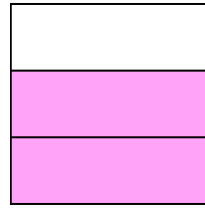
Ex)



1)



2)



Answers

Ex.  $\frac{7}{8}$

1. \_\_\_\_\_

2. \_\_\_\_\_

3. \_\_\_\_\_

4. \_\_\_\_\_

5. \_\_\_\_\_

6. \_\_\_\_\_

7. \_\_\_\_\_

8. \_\_\_\_\_

9. \_\_\_\_\_

10. \_\_\_\_\_

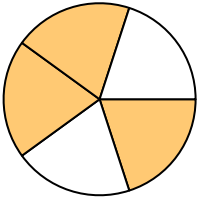
11. \_\_\_\_\_

12. \_\_\_\_\_


13. \_\_\_\_\_

14. \_\_\_\_\_

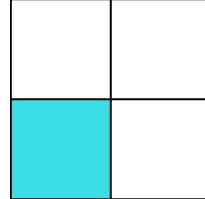
3)



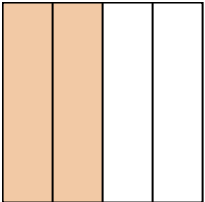
4)



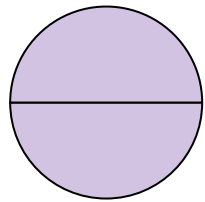
5)



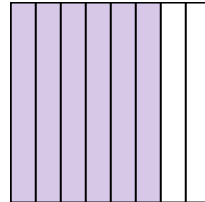
6)



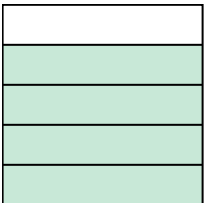
7)




8)



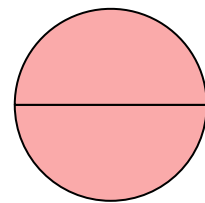
9)




10)




11)




12)



13)

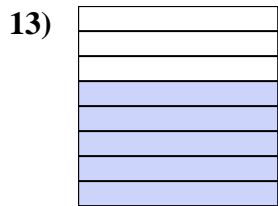
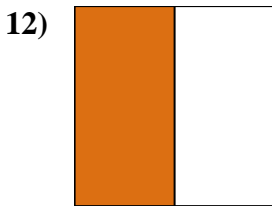
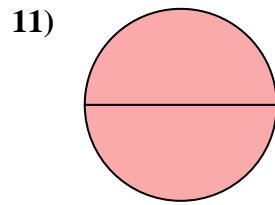
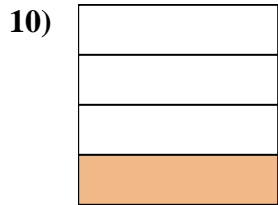

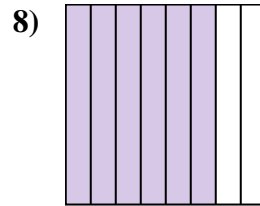
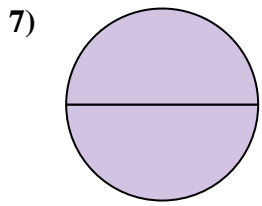
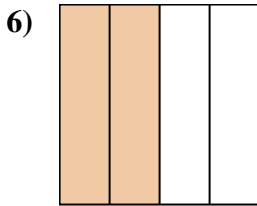
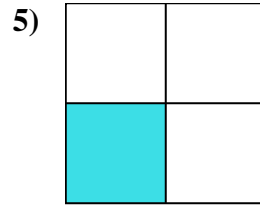
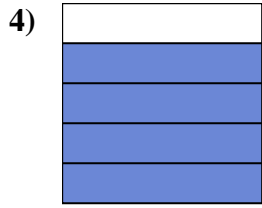
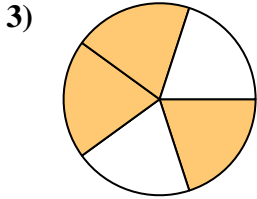
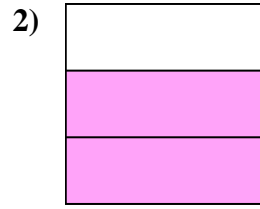
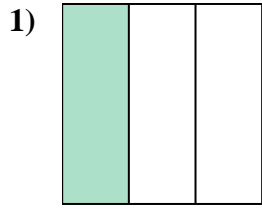
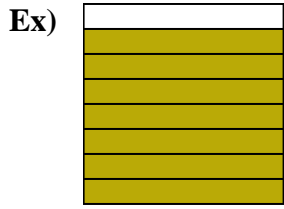


14)





Write the shaded amount as a fraction.



Answers

Ex. 7/8

1. 1/3

2. 2/3

3. 3/5

4. 4/5

5. 1/4

6. 2/4

7. 2/2

8. 6/8

9. 4/5

10. 1/4

11. 2/2

12. 1/2

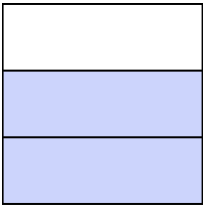
13. 5/8

14. 3/3




Write the shaded amount as a fraction.

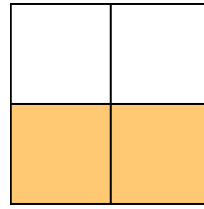
Ex)



1)



2)




**Answers**

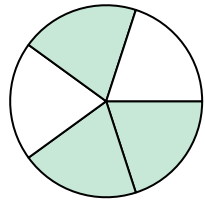
Ex.  $\frac{2}{3}$

- 1. \_\_\_\_\_
- 2. \_\_\_\_\_
- 3. \_\_\_\_\_
- 4. \_\_\_\_\_
- 5. \_\_\_\_\_
- 6. \_\_\_\_\_
- 7. \_\_\_\_\_
- 8. \_\_\_\_\_
- 9. \_\_\_\_\_
- 10. \_\_\_\_\_
- 11. \_\_\_\_\_
- 12. \_\_\_\_\_
- 13. \_\_\_\_\_
- 14. \_\_\_\_\_

3)



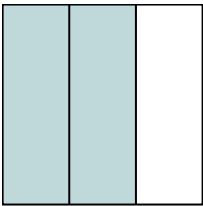
4)



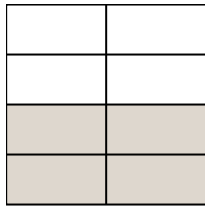
5)



6)



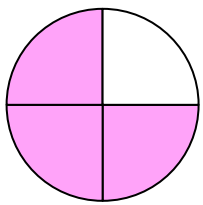
7)



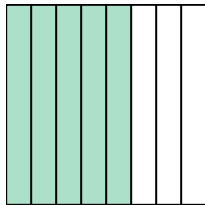
8)



9)




10)



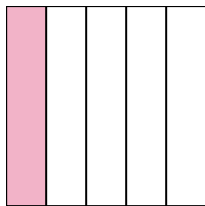
11)




12)



13)

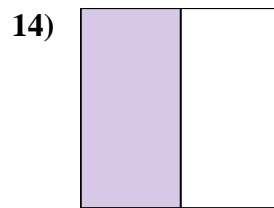
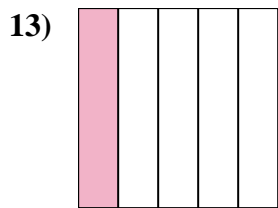
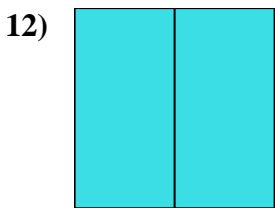
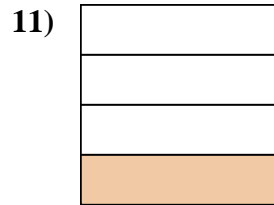
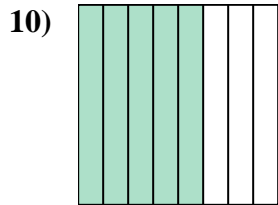
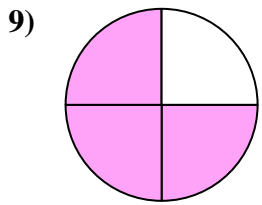
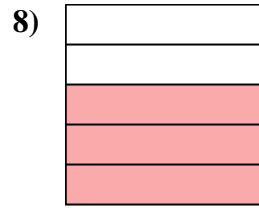
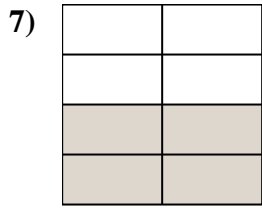
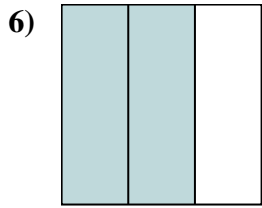
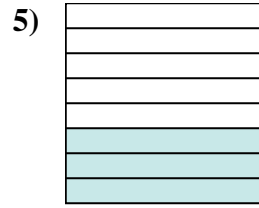
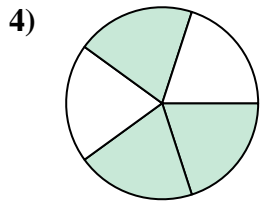
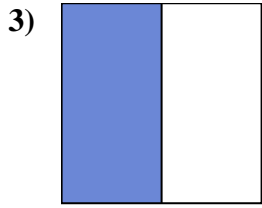
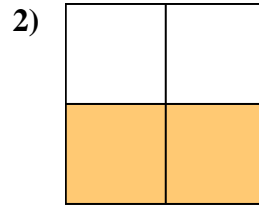
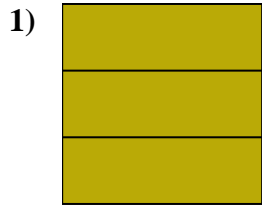
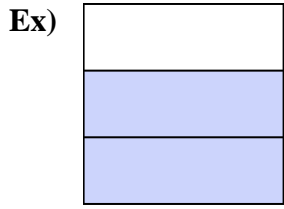


14)





Write the shaded amount as a fraction.



Answers

Ex. 2/3

1. 3/3

2. 2/4

3. 1/2

4. 3/5

5. 3/8

6. 2/3

7. 4/8

8. 3/5

9. 3/4

10. 5/8

11. 1/4

12. 2/2

13. 1/5

14. 1/2