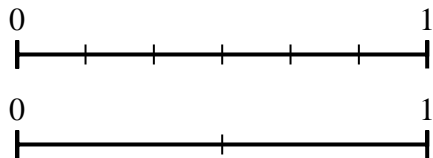




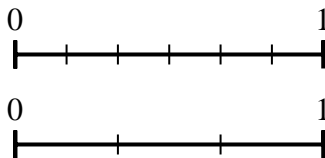
Use the number lines to answer the questions.

**Answers**

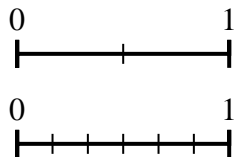
1) Using the number lines shown, what is the equivalent fraction to  $\frac{0}{6}$ ?



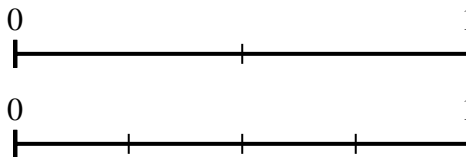
2) Using the number lines shown, what is the equivalent fraction to  $\frac{6}{6}$ ?



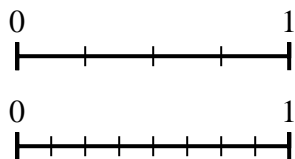
3) Using the number lines shown, what is the equivalent fraction to  $\frac{2}{2}$ ?



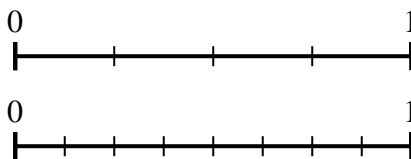
4) Using the number lines shown, what is the equivalent fraction to  $\frac{2}{2}$ ?



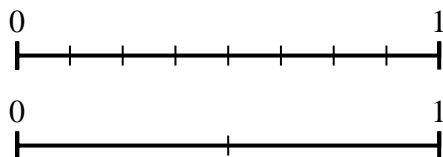
5) Using the number lines shown, what is the equivalent fraction to  $\frac{4}{4}$ ?



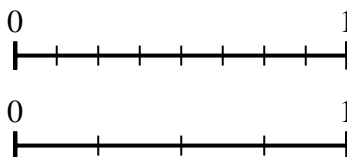
6) Using the number lines shown, what is the equivalent fraction to  $\frac{2}{4}$ ?



7) Using the number lines shown, what is the equivalent fraction to  $\frac{8}{8}$ ?



8) Using the number lines shown, what is the equivalent fraction to  $\frac{6}{8}$ ?

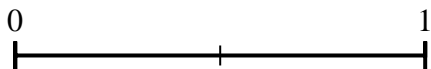
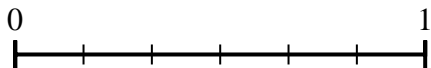


1. \_\_\_\_\_
2. \_\_\_\_\_
3. \_\_\_\_\_
4. \_\_\_\_\_
5. \_\_\_\_\_
6. \_\_\_\_\_
7. \_\_\_\_\_
8. \_\_\_\_\_


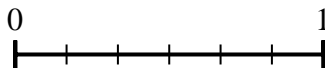


Use the number lines to answer the questions.

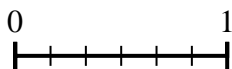
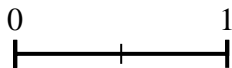
1) Using the number lines shown, what is the equivalent fraction to  $\frac{0}{6}$ ?



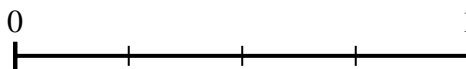
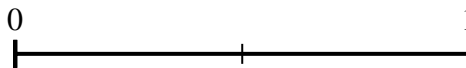
2) Using the number lines shown, what is the equivalent fraction to  $\frac{6}{6}$ ?



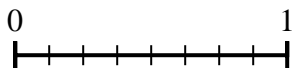
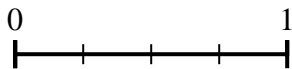
3) Using the number lines shown, what is the equivalent fraction to  $\frac{2}{2}$ ?



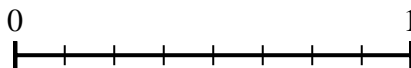
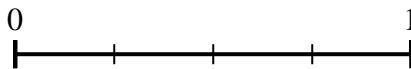
4) Using the number lines shown, what is the equivalent fraction to  $\frac{2}{2}$ ?



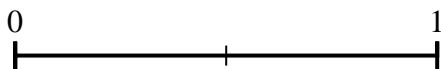
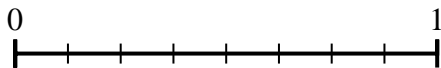
5) Using the number lines shown, what is the equivalent fraction to  $\frac{4}{4}$ ?



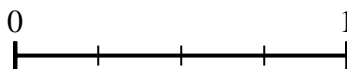
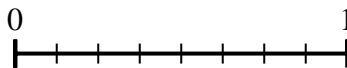
6) Using the number lines shown, what is the equivalent fraction to  $\frac{2}{4}$ ?



7) Using the number lines shown, what is the equivalent fraction to  $\frac{8}{8}$ ?



8) Using the number lines shown, what is the equivalent fraction to  $\frac{6}{8}$ ?



**Answers**

1.  $\frac{0}{2}$

2.  $\frac{3}{3}$

3.  $\frac{6}{6}$

4.  $\frac{4}{4}$

5.  $\frac{8}{8}$

6.  $\frac{4}{8}$

7.  $\frac{2}{2}$

8.  $\frac{3}{4}$