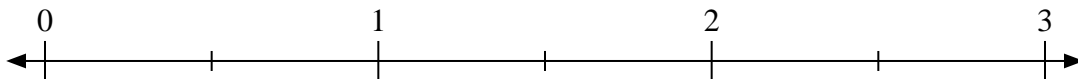


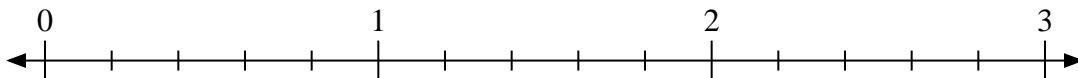


Use the numberline to solve.

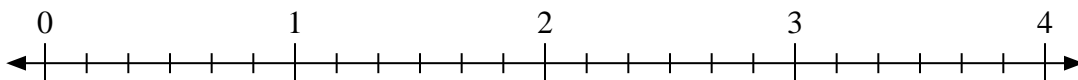
1) $2 \div \frac{1}{2}$



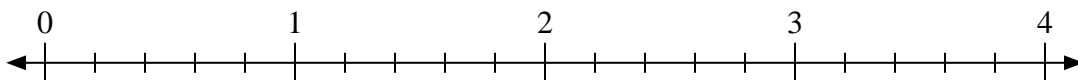
2) $3 \div \frac{2}{5}$




3) $4 \div \frac{1}{6}$



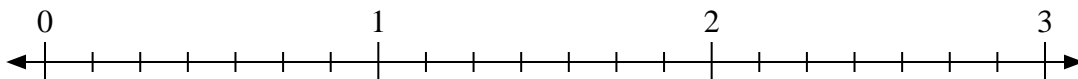
4) $2 \div \frac{4}{5}$



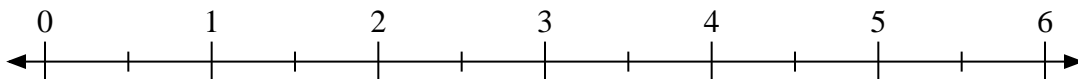
5) $2 \div \frac{2}{3}$



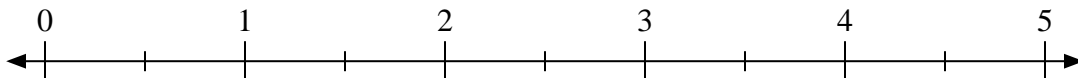
6) $2 \div \frac{4}{7}$



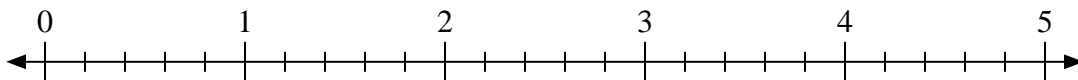
7) $6 \div \frac{1}{2}$



8) $2 \div \frac{1}{2}$



9) $3 \div \frac{4}{5}$



Answers

1. _____

2. _____

3. _____

4. _____

5. _____

6. _____

7. _____

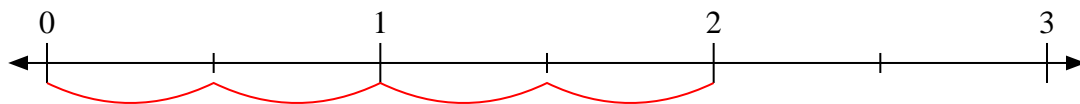
8. _____

9. _____

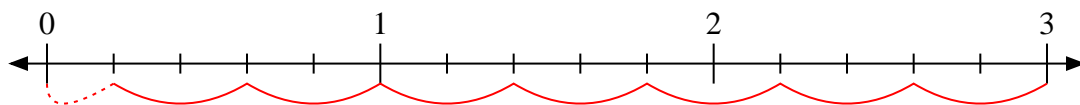


Use the numberline to solve.

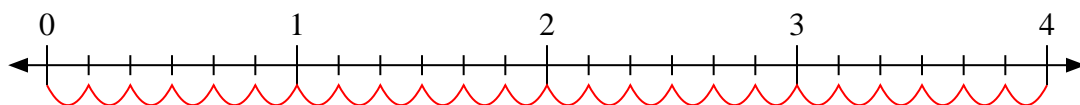
1) $2 \div \frac{1}{2}$



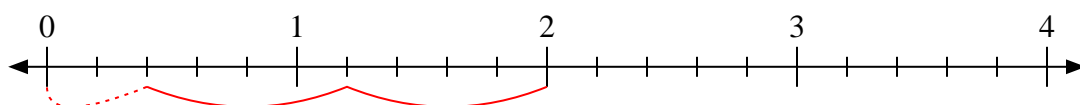
2) $3 \div \frac{2}{5}$



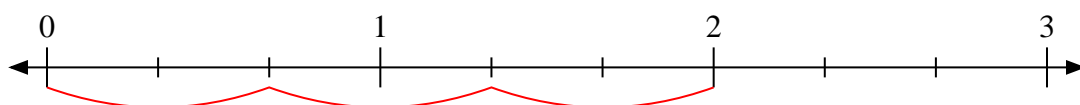
3) $4 \div \frac{1}{6}$



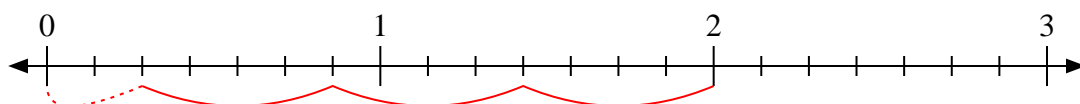
4) $2 \div \frac{4}{5}$



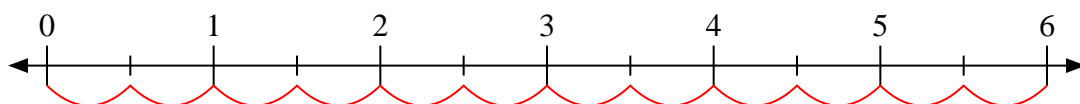
5) $2 \div \frac{2}{3}$



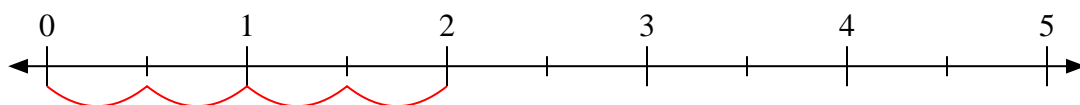
6) $2 \div \frac{4}{7}$



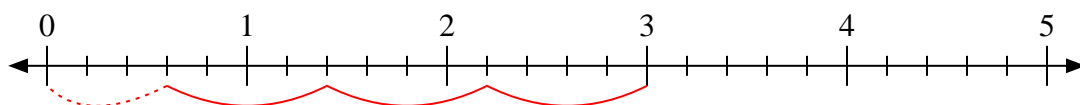
7) $6 \div \frac{1}{2}$



8) $2 \div \frac{1}{2}$



9) $3 \div \frac{4}{5}$



Answers

1. 4

2. $7 \frac{1}{2}$

3. 24

4. $2 \frac{2}{4}$

5. 3

6. $3 \frac{2}{4}$

7. 12

8. 4

9. $3 \frac{3}{4}$