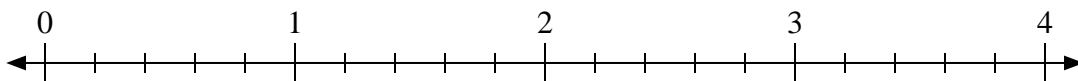


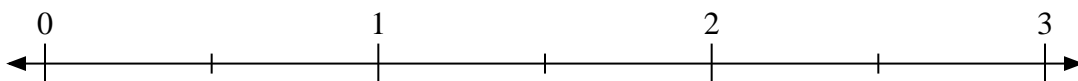


Use the numberline to solve.

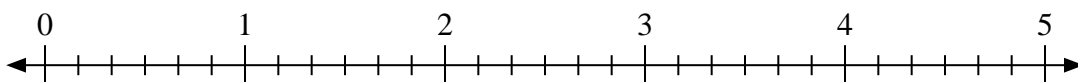
1) $2 \div \frac{1}{5}$



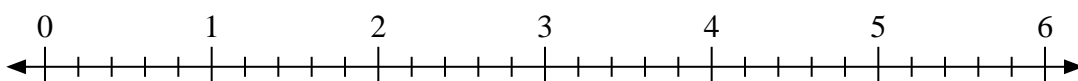
2) $3 \div \frac{1}{2}$



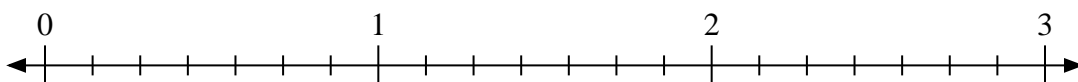
3) $3 \div \frac{1}{6}$



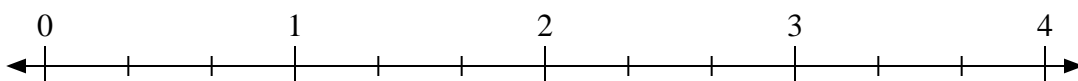
4) $6 \div \frac{4}{5}$



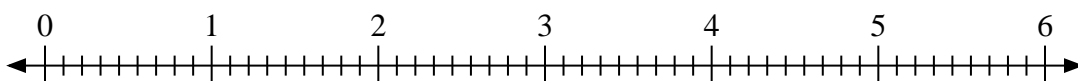
5) $3 \div \frac{5}{7}$



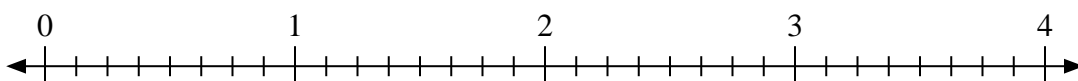
6) $4 \div \frac{2}{3}$



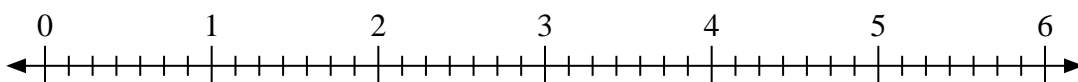
7) $4 \div \frac{5}{9}$



8) $4 \div \frac{7}{8}$



9) $5 \div \frac{3}{7}$

**Answers**

1. _____

2. _____

3. _____

4. _____

5. _____

6. _____

7. _____

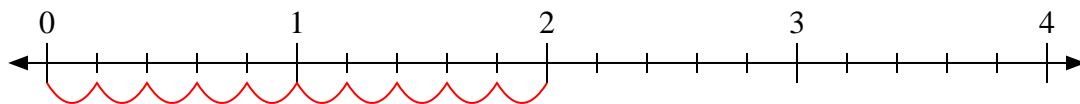
8. _____

9. _____

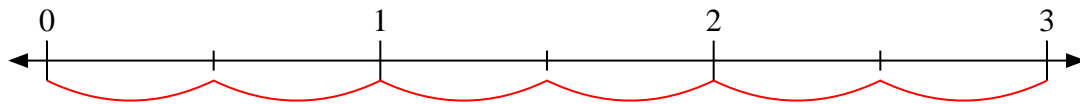


Use the numberline to solve.

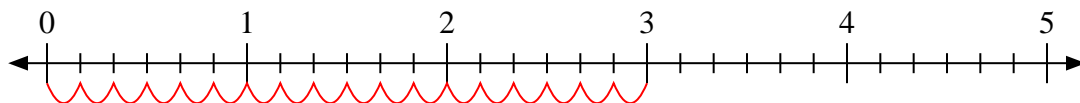
1) $2 \div \frac{1}{5}$



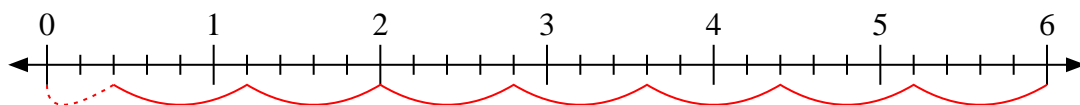
2) $3 \div \frac{1}{2}$



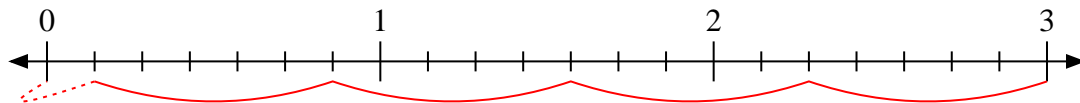
3) $3 \div \frac{1}{6}$



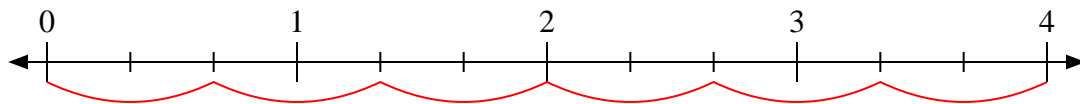
4) $6 \div \frac{4}{5}$



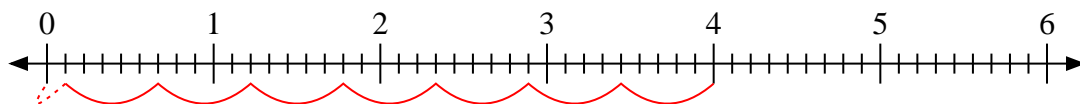
5) $3 \div \frac{5}{7}$



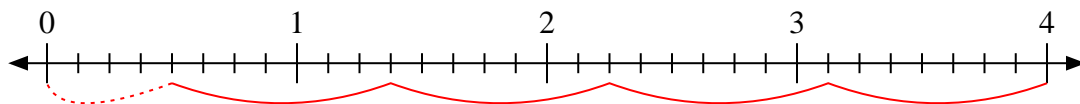
6) $4 \div \frac{2}{3}$



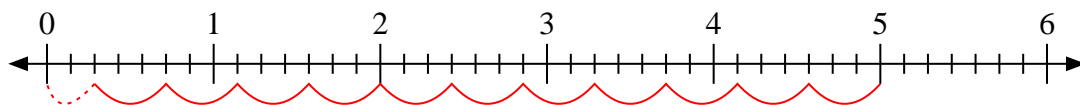
7) $4 \div \frac{5}{9}$



8) $4 \div \frac{7}{8}$



9) $5 \div \frac{3}{7}$



Answers

1. **10**

2. **6**

3. **18**

4. **$7 \frac{2}{4}$**

5. **$4 \frac{1}{5}$**

6. **6**

7. **$7 \frac{1}{5}$**

8. **$4 \frac{4}{7}$**

9. **$11 \frac{2}{3}$**