



Solve each problem by marking off the fractions. The first is completed for you.

**Answers**

Ex)  $2 \div \frac{1}{6} = ?$  This is the same as saying: How many  $\frac{1}{6}$  are there in 2 wholes?

Ex. **12**

1 Whole						1 Whole					

1. \_\_\_\_\_

1)  $5 \div \frac{1}{3} =$

2. \_\_\_\_\_

1 Whole	1 Whole	1 Whole	1 Whole	1 Whole

3. \_\_\_\_\_

2)  $5 \div \frac{1}{5} =$

4. \_\_\_\_\_

1 Whole	1 Whole	1 Whole	1 Whole	1 Whole

5. \_\_\_\_\_

3)  $3 \div \frac{1}{5} =$

6. \_\_\_\_\_

1 Whole	1 Whole	1 Whole

7. \_\_\_\_\_

4)  $4 \div \frac{1}{7} =$

8. \_\_\_\_\_

1 Whole	1 Whole	1 Whole	1 Whole

9. \_\_\_\_\_

5)  $2 \div \frac{1}{7} =$

1 Whole	1 Whole

6)  $5 \div \frac{1}{4} =$

1 Whole	1 Whole	1 Whole	1 Whole	1 Whole

7)  $4 \div \frac{1}{3} =$

1 Whole	1 Whole	1 Whole	1 Whole

8)  $4 \div \frac{1}{4} =$

1 Whole	1 Whole	1 Whole	1 Whole


9)  $3 \div \frac{1}{3} =$

1 Whole	1 Whole	1 Whole

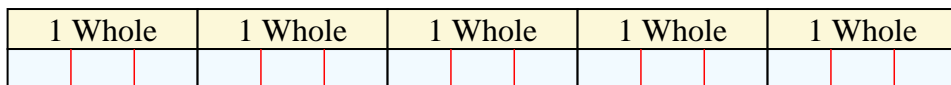


Solve each problem by marking off the fractions. The first is completed for you.

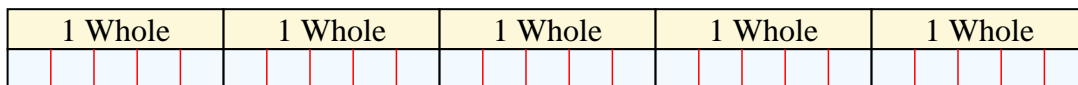
Ex)  $2 \div \frac{1}{6} = ?$  This is the same as saying: How many  $\frac{1}{6}$  are the in 2 wholes?



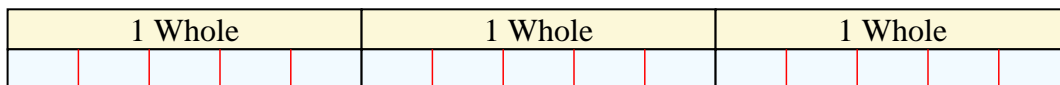
1)  $5 \div \frac{1}{3} =$  This is the same as saying: How many  $\frac{1}{3}$  are the in 5 wholes?



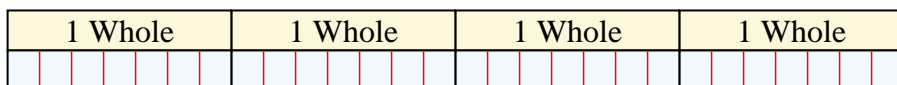
2)  $5 \div \frac{1}{5} =$  This is the same as saying: How many  $\frac{1}{5}$  are the in 5 wholes?



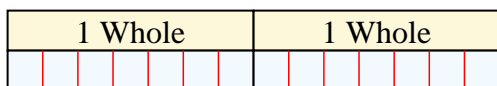
3)  $3 \div \frac{1}{5} =$  This is the same as saying: How many  $\frac{1}{5}$  are the in 3 wholes?



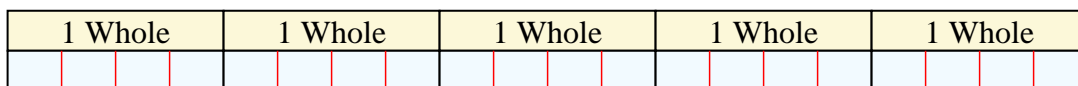
4)  $4 \div \frac{1}{7} =$  This is the same as saying: How many  $\frac{1}{7}$  are the in 4 wholes?



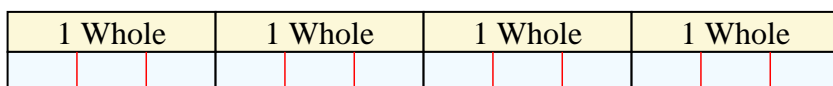
5)  $2 \div \frac{1}{7} =$  This is the same as saying: How many  $\frac{1}{7}$  are the in 2 wholes?



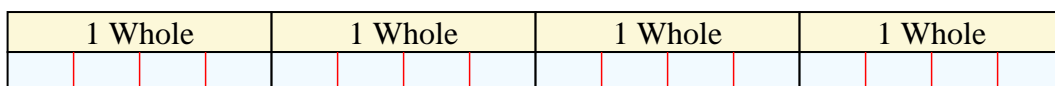
6)  $5 \div \frac{1}{4} =$  This is the same as saying: How many  $\frac{1}{4}$  are the in 5 wholes?



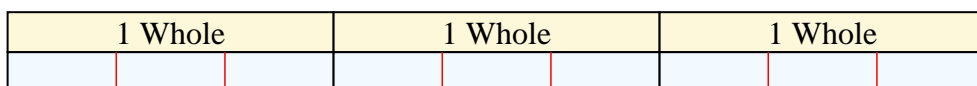
7)  $4 \div \frac{1}{3} =$  This is the same as saying: How many  $\frac{1}{3}$  are the in 4 wholes?



8)  $4 \div \frac{1}{4} =$  This is the same as saying: How many  $\frac{1}{4}$  are the in 4 wholes?



9)  $3 \div \frac{1}{3} =$  This is the same as saying: How many  $\frac{1}{3}$  are the in 3 wholes?



**Answers**

Ex. 12

1. 15

2. 25

3. 15

4. 28

5. 14

6. 20

7. 12

8. 16

9. 9