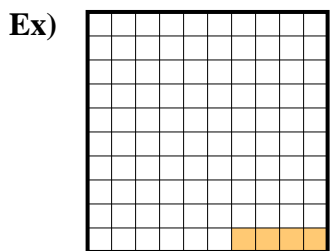
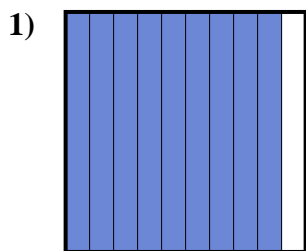




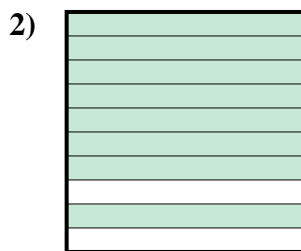
Determine the value written as a fraction , decimal & a percent.




fraction $\frac{4}{100}$
 decimal 0.04
 percent 4



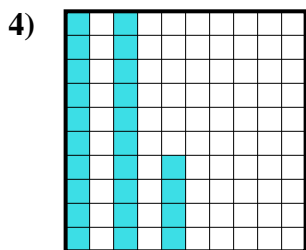
fraction $\frac{9}{10}$
 decimal 0.9
 percent 90



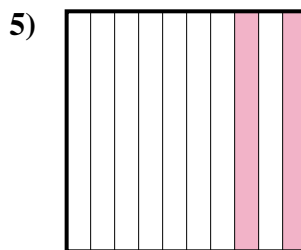
fraction $\frac{8}{10}$
 decimal 0.8
 percent 80



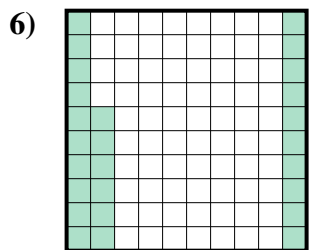
fraction $\frac{3}{10}$
 decimal 0.3
 percent 30



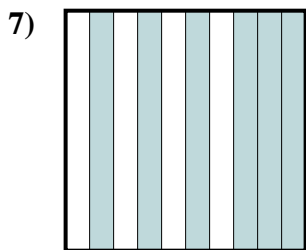
fraction $\frac{24}{100}$
 decimal 0.24
 percent 24



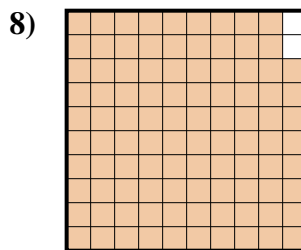
fraction $\frac{2}{10}$
 decimal 0.2
 percent 20



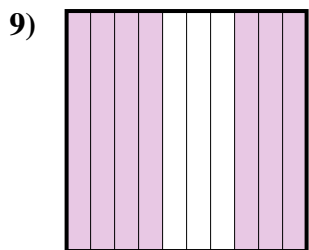
fraction $\frac{26}{100}$
 decimal 0.26
 percent 26



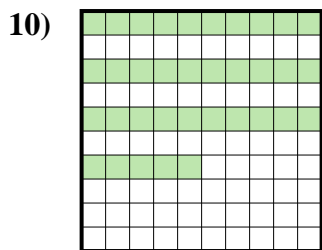
fraction $\frac{6}{10}$
 decimal 0.6
 percent 60



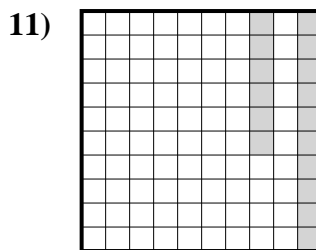
fraction $\frac{98}{100}$
 decimal 0.98
 percent 98



fraction $\frac{7}{10}$
 decimal 0.7
 percent 70



fraction $\frac{35}{100}$
 decimal 0.35
 percent 35



fraction $\frac{16}{100}$
 decimal 0.16
 percent 16

Answers

- Ex. $\frac{4}{100}$ **0.04** **4%**
 1. $\frac{9}{10}$ **0.9** **90%**
 2. $\frac{8}{10}$ **0.8** **80%**
 3. $\frac{3}{10}$ **0.3** **30%**
 4. $\frac{24}{100}$ **0.24** **24%**
 5. $\frac{2}{10}$ **0.2** **20%**
 6. $\frac{26}{100}$ **0.26** **26%**
 7. $\frac{6}{10}$ **0.6** **60%**
 8. $\frac{98}{100}$ **0.98** **98%**
 9. $\frac{7}{10}$ **0.7** **70%**
 10. $\frac{35}{100}$ **0.35** **35%**
 11. $\frac{16}{100}$ **0.16** **16%**