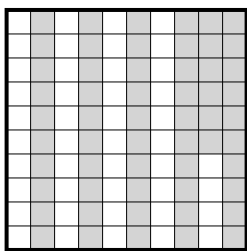




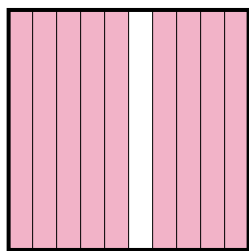
Determine the value written as a fraction , decimal & a percent.

Ex)



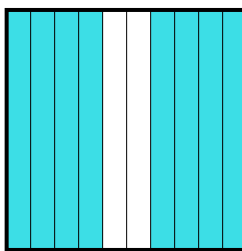
fraction $\frac{56}{100}$
 decimal 0.56
 percent 56

1)



fraction _____
 decimal _____
 percent _____

2)



fraction _____
 decimal _____
 percent _____

Answers

Ex. $\frac{56}{100}$ **0.56** **56%**

1. _____

2. _____

3. _____

4. _____

5. _____

6. _____

7. _____

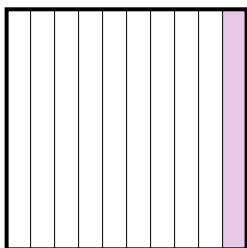
8. _____

9. _____

10. _____

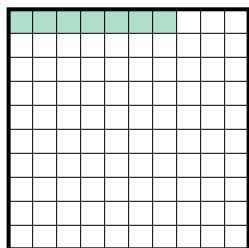
11. _____

3)




fraction _____
 decimal _____
 percent _____

4)




fraction _____
 decimal _____
 percent _____

5)



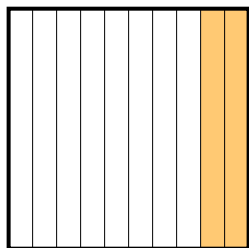
fraction _____
 decimal _____
 percent _____

6)



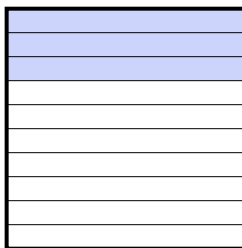
fraction _____
 decimal _____
 percent _____

7)



fraction _____
 decimal _____
 percent _____

8)



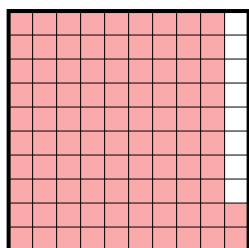
fraction _____
 decimal _____
 percent _____

9)



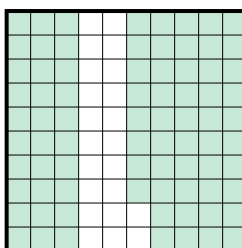
fraction _____
 decimal _____
 percent _____

10)



fraction _____
 decimal _____
 percent _____

11)



fraction _____
 decimal _____
 percent _____

