



Convert each decimal to a fraction.

Converting from a decimal to a fraction is simple as long as you remember the place values.



0.9

The example above is nine-tenths. Lets look at how we'd write that as a fraction.

$$\frac{9}{10}$$

0.63

We do the same thing for the problem above. But because it is into the hundredths place we put our number over 100.

$$\frac{63}{100}$$

Answers

Ex.  $\frac{12}{100}$

1. \_\_\_\_\_

2. \_\_\_\_\_

3. \_\_\_\_\_

4. \_\_\_\_\_

5. \_\_\_\_\_

6. \_\_\_\_\_

7. \_\_\_\_\_

8. \_\_\_\_\_

9. \_\_\_\_\_

10. \_\_\_\_\_

11. \_\_\_\_\_

12. \_\_\_\_\_

13. \_\_\_\_\_

14. \_\_\_\_\_

15. \_\_\_\_\_

16. \_\_\_\_\_

17. \_\_\_\_\_

18. \_\_\_\_\_

19. \_\_\_\_\_

20. \_\_\_\_\_

Ex)  $0.12 = \frac{12}{100}$

1)  $0.78 = \frac{\quad}{\quad}$

2)  $0.97 = \frac{\quad}{\quad}$

3)  $0.8 = \frac{\quad}{\quad}$

4)  $0.25 = \frac{\quad}{\quad}$

5)  $0.82 = \frac{\quad}{\quad}$

6)  $0.5 = \frac{\quad}{\quad}$

7)  $0.06 = \frac{\quad}{\quad}$

8)  $0.03 = \frac{\quad}{\quad}$

9)  $0.4 = \frac{\quad}{\quad}$

10)  $0.33 = \frac{\quad}{\quad}$

11)  $0.2 = \frac{\quad}{\quad}$

12)  $0.95 = \frac{\quad}{\quad}$

13)  $0.07 = \frac{\quad}{\quad}$

14)  $0.1 = \frac{\quad}{\quad}$

15)  $0.9 = \frac{\quad}{\quad}$

16)  $0.09 = \frac{\quad}{\quad}$

17)  $0.01 = \frac{\quad}{\quad}$



**Convert each decimal to a fraction.**

Converting from a decimal to a fraction is simple as long as you remember the place values.



**0.9**

The example above is nine-tenths. Lets look at how we'd write that as a fraction.

$$\frac{9}{10}$$

**0.63**

We do the same thing for the problem above. But because it is into the hundredths place we put our number over 100.

$$\frac{63}{100}$$

**Answers**

Ex.  $\frac{12}{100}$

1.  $\frac{78}{100}$

2.  $\frac{97}{100}$

3.  $\frac{8}{10}$

4.  $\frac{25}{100}$

5.  $\frac{82}{100}$

6.  $\frac{5}{10}$

7.  $\frac{6}{100}$

8.  $\frac{3}{100}$

9.  $\frac{4}{10}$

10.  $\frac{33}{100}$

11.  $\frac{2}{10}$

12.  $\frac{95}{100}$

13.  $\frac{7}{100}$

14.  $\frac{1}{10}$

15.  $\frac{9}{10}$

16.  $\frac{9}{100}$

17.  $\frac{1}{100}$

18.  $\frac{17}{100}$

19.  $\frac{8}{100}$

20.  $\frac{94}{100}$

Ex)  $0.12 = \frac{12}{100}$

1)  $0.78 = \frac{78}{100}$

2)  $0.97 = \frac{97}{100}$

3)  $0.8 = \frac{8}{10}$

4)  $0.25 = \frac{25}{100}$

5)  $0.82 = \frac{82}{100}$

6)  $0.5 = \frac{5}{10}$

7)  $0.06 = \frac{6}{100}$

8)  $0.03 = \frac{3}{100}$

9)  $0.4 = \frac{4}{10}$

10)  $0.33 = \frac{33}{100}$

11)  $0.2 = \frac{2}{10}$

12)  $0.95 = \frac{95}{100}$

13)  $0.07 = \frac{7}{100}$

14)  $0.1 = \frac{1}{10}$

15)  $0.9 = \frac{9}{10}$

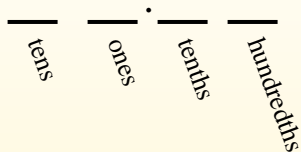
16)  $0.09 = \frac{9}{100}$

17)  $0.01 = \frac{1}{100}$



Convert each decimal to a fraction.

Converting from a decimal to a fraction is simple as long as you remember the place values.



0.9

The example above is nine-tenths. Lets look at how we'd write that as a fraction.

$$\frac{9}{10}$$

0.63

We do the same thing for the problem above. But because it is into the hundredths place we put our number over 100.

$$\frac{63}{100}$$

Answers

Ex.  $\frac{98}{100}$

1. \_\_\_\_\_

2. \_\_\_\_\_

3. \_\_\_\_\_

4. \_\_\_\_\_

5. \_\_\_\_\_

6. \_\_\_\_\_

7. \_\_\_\_\_

8. \_\_\_\_\_

9. \_\_\_\_\_

10. \_\_\_\_\_

11. \_\_\_\_\_

12. \_\_\_\_\_

13. \_\_\_\_\_

14. \_\_\_\_\_

15. \_\_\_\_\_

16. \_\_\_\_\_

17. \_\_\_\_\_

18. \_\_\_\_\_

19. \_\_\_\_\_

20. \_\_\_\_\_

Ex)  $0.98 = \frac{98}{100}$

1)  $0.36 = \frac{\quad}{\quad}$

2)  $0.03 = \frac{\quad}{\quad}$

3)  $0.77 = \frac{\quad}{\quad}$

4)  $0.2 = \frac{\quad}{\quad}$

5)  $0.44 = \frac{\quad}{\quad}$

6)  $0.87 = \frac{\quad}{\quad}$

7)  $0.01 = \frac{\quad}{\quad}$

8)  $0.7 = \frac{\quad}{\quad}$

9)  $0.06 = \frac{\quad}{\quad}$

10)  $0.02 = \frac{\quad}{\quad}$

11)  $0.67 = \frac{\quad}{\quad}$

12)  $0.1 = \frac{\quad}{\quad}$

13)  $0.09 = \frac{\quad}{\quad}$

14)  $0.32 = \frac{\quad}{\quad}$

15)  $0.05 = \frac{\quad}{\quad}$

16)  $0.65 = \frac{\quad}{\quad}$

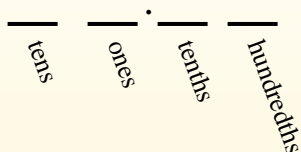
17)  $0.3 = \frac{\quad}{\quad}$

1-10	95	90	85	80	75	70	65	60	55	50
11-20	45	40	35	30	25	20	15	10	5	0



## Convert each decimal to a fraction.

Converting from a decimal to a fraction is simple as long as you remember the place values.



**0.9**

The example above is nine-tenths. Lets look at how we'd write that as a fraction.

$$\frac{9}{10}$$

**0.63**

We do the same thing for the problem above. But because it is into the hundredths place we put our number over 100.

$$\frac{63}{100}$$

## Answers

Ex.  $\frac{98}{100}$

1.  $\frac{36}{100}$

2.  $\frac{3}{100}$

3.  $\frac{77}{100}$

4.  $\frac{2}{10}$

5.  $\frac{44}{100}$

6.  $\frac{87}{100}$

7.  $\frac{1}{100}$

8.  $\frac{7}{10}$

9.  $\frac{6}{100}$

10.  $\frac{2}{100}$

11.  $\frac{67}{100}$

12.  $\frac{1}{10}$

13.  $\frac{9}{100}$

14.  $\frac{32}{100}$

15.  $\frac{5}{100}$

16.  $\frac{65}{100}$

17.  $\frac{3}{10}$

18.  $\frac{6}{10}$

19.  $\frac{70}{100}$

20.  $\frac{9}{10}$

Ex)  $0.98 = \frac{98}{100}$

1)  $0.36 = \frac{36}{100}$

2)  $0.03 = \frac{3}{100}$

3)  $0.77 = \frac{77}{100}$

4)  $0.2 = \frac{2}{10}$

5)  $0.44 = \frac{44}{100}$

6)  $0.87 = \frac{87}{100}$

7)  $0.01 = \frac{1}{100}$

8)  $0.7 = \frac{7}{10}$

9)  $0.06 = \frac{6}{100}$

10)  $0.02 = \frac{2}{100}$

11)  $0.67 = \frac{67}{100}$

12)  $0.1 = \frac{1}{10}$

13)  $0.09 = \frac{9}{100}$

14)  $0.32 = \frac{32}{100}$

15)  $0.05 = \frac{5}{100}$

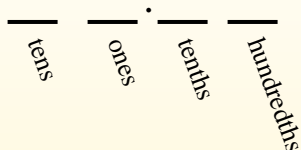
16)  $0.65 = \frac{65}{100}$

17)  $0.3 = \frac{3}{10}$



Convert each decimal to a fraction.

Converting from a decimal to a fraction is simple as long as you remember the place values.



0.9

The example above is nine-tenths. Lets look at how we'd write that as a fraction.

$$\frac{9}{10}$$

0.63

We do the same thing for the problem above. But because it is into the hundredths place we put our number over 100.

$$\frac{63}{100}$$

Answers

Ex.  $\frac{44}{100}$

1. \_\_\_\_\_

2. \_\_\_\_\_

3. \_\_\_\_\_

4. \_\_\_\_\_

5. \_\_\_\_\_

6. \_\_\_\_\_

7. \_\_\_\_\_

8. \_\_\_\_\_

9. \_\_\_\_\_

10. \_\_\_\_\_

11. \_\_\_\_\_

12. \_\_\_\_\_

13. \_\_\_\_\_

14. \_\_\_\_\_

15. \_\_\_\_\_

16. \_\_\_\_\_

17. \_\_\_\_\_

18. \_\_\_\_\_

19. \_\_\_\_\_

20. \_\_\_\_\_

Ex)  $0.44 = \frac{44}{100}$

1)  $0.05 = \frac{\quad}{\quad}$

2)  $0.28 = \frac{\quad}{\quad}$

3)  $0.9 = \frac{\quad}{\quad}$

4)  $0.2 = \frac{\quad}{\quad}$

5)  $0.59 = \frac{\quad}{\quad}$

6)  $0.8 = \frac{\quad}{\quad}$

7)  $0.08 = \frac{\quad}{\quad}$

8)  $0.3 = \frac{\quad}{\quad}$

9)  $0.86 = \frac{\quad}{\quad}$

10)  $0.06 = \frac{\quad}{\quad}$

11)  $0.90 = \frac{\quad}{\quad}$

12)  $0.7 = \frac{\quad}{\quad}$

13)  $0.4 = \frac{\quad}{\quad}$

14)  $0.1 = \frac{\quad}{\quad}$

15)  $0.01 = \frac{\quad}{\quad}$

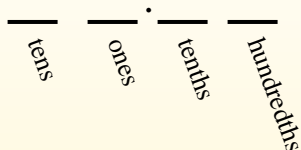
16)  $0.76 = \frac{\quad}{\quad}$

17)  $0.83 = \frac{\quad}{\quad}$



**Convert each decimal to a fraction.**

Converting from a decimal to a fraction is simple as long as you remember the place values.



**0.9**

The example above is nine-tenths. Lets look at how we'd write that as a fraction.

$$\frac{9}{10}$$

**0.63**

We do the same thing for the problem above. But because it is into the hundredths place we put our number over 100.

$$\frac{63}{100}$$

**Answers**

- Ex.  $\frac{44}{100}$
- 1.  $\frac{5}{100}$
- 2.  $\frac{28}{100}$
- 3.  $\frac{9}{10}$
- 4.  $\frac{2}{10}$
- 5.  $\frac{59}{100}$
- 6.  $\frac{8}{10}$
- 7.  $\frac{8}{100}$
- 8.  $\frac{3}{10}$
- 9.  $\frac{86}{100}$
- 10.  $\frac{6}{100}$
- 11.  $\frac{90}{100}$
- 12.  $\frac{7}{10}$
- 13.  $\frac{4}{10}$
- 14.  $\frac{1}{10}$
- 15.  $\frac{1}{100}$
- 16.  $\frac{76}{100}$
- 17.  $\frac{83}{100}$
- 18.  $\frac{36}{100}$
- 19.  $\frac{9}{100}$
- 20.  $\frac{17}{100}$

Ex)  $0.44 = \frac{44}{100}$

1)  $0.05 = \frac{5}{100}$

2)  $0.28 = \frac{28}{100}$

3)  $0.9 = \frac{9}{10}$

4)  $0.2 = \frac{2}{10}$

5)  $0.59 = \frac{59}{100}$

6)  $0.8 = \frac{8}{10}$

7)  $0.08 = \frac{8}{100}$

8)  $0.3 = \frac{3}{10}$

9)  $0.86 = \frac{86}{100}$

10)  $0.06 = \frac{6}{100}$

11)  $0.90 = \frac{90}{100}$

12)  $0.7 = \frac{7}{10}$

13)  $0.4 = \frac{4}{10}$

14)  $0.1 = \frac{1}{10}$

15)  $0.01 = \frac{1}{100}$

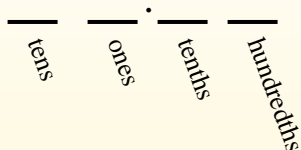
16)  $0.76 = \frac{76}{100}$

17)  $0.83 = \frac{83}{100}$



Convert each decimal to a fraction.

Converting from a decimal to a fraction is simple as long as you remember the place values.



0.9

The example above is nine-tenths. Lets look at how we'd write that as a fraction.

$$\frac{9}{10}$$

0.63

We do the same thing for the problem above. But because it is into the hundredths place we put our number over 100.

$$\frac{63}{100}$$

Answers

Ex.  $\frac{7}{100}$

1. \_\_\_\_\_

2. \_\_\_\_\_

3. \_\_\_\_\_

4. \_\_\_\_\_

5. \_\_\_\_\_

6. \_\_\_\_\_

7. \_\_\_\_\_

8. \_\_\_\_\_

9. \_\_\_\_\_

10. \_\_\_\_\_

11. \_\_\_\_\_

12. \_\_\_\_\_

13. \_\_\_\_\_

14. \_\_\_\_\_

15. \_\_\_\_\_

16. \_\_\_\_\_

17. \_\_\_\_\_

18. \_\_\_\_\_

19. \_\_\_\_\_

20. \_\_\_\_\_

Ex)  $0.07 = \frac{7}{100}$

1)  $0.89 = \frac{\quad}{\quad}$

2)  $0.03 = \frac{\quad}{\quad}$

3)  $0.44 = \frac{\quad}{\quad}$

4)  $0.20 = \frac{\quad}{\quad}$

5)  $0.04 = \frac{\quad}{\quad}$

6)  $0.8 = \frac{\quad}{\quad}$

7)  $0.45 = \frac{\quad}{\quad}$

8)  $0.4 = \frac{\quad}{\quad}$

9)  $0.1 = \frac{\quad}{\quad}$

10)  $0.2 = \frac{\quad}{\quad}$

11)  $0.02 = \frac{\quad}{\quad}$

12)  $0.72 = \frac{\quad}{\quad}$

13)  $0.6 = \frac{\quad}{\quad}$

14)  $0.01 = \frac{\quad}{\quad}$

15)  $0.35 = \frac{\quad}{\quad}$

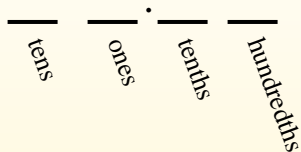
16)  $0.80 = \frac{\quad}{\quad}$

17)  $0.11 = \frac{\quad}{\quad}$



**Convert each decimal to a fraction.**

Converting from a decimal to a fraction is simple as long as you remember the place values.



**0.9**

The example above is nine-tenths. Lets look at how we'd write that as a fraction.

$$\frac{9}{10}$$

**0.63**

We do the same thing for the problem above. But because it is into the hundredths place we put our number over 100.

$$\frac{63}{100}$$

**Answers**

- Ex.  $\frac{7}{100}$
- 1.  $\frac{89}{100}$
- 2.  $\frac{3}{100}$
- 3.  $\frac{44}{100}$
- 4.  $\frac{20}{100}$
- 5.  $\frac{4}{100}$
- 6.  $\frac{8}{10}$
- 7.  $\frac{45}{100}$
- 8.  $\frac{4}{10}$
- 9.  $\frac{1}{10}$
- 10.  $\frac{2}{10}$
- 11.  $\frac{2}{100}$
- 12.  $\frac{72}{100}$
- 13.  $\frac{6}{10}$
- 14.  $\frac{1}{100}$
- 15.  $\frac{35}{100}$
- 16.  $\frac{80}{100}$
- 17.  $\frac{11}{100}$
- 18.  $\frac{6}{100}$
- 19.  $\frac{28}{100}$
- 20.  $\frac{7}{10}$

Ex)  $0.07 = \frac{7}{100}$

1)  $0.89 = \frac{89}{100}$

2)  $0.03 = \frac{3}{100}$

3)  $0.44 = \frac{44}{100}$

4)  $0.20 = \frac{20}{100}$

5)  $0.04 = \frac{4}{100}$

6)  $0.8 = \frac{8}{10}$

7)  $0.45 = \frac{45}{100}$

8)  $0.4 = \frac{4}{10}$

9)  $0.1 = \frac{1}{10}$

10)  $0.2 = \frac{2}{10}$

11)  $0.02 = \frac{2}{100}$

12)  $0.72 = \frac{72}{100}$

13)  $0.6 = \frac{6}{10}$

14)  $0.01 = \frac{1}{100}$

15)  $0.35 = \frac{35}{100}$

16)  $0.80 = \frac{80}{100}$

17)  $0.11 = \frac{11}{100}$





Convert each decimal to a fraction.

Converting from a decimal to a fraction is simple as long as you remember the place values.



0.9

The example above is nine-tenths. Lets look at how we'd write that as a fraction.

$$\frac{9}{10}$$

0.63

We do the same thing for the problem above. But because it is into the hundredths place we put our number over 100.

$$\frac{63}{100}$$

Answers

Ex.  $\frac{63}{100}$

1. \_\_\_\_\_

2. \_\_\_\_\_

3. \_\_\_\_\_

4. \_\_\_\_\_

5. \_\_\_\_\_

6. \_\_\_\_\_

7. \_\_\_\_\_

8. \_\_\_\_\_

9. \_\_\_\_\_

10. \_\_\_\_\_

11. \_\_\_\_\_

12. \_\_\_\_\_

13. \_\_\_\_\_

14. \_\_\_\_\_

15. \_\_\_\_\_

16. \_\_\_\_\_

17. \_\_\_\_\_

18. \_\_\_\_\_

19. \_\_\_\_\_

20. \_\_\_\_\_

Ex)  $0.63 = \frac{63}{100}$

1)  $0.09 = \frac{\quad}{\quad}$

2)  $0.14 = \frac{\quad}{\quad}$

3)  $0.9 = \frac{\quad}{\quad}$

4)  $0.69 = \frac{\quad}{\quad}$

5)  $0.20 = \frac{\quad}{\quad}$

6)  $0.80 = \frac{\quad}{\quad}$

7)  $0.90 = \frac{\quad}{\quad}$

8)  $0.04 = \frac{\quad}{\quad}$

9)  $0.05 = \frac{\quad}{\quad}$

10)  $0.8 = \frac{\quad}{\quad}$

11)  $0.02 = \frac{\quad}{\quad}$

12)  $0.4 = \frac{\quad}{\quad}$

13)  $0.42 = \frac{\quad}{\quad}$

14)  $0.19 = \frac{\quad}{\quad}$

15)  $0.5 = \frac{\quad}{\quad}$

16)  $0.49 = \frac{\quad}{\quad}$

17)  $0.08 = \frac{\quad}{\quad}$



## Convert each decimal to a fraction.

Converting from a decimal to a fraction is simple as long as you remember the place values.



**0.9**

The example above is nine-tenths. Lets look at how we'd write that as a fraction.

$$\frac{9}{10}$$

**0.63**

We do the same thing for the problem above. But because it is into the hundredths place we put our number over 100.

$$\frac{63}{100}$$

## Answers

- Ex.  $\frac{63}{100}$
1.  $\frac{9}{100}$
2.  $\frac{14}{100}$
3.  $\frac{9}{10}$
4.  $\frac{69}{100}$
5.  $\frac{20}{100}$
6.  $\frac{80}{100}$
7.  $\frac{90}{100}$
8.  $\frac{4}{100}$
9.  $\frac{5}{100}$
10.  $\frac{8}{10}$
11.  $\frac{2}{100}$
12.  $\frac{4}{10}$
13.  $\frac{42}{100}$
14.  $\frac{19}{100}$
15.  $\frac{5}{10}$
16.  $\frac{49}{100}$
17.  $\frac{8}{100}$
18.  $\frac{2}{10}$
19.  $\frac{3}{100}$
20.  $\frac{6}{10}$

Ex)  $0.63 = \frac{63}{100}$

1)  $0.09 = \frac{9}{100}$

2)  $0.14 = \frac{14}{100}$

3)  $0.9 = \frac{9}{10}$

4)  $0.69 = \frac{69}{100}$

5)  $0.20 = \frac{20}{100}$

6)  $0.80 = \frac{80}{100}$

7)  $0.90 = \frac{90}{100}$

8)  $0.04 = \frac{4}{100}$

9)  $0.05 = \frac{5}{100}$

10)  $0.8 = \frac{8}{10}$

11)  $0.02 = \frac{2}{100}$

12)  $0.4 = \frac{4}{10}$

13)  $0.42 = \frac{42}{100}$

14)  $0.19 = \frac{19}{100}$

15)  $0.5 = \frac{5}{10}$

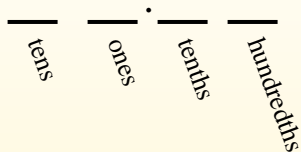
16)  $0.49 = \frac{49}{100}$

17)  $0.08 = \frac{8}{100}$



Convert each decimal to a fraction.

Converting from a decimal to a fraction is simple as long as you remember the place values.



0.9

The example above is nine-tenths. Lets look at how we'd write that as a fraction.

$$\frac{9}{10}$$

0.63

We do the same thing for the problem above. But because it is into the hundredths place we put our number over 100.

$$\frac{63}{100}$$

Answers

Ex.  $\frac{8}{10}$

1. \_\_\_\_\_
2. \_\_\_\_\_
3. \_\_\_\_\_
4. \_\_\_\_\_
5. \_\_\_\_\_
6. \_\_\_\_\_
7. \_\_\_\_\_
8. \_\_\_\_\_
9. \_\_\_\_\_
10. \_\_\_\_\_
11. \_\_\_\_\_
12. \_\_\_\_\_
13. \_\_\_\_\_
14. \_\_\_\_\_
15. \_\_\_\_\_
16. \_\_\_\_\_
17. \_\_\_\_\_
18. \_\_\_\_\_
19. \_\_\_\_\_
20. \_\_\_\_\_

Ex)  $0.8 = \frac{8}{10}$

1)  $0.6 = \frac{\quad}{\quad}$

2)  $0.4 = \frac{\quad}{\quad}$

3)  $0.73 = \frac{\quad}{\quad}$

4)  $0.64 = \frac{\quad}{\quad}$

5)  $0.3 = \frac{\quad}{\quad}$

6)  $0.94 = \frac{\quad}{\quad}$

7)  $0.9 = \frac{\quad}{\quad}$

8)  $0.03 = \frac{\quad}{\quad}$

9)  $0.02 = \frac{\quad}{\quad}$

10)  $0.09 = \frac{\quad}{\quad}$

11)  $0.08 = \frac{\quad}{\quad}$

12)  $0.71 = \frac{\quad}{\quad}$

13)  $0.04 = \frac{\quad}{\quad}$

14)  $0.42 = \frac{\quad}{\quad}$

15)  $0.01 = \frac{\quad}{\quad}$

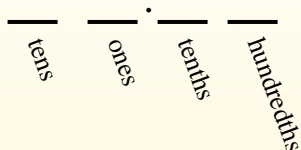
16)  $0.93 = \frac{\quad}{\quad}$

17)  $0.67 = \frac{\quad}{\quad}$



**Convert each decimal to a fraction.**

Converting from a decimal to a fraction is simple as long as you remember the place values.



**0.9**

The example above is nine-tenths. Lets look at how we'd write that as a fraction.

$$\frac{9}{10}$$

**0.63**

We do the same thing for the problem above. But because it is into the hundredths place we put our number over 100.

$$\frac{63}{100}$$

**Answers**

Ex.  $\frac{8}{10}$

1.  $\frac{6}{10}$

2.  $\frac{4}{10}$

3.  $\frac{73}{100}$

4.  $\frac{64}{100}$

5.  $\frac{3}{10}$

6.  $\frac{94}{100}$

7.  $\frac{9}{10}$

8.  $\frac{3}{100}$

9.  $\frac{2}{100}$

10.  $\frac{9}{100}$

11.  $\frac{8}{100}$

12.  $\frac{71}{100}$

13.  $\frac{4}{100}$

14.  $\frac{42}{100}$

15.  $\frac{1}{100}$

16.  $\frac{93}{100}$

17.  $\frac{67}{100}$

18.  $\frac{7}{10}$

19.  $\frac{58}{100}$

20.  $\frac{46}{100}$

Ex)  $0.8 = \frac{8}{10}$

1)  $0.6 = \frac{6}{10}$

2)  $0.4 = \frac{4}{10}$

3)  $0.73 = \frac{73}{100}$

4)  $0.64 = \frac{64}{100}$

5)  $0.3 = \frac{3}{10}$

6)  $0.94 = \frac{94}{100}$

7)  $0.9 = \frac{9}{10}$

8)  $0.03 = \frac{3}{100}$

9)  $0.02 = \frac{2}{100}$

10)  $0.09 = \frac{9}{100}$

11)  $0.08 = \frac{8}{100}$

12)  $0.71 = \frac{71}{100}$

13)  $0.04 = \frac{4}{100}$

14)  $0.42 = \frac{42}{100}$

15)  $0.01 = \frac{1}{100}$

16)  $0.93 = \frac{93}{100}$

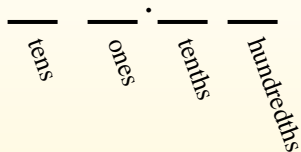
17)  $0.67 = \frac{67}{100}$

1-10	95	90	85	80	75	70	65	60	55	50
11-20	45	40	35	30	25	20	15	10	5	0



Convert each decimal to a fraction.

Converting from a decimal to a fraction is simple as long as you remember the place values.



0.9

The example above is nine-tenths. Lets look at how we'd write that as a fraction.

9/10

0.63

We do the same thing for the problem above. But because it is into the hundredths place we put our number over 100.

63/100

Answers

Ex. 6/100

- 1. \_\_\_\_\_
- 2. \_\_\_\_\_
- 3. \_\_\_\_\_
- 4. \_\_\_\_\_
- 5. \_\_\_\_\_
- 6. \_\_\_\_\_
- 7. \_\_\_\_\_
- 8. \_\_\_\_\_
- 9. \_\_\_\_\_
- 10. \_\_\_\_\_
- 11. \_\_\_\_\_
- 12. \_\_\_\_\_
- 13. \_\_\_\_\_
- 14. \_\_\_\_\_
- 15. \_\_\_\_\_
- 16. \_\_\_\_\_
- 17. \_\_\_\_\_
- 18. \_\_\_\_\_
- 19. \_\_\_\_\_
- 20. \_\_\_\_\_

Ex) 0.06 = 6/100

1) 0.70 = \_\_\_\_\_

2) 0.05 = \_\_\_\_\_

3) 0.49 = \_\_\_\_\_

4) 0.09 = \_\_\_\_\_

5) 0.7 = \_\_\_\_\_

6) 0.08 = \_\_\_\_\_

7) 0.44 = \_\_\_\_\_

8) 0.69 = \_\_\_\_\_

9) 0.02 = \_\_\_\_\_

10) 0.8 = \_\_\_\_\_

11) 0.50 = \_\_\_\_\_

12) 0.6 = \_\_\_\_\_

13) 0.2 = \_\_\_\_\_

14) 0.07 = \_\_\_\_\_

15) 0.80 = \_\_\_\_\_

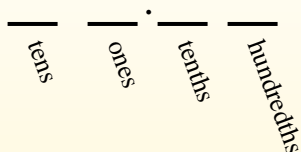
16) 0.4 = \_\_\_\_\_

17) 0.1 = \_\_\_\_\_



**Convert each decimal to a fraction.**

Converting from a decimal to a fraction is simple as long as you remember the place values.



**0.9**

The example above is nine-tenths. Lets look at how we'd write that as a fraction.

$$\frac{9}{10}$$

**0.63**

We do the same thing for the problem above. But because it is into the hundredths place we put our number over 100.

$$\frac{63}{100}$$

**Answers**

Ex.  $\frac{6}{100}$

1.  $\frac{70}{100}$

2.  $\frac{5}{100}$

3.  $\frac{49}{100}$

4.  $\frac{9}{100}$

5.  $\frac{7}{10}$

6.  $\frac{8}{100}$

7.  $\frac{44}{100}$

8.  $\frac{69}{100}$

9.  $\frac{2}{100}$

10.  $\frac{8}{10}$

11.  $\frac{50}{100}$

12.  $\frac{6}{10}$

13.  $\frac{2}{10}$

14.  $\frac{7}{100}$

15.  $\frac{80}{100}$

16.  $\frac{4}{10}$

17.  $\frac{1}{10}$

18.  $\frac{3}{10}$

19.  $\frac{96}{100}$

20.  $\frac{57}{100}$

Ex)  $0.06 = \frac{6}{100}$

1)  $0.70 = \frac{70}{100}$

2)  $0.05 = \frac{5}{100}$

3)  $0.49 = \frac{49}{100}$

4)  $0.09 = \frac{9}{100}$

5)  $0.7 = \frac{7}{10}$

6)  $0.08 = \frac{8}{100}$

7)  $0.44 = \frac{44}{100}$

8)  $0.69 = \frac{69}{100}$

9)  $0.02 = \frac{2}{100}$

10)  $0.8 = \frac{8}{10}$

11)  $0.50 = \frac{50}{100}$

12)  $0.6 = \frac{6}{10}$

13)  $0.2 = \frac{2}{10}$

14)  $0.07 = \frac{7}{100}$

15)  $0.80 = \frac{80}{100}$

16)  $0.4 = \frac{4}{10}$

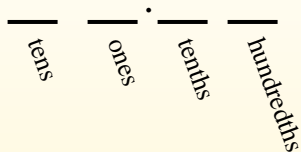
17)  $0.1 = \frac{1}{10}$

1-10	95	90	85	80	75	70	65	60	55	50
11-20	45	40	35	30	25	20	15	10	5	0



Convert each decimal to a fraction.

Converting from a decimal to a fraction is simple as long as you remember the place values.



0.9

The example above is nine-tenths. Lets look at how we'd write that as a fraction.

$$\frac{9}{10}$$

0.63

We do the same thing for the problem above. But because it is into the hundredths place we put our number over 100.

$$\frac{63}{100}$$

**Answers**

Ex.  $\frac{5}{10}$

1. \_\_\_\_\_

2. \_\_\_\_\_

3. \_\_\_\_\_

4. \_\_\_\_\_

5. \_\_\_\_\_

6. \_\_\_\_\_

7. \_\_\_\_\_

8. \_\_\_\_\_

9. \_\_\_\_\_

10. \_\_\_\_\_

11. \_\_\_\_\_

12. \_\_\_\_\_

13. \_\_\_\_\_

14. \_\_\_\_\_

15. \_\_\_\_\_

16. \_\_\_\_\_

17. \_\_\_\_\_

18. \_\_\_\_\_

19. \_\_\_\_\_

20. \_\_\_\_\_

Ex)  $0.5 = \frac{5}{10}$

1)  $0.28 = \underline{\hspace{2cm}}$

2)  $0.2 = \underline{\hspace{2cm}}$

3)  $0.11 = \underline{\hspace{2cm}}$

4)  $0.8 = \underline{\hspace{2cm}}$

5)  $0.6 = \underline{\hspace{2cm}}$

6)  $0.3 = \underline{\hspace{2cm}}$

7)  $0.7 = \underline{\hspace{2cm}}$

8)  $0.1 = \underline{\hspace{2cm}}$

9)  $0.07 = \underline{\hspace{2cm}}$

10)  $0.31 = \underline{\hspace{2cm}}$

11)  $0.83 = \underline{\hspace{2cm}}$

12)  $0.77 = \underline{\hspace{2cm}}$

13)  $0.02 = \underline{\hspace{2cm}}$

14)  $0.62 = \underline{\hspace{2cm}}$

15)  $0.04 = \underline{\hspace{2cm}}$

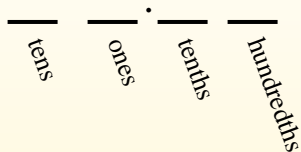
16)  $0.43 = \underline{\hspace{2cm}}$

17)  $0.01 = \underline{\hspace{2cm}}$



**Convert each decimal to a fraction.**

Converting from a decimal to a fraction is simple as long as you remember the place values.



**0.9**

The example above is nine-tenths. Lets look at how we'd write that as a fraction.

$$\frac{9}{10}$$

**0.63**

We do the same thing for the problem above. But because it is into the hundredths place we put our number over 100.

$$\frac{63}{100}$$

**Answers**

Ex.  $\frac{5}{10}$

1.  $\frac{28}{100}$

2.  $\frac{2}{10}$

3.  $\frac{11}{100}$

4.  $\frac{8}{10}$

5.  $\frac{6}{10}$

6.  $\frac{3}{10}$

7.  $\frac{7}{10}$

8.  $\frac{1}{10}$

9.  $\frac{7}{100}$

10.  $\frac{31}{100}$

11.  $\frac{83}{100}$

12.  $\frac{77}{100}$

13.  $\frac{2}{100}$

14.  $\frac{62}{100}$

15.  $\frac{4}{100}$

16.  $\frac{43}{100}$

17.  $\frac{1}{100}$

18.  $\frac{20}{100}$

19.  $\frac{21}{100}$

20.  $\frac{6}{100}$

Ex)  $0.5 = \frac{5}{10}$

1)  $0.28 = \frac{28}{100}$

2)  $0.2 = \frac{2}{10}$

3)  $0.11 = \frac{11}{100}$

4)  $0.8 = \frac{8}{10}$

5)  $0.6 = \frac{6}{10}$

6)  $0.3 = \frac{3}{10}$

7)  $0.7 = \frac{7}{10}$

8)  $0.1 = \frac{1}{10}$

9)  $0.07 = \frac{7}{100}$

10)  $0.31 = \frac{31}{100}$

11)  $0.83 = \frac{83}{100}$

12)  $0.77 = \frac{77}{100}$

13)  $0.02 = \frac{2}{100}$

14)  $0.62 = \frac{62}{100}$

15)  $0.04 = \frac{4}{100}$

16)  $0.43 = \frac{43}{100}$

17)  $0.01 = \frac{1}{100}$





Convert each decimal to a fraction.

Converting from a decimal to a fraction is simple as long as you remember the place values.



0.9

The example above is nine-tenths. Lets look at how we'd write that as a fraction.

$$\frac{9}{10}$$

0.63

We do the same thing for the problem above. But because it is into the hundredths place we put our number over 100.

$$\frac{63}{100}$$

Answers

Ex.  $\frac{8}{10}$

1. \_\_\_\_\_

2. \_\_\_\_\_

3. \_\_\_\_\_

4. \_\_\_\_\_

5. \_\_\_\_\_

6. \_\_\_\_\_

7. \_\_\_\_\_

8. \_\_\_\_\_

9. \_\_\_\_\_

10. \_\_\_\_\_

11. \_\_\_\_\_

12. \_\_\_\_\_

13. \_\_\_\_\_

14. \_\_\_\_\_

15. \_\_\_\_\_

16. \_\_\_\_\_

17. \_\_\_\_\_

18. \_\_\_\_\_

19. \_\_\_\_\_

20. \_\_\_\_\_

Ex)  $0.8 = \frac{8}{10}$

1)  $0.7 = \frac{\quad}{\quad}$

2)  $0.05 = \frac{\quad}{\quad}$

3)  $0.55 = \frac{\quad}{\quad}$

4)  $0.1 = \frac{\quad}{\quad}$

5)  $0.02 = \frac{\quad}{\quad}$

6)  $0.9 = \frac{\quad}{\quad}$

7)  $0.09 = \frac{\quad}{\quad}$

8)  $0.43 = \frac{\quad}{\quad}$

9)  $0.15 = \frac{\quad}{\quad}$

10)  $0.34 = \frac{\quad}{\quad}$

11)  $0.4 = \frac{\quad}{\quad}$

12)  $0.07 = \frac{\quad}{\quad}$

13)  $0.68 = \frac{\quad}{\quad}$

14)  $0.13 = \frac{\quad}{\quad}$

15)  $0.39 = \frac{\quad}{\quad}$

16)  $0.06 = \frac{\quad}{\quad}$

17)  $0.6 = \frac{\quad}{\quad}$



**Convert each decimal to a fraction.**

Converting from a decimal to a fraction is simple as long as you remember the place values.



**0.9**

The example above is nine-tenths. Lets look at how we'd write that as a fraction.

$$\frac{9}{10}$$

**0.63**

We do the same thing for the problem above. But because it is into the hundredths place we put our number over 100.

$$\frac{63}{100}$$

**Answers**

- Ex.  $\frac{8}{10}$
- 1.  $\frac{7}{10}$
- 2.  $\frac{5}{100}$
- 3.  $\frac{55}{100}$
- 4.  $\frac{1}{10}$
- 5.  $\frac{2}{100}$
- 6.  $\frac{9}{10}$
- 7.  $\frac{9}{100}$
- 8.  $\frac{43}{100}$
- 9.  $\frac{15}{100}$
- 10.  $\frac{34}{100}$
- 11.  $\frac{4}{10}$
- 12.  $\frac{7}{100}$
- 13.  $\frac{68}{100}$
- 14.  $\frac{13}{100}$
- 15.  $\frac{39}{100}$
- 16.  $\frac{6}{100}$
- 17.  $\frac{6}{10}$
- 18.  $\frac{5}{10}$
- 19.  $\frac{49}{100}$
- 20.  $\frac{1}{100}$

Ex)  $0.8 = \frac{8}{10}$

1)  $0.7 = \frac{7}{10}$

2)  $0.05 = \frac{5}{100}$

3)  $0.55 = \frac{55}{100}$

4)  $0.1 = \frac{1}{10}$

5)  $0.02 = \frac{2}{100}$

6)  $0.9 = \frac{9}{10}$

7)  $0.09 = \frac{9}{100}$

8)  $0.43 = \frac{43}{100}$

9)  $0.15 = \frac{15}{100}$

10)  $0.34 = \frac{34}{100}$

11)  $0.4 = \frac{4}{10}$

12)  $0.07 = \frac{7}{100}$

13)  $0.68 = \frac{68}{100}$

14)  $0.13 = \frac{13}{100}$

15)  $0.39 = \frac{39}{100}$

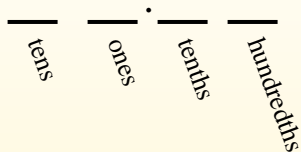
16)  $0.06 = \frac{6}{100}$

17)  $0.6 = \frac{6}{10}$



Convert each decimal to a fraction.

Converting from a decimal to a fraction is simple as long as you remember the place values.



0.9

The example above is nine-tenths. Lets look at how we'd write that as a fraction.

$$\frac{9}{10}$$

0.63

We do the same thing for the problem above. But because it is into the hundredths place we put our number over 100.

$$\frac{63}{100}$$

Answers

Ex.  $\frac{5}{10}$

1. \_\_\_\_\_

2. \_\_\_\_\_

3. \_\_\_\_\_

4. \_\_\_\_\_

5. \_\_\_\_\_

6. \_\_\_\_\_

7. \_\_\_\_\_

8. \_\_\_\_\_

9. \_\_\_\_\_

10. \_\_\_\_\_

11. \_\_\_\_\_

12. \_\_\_\_\_

13. \_\_\_\_\_

14. \_\_\_\_\_

15. \_\_\_\_\_

16. \_\_\_\_\_

17. \_\_\_\_\_

18. \_\_\_\_\_

19. \_\_\_\_\_

20. \_\_\_\_\_

Ex)  $0.5 = \frac{5}{10}$

1)  $0.32 = \underline{\hspace{1cm}}$

2)  $0.8 = \underline{\hspace{1cm}}$

3)  $0.04 = \underline{\hspace{1cm}}$

4)  $0.7 = \underline{\hspace{1cm}}$

5)  $0.08 = \underline{\hspace{1cm}}$

6)  $0.21 = \underline{\hspace{1cm}}$

7)  $0.03 = \underline{\hspace{1cm}}$

8)  $0.81 = \underline{\hspace{1cm}}$

9)  $0.9 = \underline{\hspace{1cm}}$

10)  $0.53 = \underline{\hspace{1cm}}$

11)  $0.2 = \underline{\hspace{1cm}}$

12)  $0.1 = \underline{\hspace{1cm}}$

13)  $0.87 = \underline{\hspace{1cm}}$

14)  $0.05 = \underline{\hspace{1cm}}$

15)  $0.90 = \underline{\hspace{1cm}}$

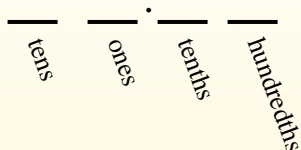
16)  $0.06 = \underline{\hspace{1cm}}$

17)  $0.31 = \underline{\hspace{1cm}}$



**Convert each decimal to a fraction.**

Converting from a decimal to a fraction is simple as long as you remember the place values.



**0.9**

The example above is nine-tenths. Lets look at how we'd write that as a fraction.

$$\frac{9}{10}$$

**0.63**

We do the same thing for the problem above. But because it is into the hundredths place we put our number over 100.

$$\frac{63}{100}$$

**Answers**

- Ex.  $\frac{5}{10}$
- 1.  $\frac{32}{100}$
- 2.  $\frac{8}{10}$
- 3.  $\frac{4}{100}$
- 4.  $\frac{7}{10}$
- 5.  $\frac{8}{100}$
- 6.  $\frac{21}{100}$
- 7.  $\frac{3}{100}$
- 8.  $\frac{81}{100}$
- 9.  $\frac{9}{10}$
- 10.  $\frac{53}{100}$
- 11.  $\frac{2}{10}$
- 12.  $\frac{1}{10}$
- 13.  $\frac{87}{100}$
- 14.  $\frac{5}{100}$
- 15.  $\frac{90}{100}$
- 16.  $\frac{6}{100}$
- 17.  $\frac{31}{100}$
- 18.  $\frac{35}{100}$
- 19.  $\frac{99}{100}$
- 20.  $\frac{6}{10}$

Ex)  $0.5 = \frac{5}{10}$

1)  $0.32 = \frac{32}{100}$

2)  $0.8 = \frac{8}{10}$

3)  $0.04 = \frac{4}{100}$

4)  $0.7 = \frac{7}{10}$

5)  $0.08 = \frac{8}{100}$

6)  $0.21 = \frac{21}{100}$

7)  $0.03 = \frac{3}{100}$

8)  $0.81 = \frac{81}{100}$

9)  $0.9 = \frac{9}{10}$

10)  $0.53 = \frac{53}{100}$

11)  $0.2 = \frac{2}{10}$

12)  $0.1 = \frac{1}{10}$

13)  $0.87 = \frac{87}{100}$

14)  $0.05 = \frac{5}{100}$

15)  $0.90 = \frac{90}{100}$

16)  $0.06 = \frac{6}{100}$

17)  $0.31 = \frac{31}{100}$