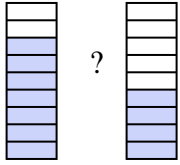


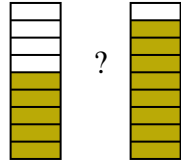


Compare the size of the fractions using $<$, $>$ or $=$.

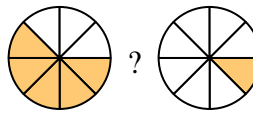
Ex)



1)



2)



Answers

Ex. $\frac{7}{9}$ $>$ $\frac{4}{9}$

1. _____

2. _____

3. _____

4. _____

5. _____

6. _____

7. _____

8. _____

9. _____

10. _____

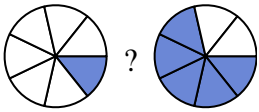
11. _____

12. _____

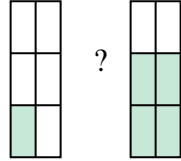
13. _____

14. _____

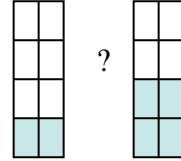
3)



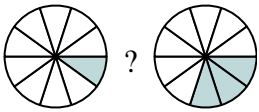
4)



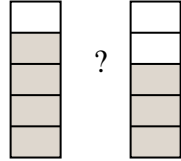
5)



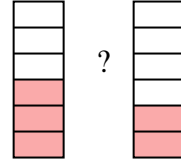
6)



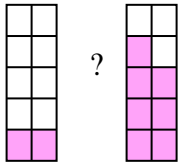
7)



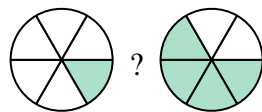
8)



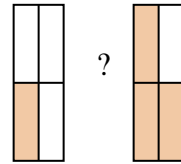
9)



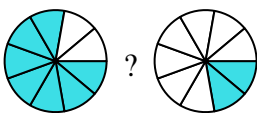
10)



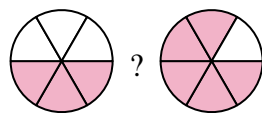
11)



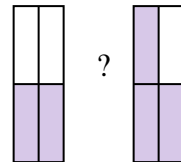
12)



13)

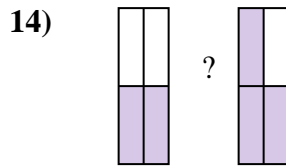
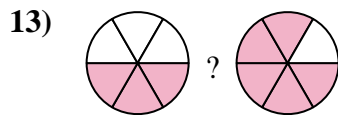
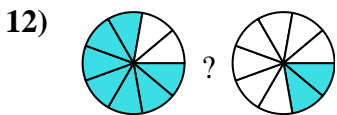
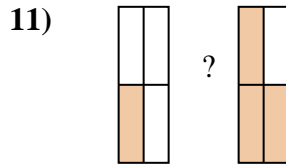
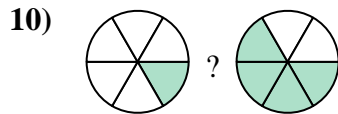
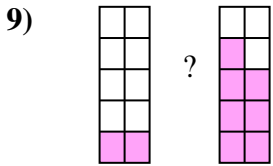
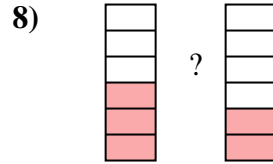

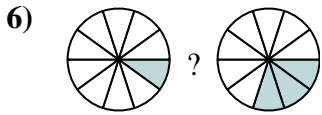
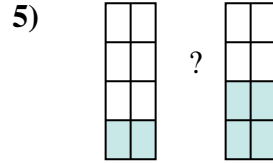
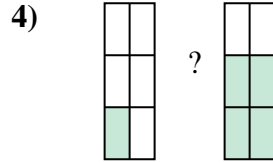
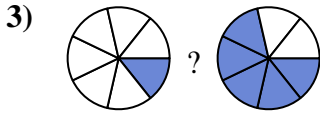
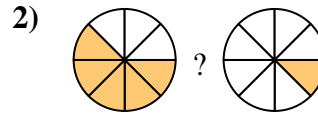

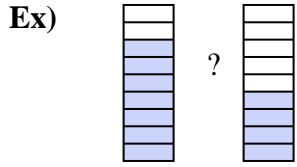


14)





Compare the size of the fractions using $<$, $>$ or $=$.



Answers

Ex.	$\frac{7}{9}$	$>$	$\frac{4}{9}$
1.	$\frac{5}{9}$	$<$	$\frac{8}{9}$
2.	$\frac{5}{8}$	$>$	$\frac{1}{8}$
3.	$\frac{1}{7}$	$<$	$\frac{5}{7}$
4.	$\frac{1}{6}$	$<$	$\frac{4}{6}$
5.	$\frac{2}{8}$	$<$	$\frac{4}{8}$
6.	$\frac{1}{10}$	$<$	$\frac{3}{10}$
7.	$\frac{4}{5}$	$>$	$\frac{3}{5}$
8.	$\frac{3}{6}$	$>$	$\frac{2}{6}$
9.	$\frac{2}{10}$	$<$	$\frac{7}{10}$
10.	$\frac{1}{6}$	$<$	$\frac{4}{6}$
11.	$\frac{1}{4}$	$<$	$\frac{3}{4}$
12.	$\frac{7}{9}$	$>$	$\frac{2}{9}$
13.	$\frac{3}{6}$	$<$	$\frac{5}{6}$
14.	$\frac{2}{4}$	$<$	$\frac{3}{4}$