

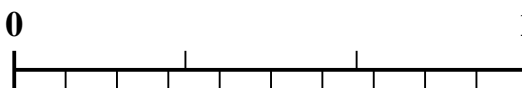


Use the number line to solve each problem.

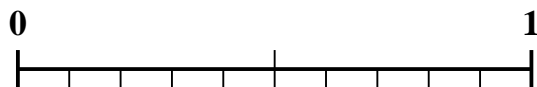
1) Which amount is larger, $\frac{3}{7}$ or 0.23?



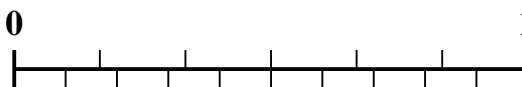
2) Which amount is larger, $\frac{2}{3}$ or 0.82?



3) Which amount is larger, $\frac{1}{2}$ or 0.61?



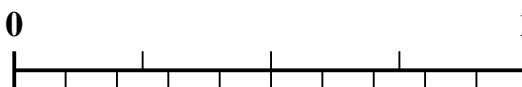
4) Which amount is larger, $\frac{4}{6}$ or 0.77?




5) Which amount is larger, $\frac{6}{7}$ or 0.73?



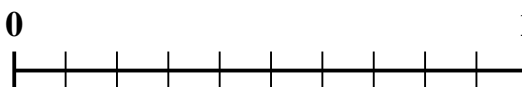
6) Which amount is larger, $\frac{2}{4}$ or 0.6?



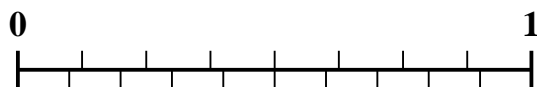
7) Which amount is larger, $\frac{3}{4}$ or 0.88?



8) Which amount is larger, $\frac{3}{10}$ or 0.14?



9) Which amount is larger, $\frac{3}{8}$ or 0.19?



10) Which amount is larger, $\frac{5}{8}$ or 0.83?



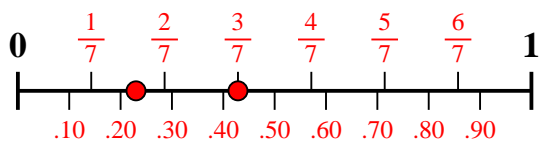
Answers

1. _____
2. _____
3. _____
4. _____
5. _____
6. _____
7. _____
8. _____
9. _____
10. _____

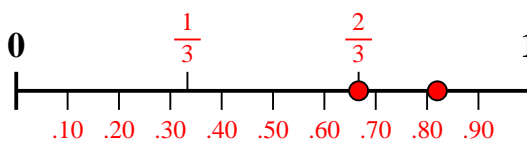


Use the number line to solve each problem.

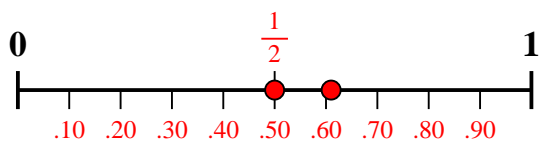
1) Which amount is larger, $\frac{3}{7}$ or 0.23?



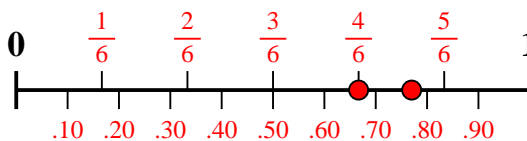
2) Which amount is larger, $\frac{2}{3}$ or 0.82?



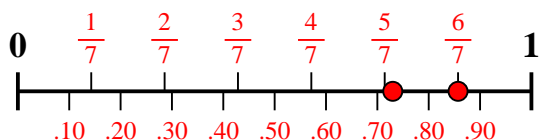
3) Which amount is larger, $\frac{1}{2}$ or 0.61?



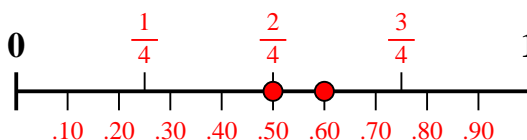
4) Which amount is larger, $\frac{4}{6}$ or 0.77?



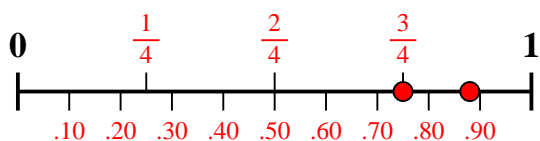
5) Which amount is larger, $\frac{6}{7}$ or 0.73?



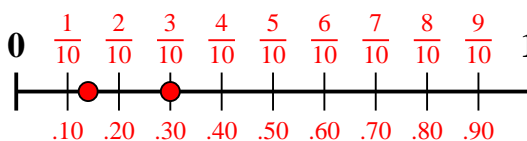
6) Which amount is larger, $\frac{2}{4}$ or 0.6?



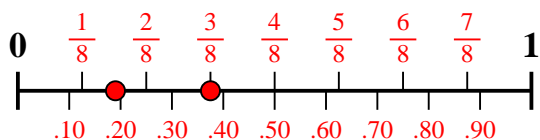
7) Which amount is larger, $\frac{3}{4}$ or 0.88?



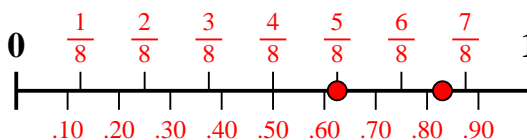
8) Which amount is larger, $\frac{3}{10}$ or 0.14?



9) Which amount is larger, $\frac{3}{8}$ or 0.19?



10) Which amount is larger, $\frac{5}{8}$ or 0.83?



Answers

1. $\frac{3}{7}$
2. **0.82**
3. **0.61**
4. **0.77**
5. $\frac{6}{7}$
6. **0.6**
7. **0.88**
8. $\frac{3}{10}$
9. $\frac{3}{8}$
10. **0.83**