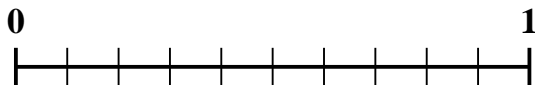

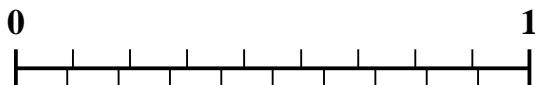

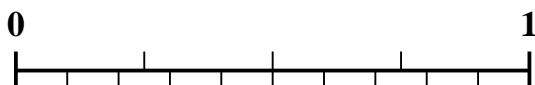
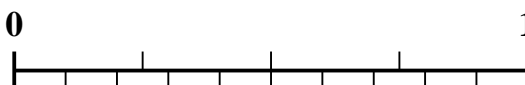




Use the number line to solve each problem.

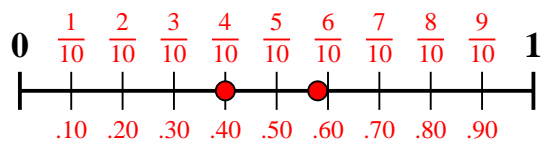
1) Which amount is larger,  $\frac{4}{10}$  or 0.58?2) Which amount is larger,  $\frac{2}{6}$  or 0.52?3) Which amount is larger,  $\frac{4}{5}$  or 0.65?4) Which amount is larger,  $\frac{6}{7}$  or 0.66?5) Which amount is larger,  $\frac{6}{9}$  or 0.77?6) Which amount is larger,  $\frac{2}{3}$  or 0.8?7) Which amount is larger,  $\frac{2}{4}$  or 0.69?8) Which amount is larger,  $\frac{1}{4}$  or 0.35?9) Which amount is larger,  $\frac{6}{10}$  or 0.7?10) Which amount is larger,  $\frac{1}{2}$  or 0.32?**Answers**

1. \_\_\_\_\_
2. \_\_\_\_\_
3. \_\_\_\_\_
4. \_\_\_\_\_
5. \_\_\_\_\_
6. \_\_\_\_\_
7. \_\_\_\_\_
8. \_\_\_\_\_
9. \_\_\_\_\_
10. \_\_\_\_\_

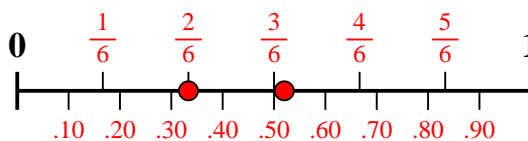


Use the number line to solve each problem.

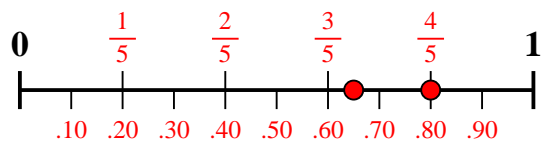
1) Which amount is larger,  $\frac{4}{10}$  or 0.58?



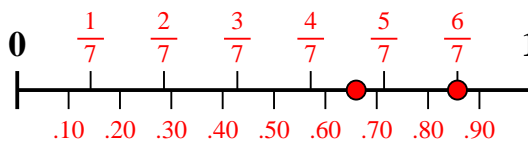
2) Which amount is larger,  $\frac{2}{6}$  or 0.52?



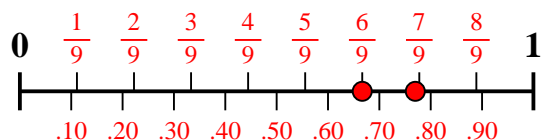
3) Which amount is larger,  $\frac{4}{5}$  or 0.65?



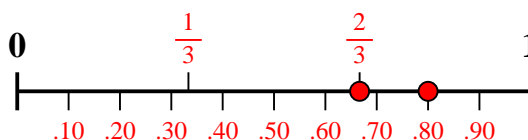
4) Which amount is larger,  $\frac{6}{7}$  or 0.66?



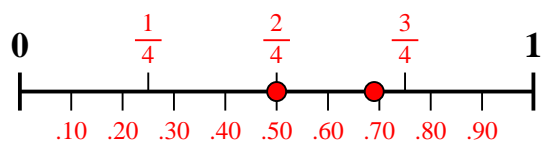
5) Which amount is larger,  $\frac{6}{9}$  or 0.77?



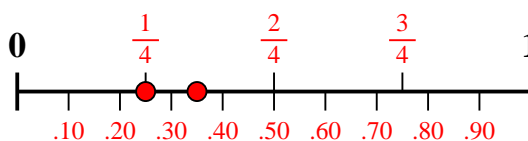
6) Which amount is larger,  $\frac{2}{3}$  or 0.8?



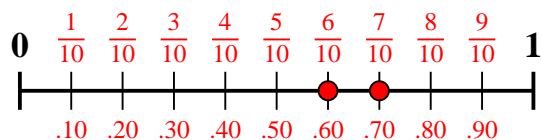
7) Which amount is larger,  $\frac{2}{4}$  or 0.69?



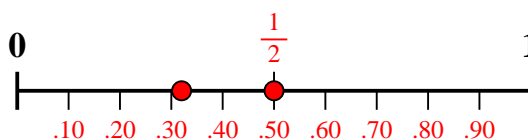
8) Which amount is larger,  $\frac{1}{4}$  or 0.35?



9) Which amount is larger,  $\frac{6}{10}$  or 0.7?



10) Which amount is larger,  $\frac{1}{2}$  or 0.32?



Answers

1. **0.58**

2. **0.52**

3.  **$\frac{4}{5}$**

4.  **$\frac{6}{7}$**

5. **0.77**

6. **0.8**

7. **0.69**

8. **0.35**

9. **0.7**

10.  **$\frac{1}{2}$**