



Use the visual model to solve each problem.

$$1 \frac{3}{5} + 2 \frac{4}{5} = ?$$



To solve a fraction addition problem one strategy is to shade in the whole amounts first (1 & 2).



Next fill in the fraction amounts ($\frac{3}{5}$ & $\frac{4}{5}$).



When all of the pieces are filled in we can see that $1 \frac{3}{5} + 2 \frac{4}{5} = 4 \frac{2}{5}$

Answers

1. _____
2. _____
3. _____
4. _____
5. _____
6. _____
7. _____
8. _____
9. _____
10. _____

1) $3 \frac{1}{3} + 1 \frac{1}{3} =$

2) $1 \frac{2}{3} + 3 \frac{1}{3} =$

3) $2 \frac{3}{4} + 2 \frac{1}{4} =$

4) $3 \frac{4}{6} + 2 \frac{5}{6} =$

5) $1 \frac{8}{12} + 2 \frac{11}{12} =$

6) $1 \frac{8}{10} + 3 \frac{8}{10} =$

7) $1 \frac{4}{6} + 1 \frac{1}{6} =$

8) $1 \frac{2}{12} + 1 \frac{2}{12} =$

9) $3 \frac{8}{10} + 2 \frac{2}{10} =$

10) $1 \frac{3}{5} + 1 \frac{2}{5} =$



Use the visual model to solve each problem.

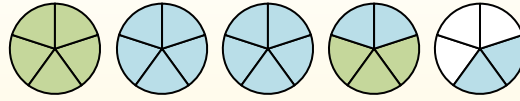
$$1\frac{3}{5} + 2\frac{4}{5} = ?$$



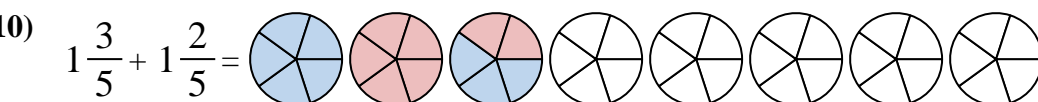
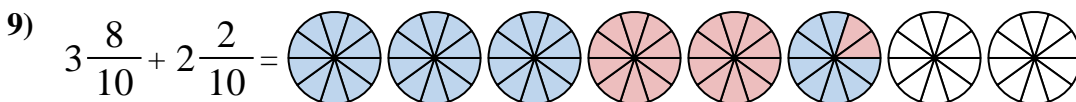
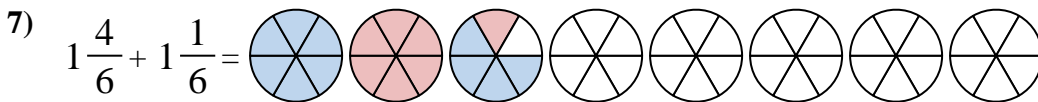
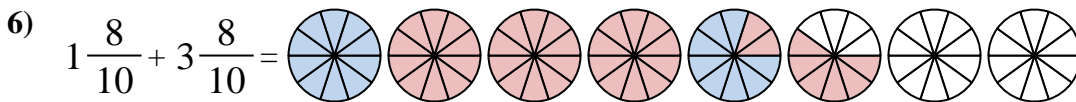
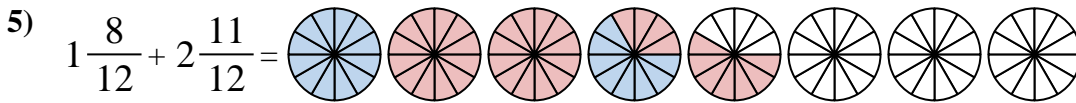
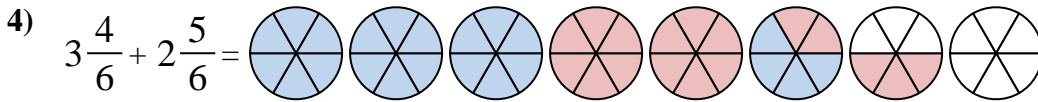
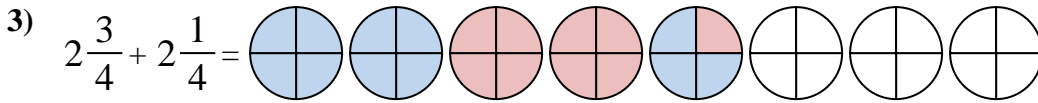
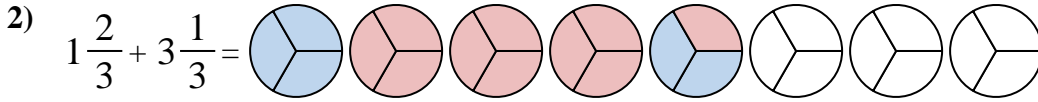
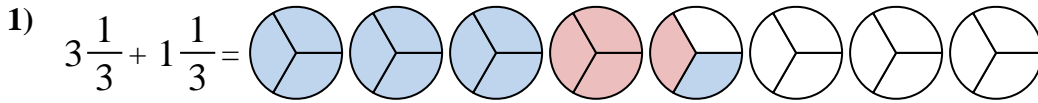
To solve a fraction addition problem one strategy is to shade in the whole amounts first (1 & 2).



Next fill in the fraction amounts ($\frac{3}{5}$ & $\frac{4}{5}$).



When all of the pieces are filled in we can see that $1\frac{3}{5} + 2\frac{4}{5} = 4\frac{2}{5}$



Answers

1. $4\frac{2}{5}$

2. $5\frac{0}{3}$

3. $5\frac{0}{4}$

4. $6\frac{3}{6}$

5. $4\frac{7}{12}$

6. $5\frac{6}{10}$

7. $2\frac{5}{6}$

8. $2\frac{4}{12}$

9. $6\frac{0}{10}$

10. $3\frac{0}{5}$