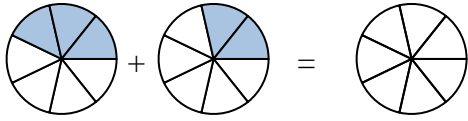




Shade in the fraction to solve the problem.

Answers

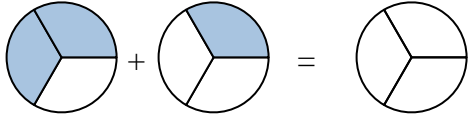
Ex)



Ex. $\frac{3}{7}$ $\frac{2}{7}$ $\frac{5}{7}$

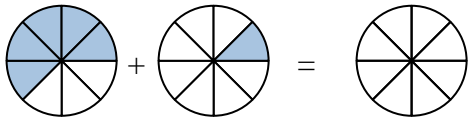
1. _____

1)



2. _____

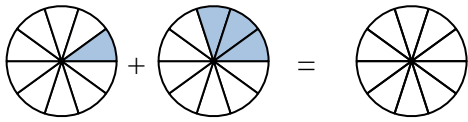
2)



3. _____

4. _____

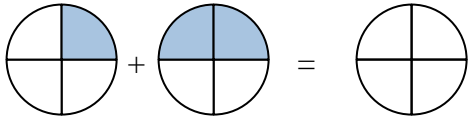
3)



5. _____

6. _____

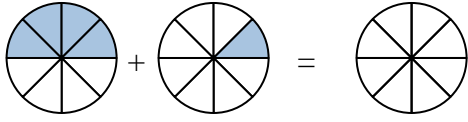
4)



7. _____

8. _____

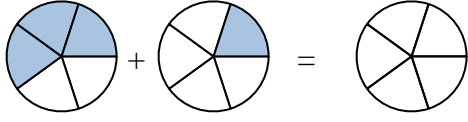
5)



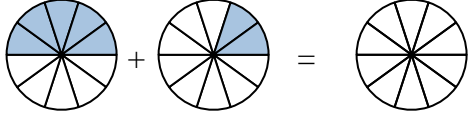
9. _____

10. _____

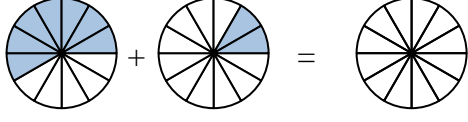
6)



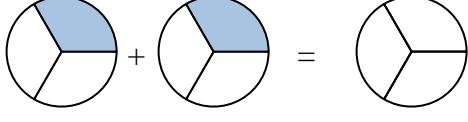
7)



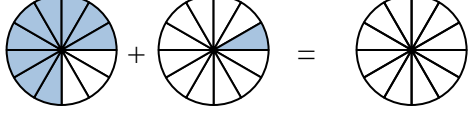
8)



9)



10)

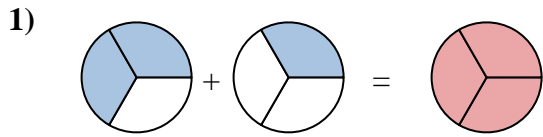




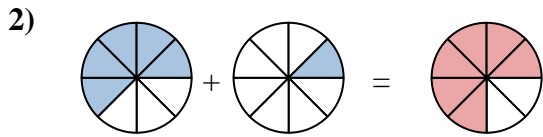
Shade in the fraction to solve the problem.



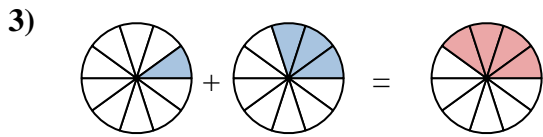
Ex. $\frac{3}{7}$ $\frac{2}{7}$ $\frac{5}{7}$



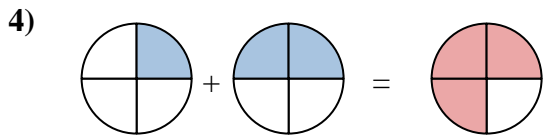
1. $\frac{2}{3}$ $\frac{1}{3}$ $\frac{3}{3}$



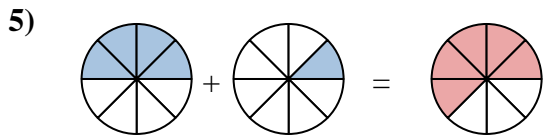
2. $\frac{5}{8}$ $\frac{1}{8}$ $\frac{6}{8}$



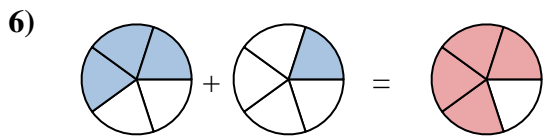
3. $\frac{1}{10}$ $\frac{3}{10}$ $\frac{4}{10}$



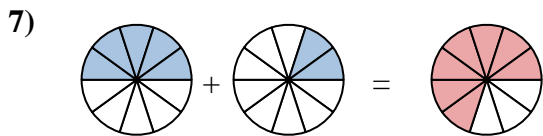
4. $\frac{1}{4}$ $\frac{2}{4}$ $\frac{3}{4}$



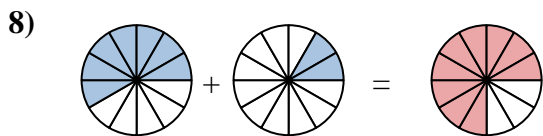
5. $\frac{4}{8}$ $\frac{1}{8}$ $\frac{5}{8}$



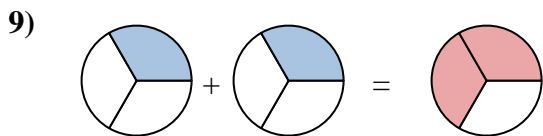
6. $\frac{3}{5}$ $\frac{1}{5}$ $\frac{4}{5}$



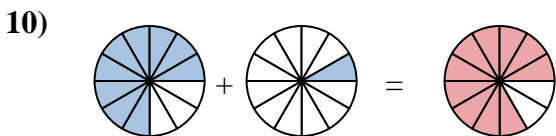
7. $\frac{5}{10}$ $\frac{2}{10}$ $\frac{7}{10}$



8. $\frac{7}{12}$ $\frac{2}{12}$ $\frac{9}{12}$



9. $\frac{1}{3}$ $\frac{1}{3}$ $\frac{2}{3}$



10. $\frac{9}{12}$ $\frac{1}{12}$ $\frac{10}{12}$

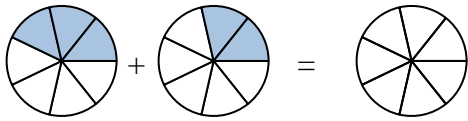
Answers



Shade in the fraction to solve the problem.

Answers

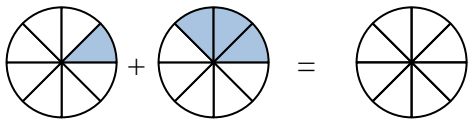
Ex)



Ex. $\frac{3}{7}$ $\frac{2}{7}$ $\frac{5}{7}$

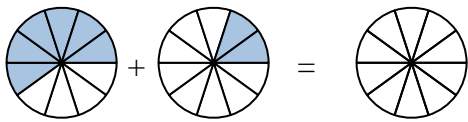
1. _____

1)



2. _____

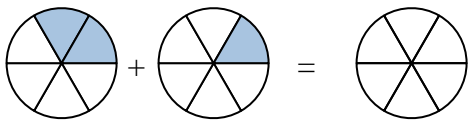
2)



3. _____

4. _____

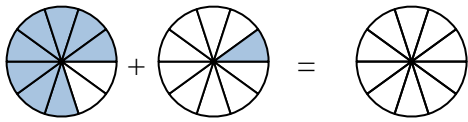
3)



5. _____

6. _____

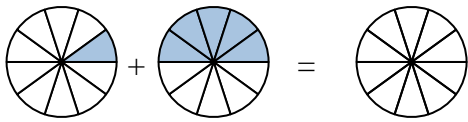
4)



7. _____

8. _____

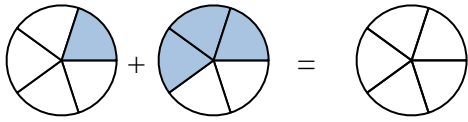
5)



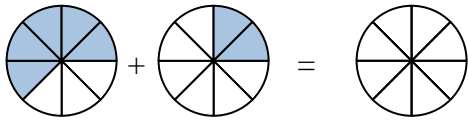
9. _____

10. _____

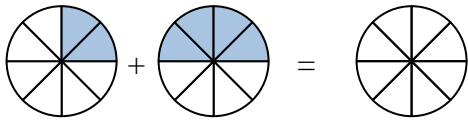
6)



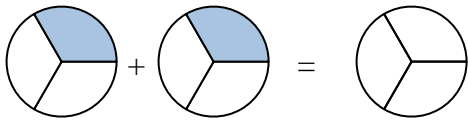
7)



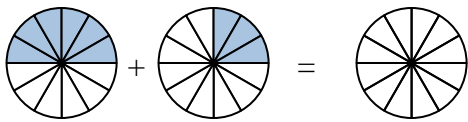
8)



9)



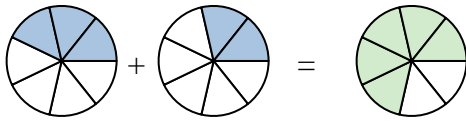
10)





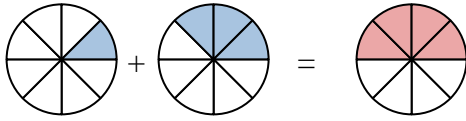
Shade in the fraction to solve the problem.

Ex)



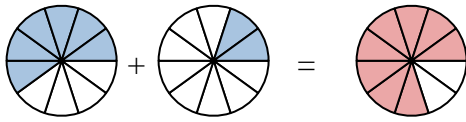
Ex. $\frac{3}{7}$ $\frac{2}{7}$ $\frac{5}{7}$

1)



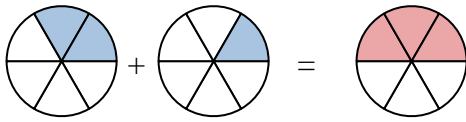
1. $\frac{1}{8}$ $\frac{3}{8}$ $\frac{4}{8}$

2)



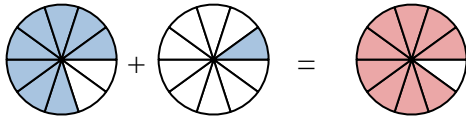
2. $\frac{6}{10}$ $\frac{2}{10}$ $\frac{8}{10}$

3)



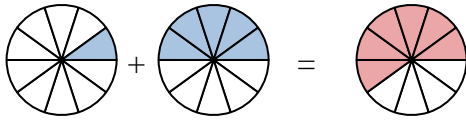
3. $\frac{2}{6}$ $\frac{1}{6}$ $\frac{3}{6}$

4)



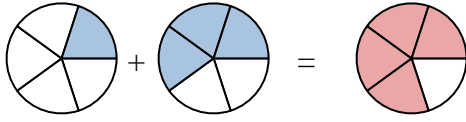
4. $\frac{8}{10}$ $\frac{1}{10}$ $\frac{9}{10}$

5)



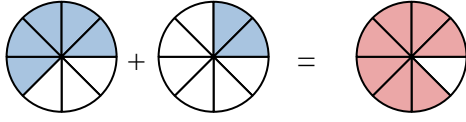
5. $\frac{1}{10}$ $\frac{5}{10}$ $\frac{6}{10}$

6)



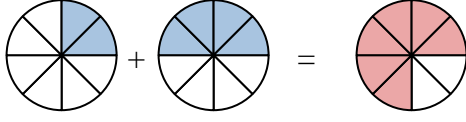
6. $\frac{1}{5}$ $\frac{3}{5}$ $\frac{4}{5}$

7)



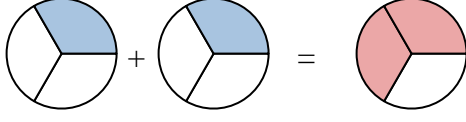
7. $\frac{5}{8}$ $\frac{2}{8}$ $\frac{7}{8}$

8)



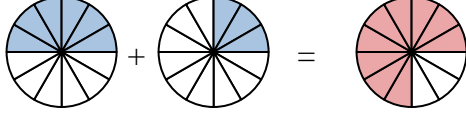
8. $\frac{2}{8}$ $\frac{4}{8}$ $\frac{6}{8}$

9)



9. $\frac{1}{3}$ $\frac{1}{3}$ $\frac{2}{3}$

10)



10. $\frac{6}{12}$ $\frac{3}{12}$ $\frac{9}{12}$

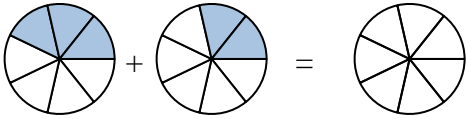
Answers



Shade in the fraction to solve the problem.

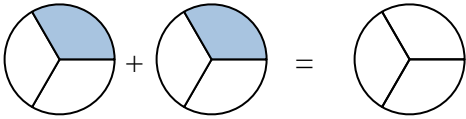
Answers

Ex)



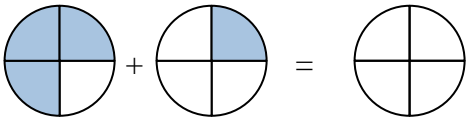
Ex. $\frac{3}{7}$ $\frac{2}{7}$ $\frac{5}{7}$

1)



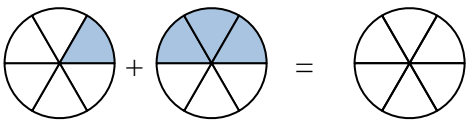
1. _____

2)



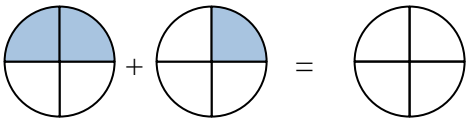
2. _____

3)



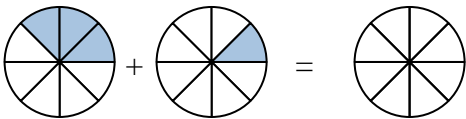
3. _____

4)



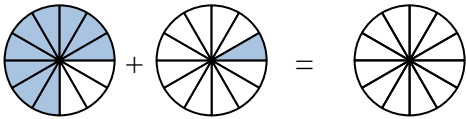
4. _____

5)



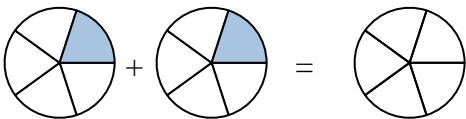
5. _____

6)



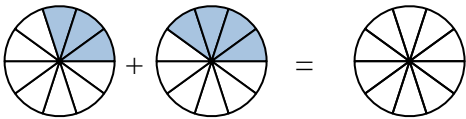
6. _____

7)



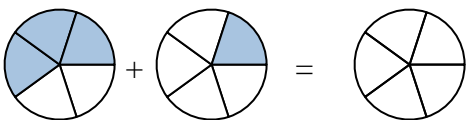
7. _____

8)



8. _____

9)



9. _____

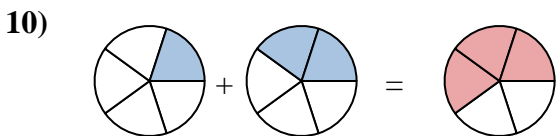
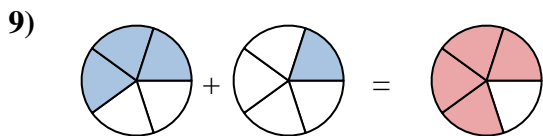
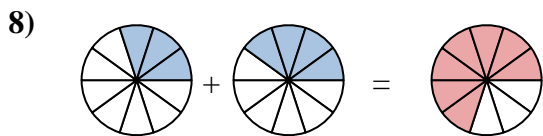
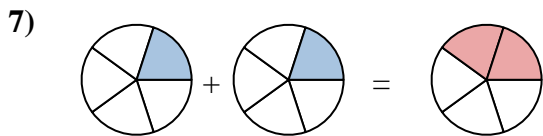
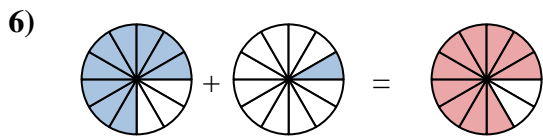
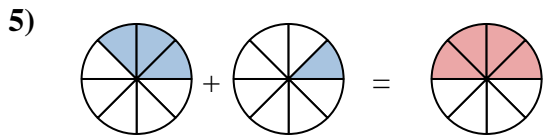
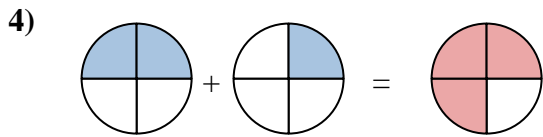
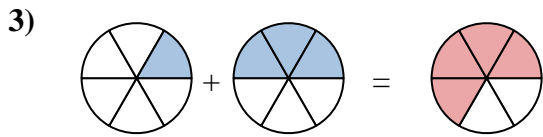
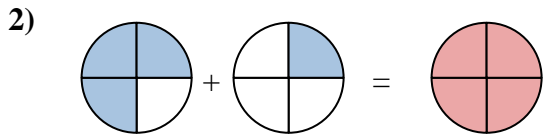
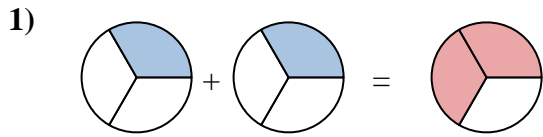
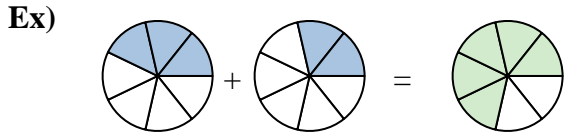
10)



10. _____



Shade in the fraction to solve the problem.



Answers

Ex. $\frac{3}{7}$ $\frac{2}{7}$ $\frac{5}{7}$

1. $\frac{1}{3}$ $\frac{1}{3}$ $\frac{2}{3}$

2. $\frac{3}{4}$ $\frac{1}{4}$ $\frac{4}{4}$

3. $\frac{1}{6}$ $\frac{3}{6}$ $\frac{4}{6}$

4. $\frac{2}{4}$ $\frac{1}{4}$ $\frac{3}{4}$

5. $\frac{3}{8}$ $\frac{1}{8}$ $\frac{4}{8}$

6. $\frac{9}{12}$ $\frac{1}{12}$ $\frac{10}{12}$

7. $\frac{1}{5}$ $\frac{1}{5}$ $\frac{2}{5}$

8. $\frac{3}{10}$ $\frac{4}{10}$ $\frac{7}{10}$

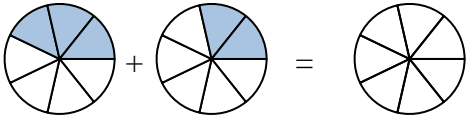
9. $\frac{3}{5}$ $\frac{1}{5}$ $\frac{4}{5}$

10. $\frac{1}{5}$ $\frac{2}{5}$ $\frac{3}{5}$



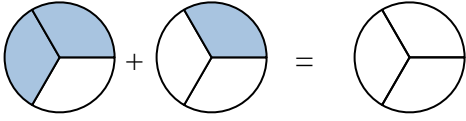
Shade in the fraction to solve the problem.

Ex)



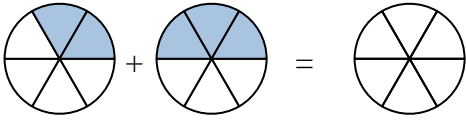
Ex. $\frac{3}{7}$ $\frac{2}{7}$ $\frac{5}{7}$

1)



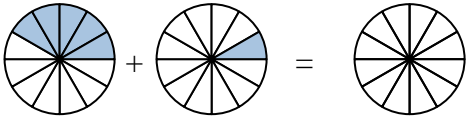
1. _____

2)



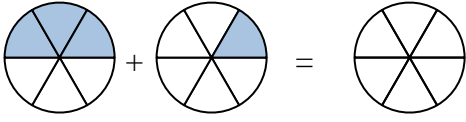
2. _____

3)



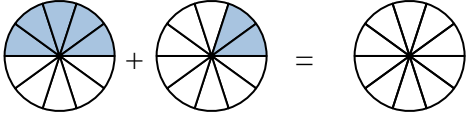
3. _____

4)



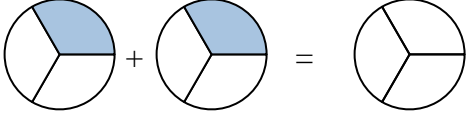
4. _____

5)



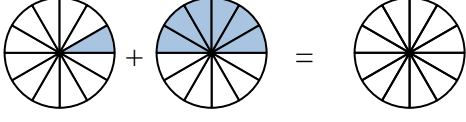
5. _____

6)



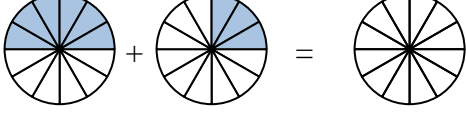
6. _____

7)



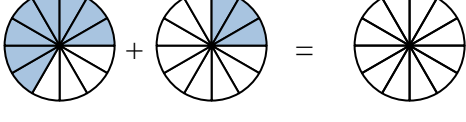
7. _____

8)



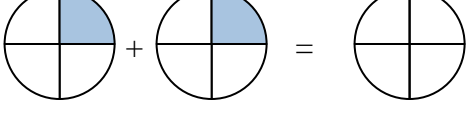
8. _____

9)



9. _____

10)

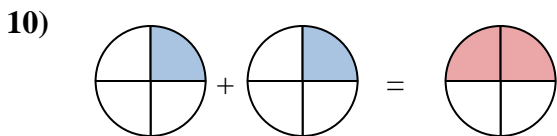
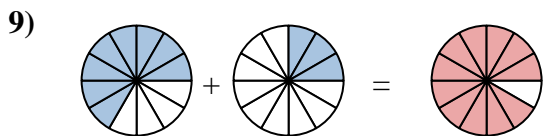
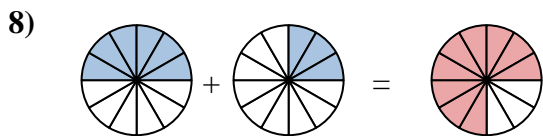
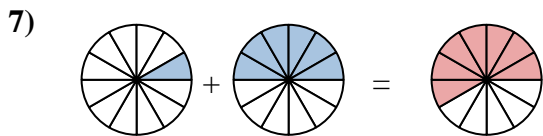
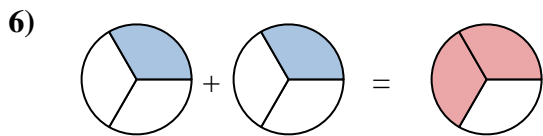
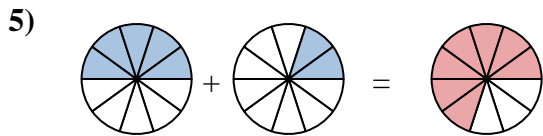
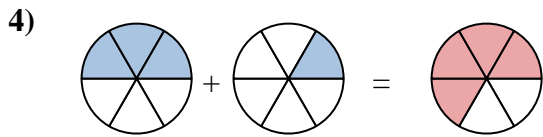
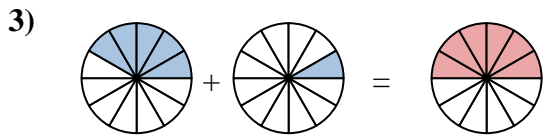
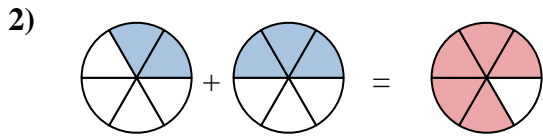
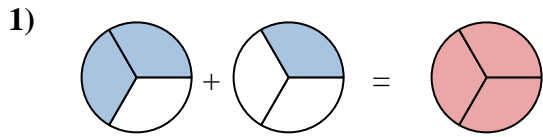
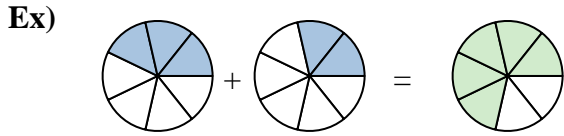


10. _____

Answers



Shade in the fraction to solve the problem.



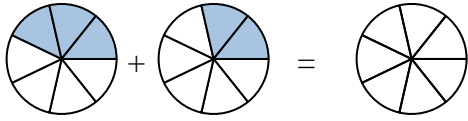
Answers

Ex.	$\frac{3}{7}$	$\frac{2}{7}$	$\frac{5}{7}$
1.	$\frac{2}{3}$	$\frac{1}{3}$	$\frac{3}{3}$
2.	$\frac{2}{6}$	$\frac{3}{6}$	$\frac{5}{6}$
3.	$\frac{5}{12}$	$\frac{1}{12}$	$\frac{6}{12}$
4.	$\frac{3}{6}$	$\frac{1}{6}$	$\frac{4}{6}$
5.	$\frac{5}{10}$	$\frac{2}{10}$	$\frac{7}{10}$
6.	$\frac{1}{3}$	$\frac{1}{3}$	$\frac{2}{3}$
7.	$\frac{1}{12}$	$\frac{6}{12}$	$\frac{7}{12}$
8.	$\frac{6}{12}$	$\frac{3}{12}$	$\frac{9}{12}$
9.	$\frac{8}{12}$	$\frac{3}{12}$	$\frac{11}{12}$
10.	$\frac{1}{4}$	$\frac{1}{4}$	$\frac{2}{4}$



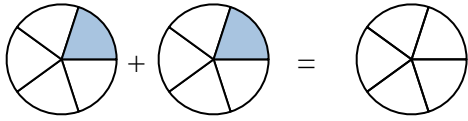
Shade in the fraction to solve the problem.

Ex)



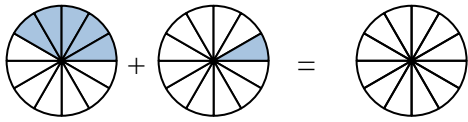
Ex. $\frac{3}{7}$ $\frac{2}{7}$ $\frac{5}{7}$

1)



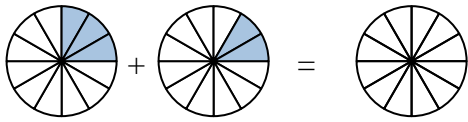
1. _____

2)



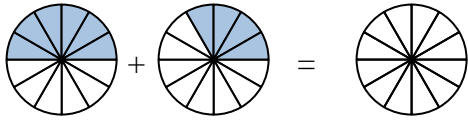
2. _____

3)



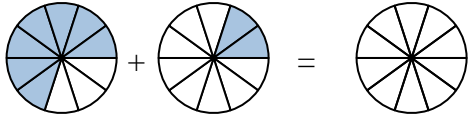
3. _____

4)



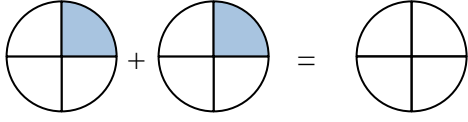
4. _____

5)



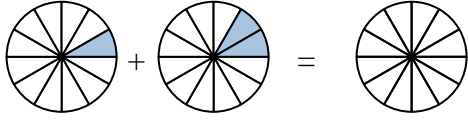
5. _____

6)



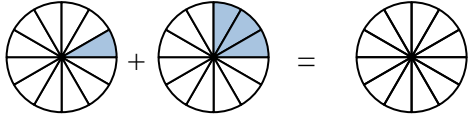
6. _____

7)



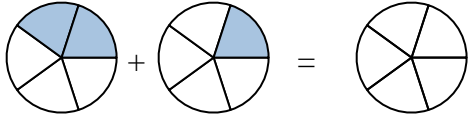
7. _____

8)



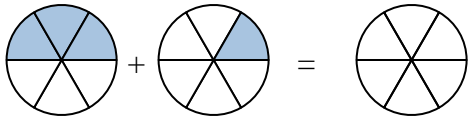
8. _____

9)



9. _____

10)

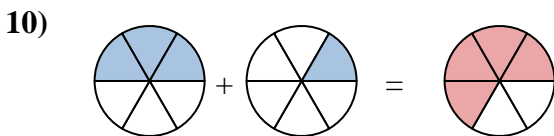
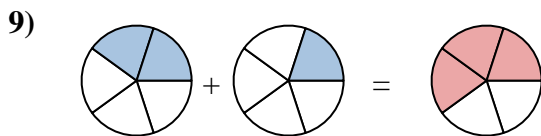
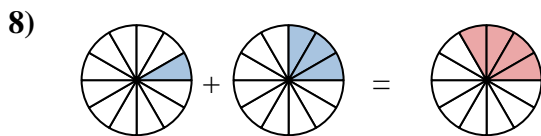
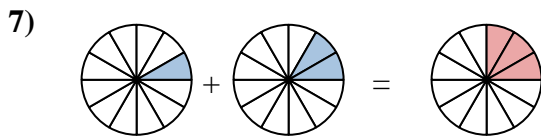
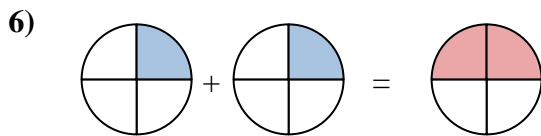
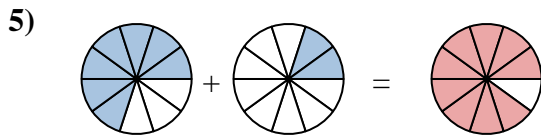
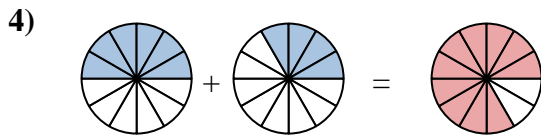
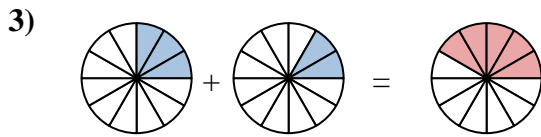
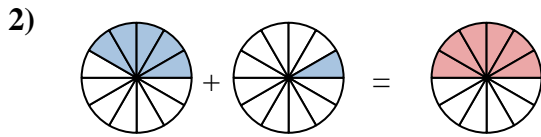
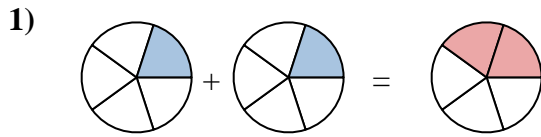
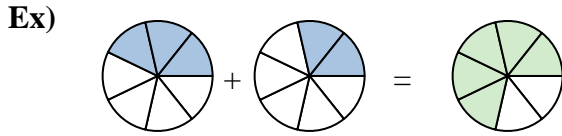


10. _____

Answers



Shade in the fraction to solve the problem.



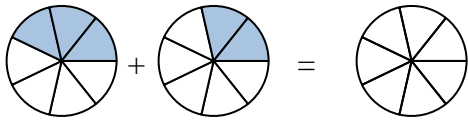
Answers

Ex.	$\frac{3}{7}$	$\frac{2}{7}$	$\frac{5}{7}$
1.	$\frac{1}{5}$	$\frac{1}{5}$	$\frac{2}{5}$
2.	$\frac{5}{12}$	$\frac{1}{12}$	$\frac{6}{12}$
3.	$\frac{3}{12}$	$\frac{2}{12}$	$\frac{5}{12}$
4.	$\frac{6}{12}$	$\frac{4}{12}$	$\frac{10}{12}$
5.	$\frac{7}{10}$	$\frac{2}{10}$	$\frac{9}{10}$
6.	$\frac{1}{4}$	$\frac{1}{4}$	$\frac{2}{4}$
7.	$\frac{1}{12}$	$\frac{2}{12}$	$\frac{3}{12}$
8.	$\frac{1}{12}$	$\frac{3}{12}$	$\frac{4}{12}$
9.	$\frac{2}{5}$	$\frac{1}{5}$	$\frac{3}{5}$
10.	$\frac{3}{6}$	$\frac{1}{6}$	$\frac{4}{6}$



Shade in the fraction to solve the problem.

Ex)



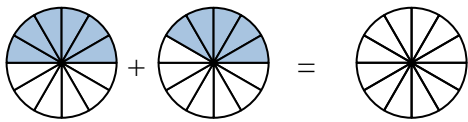
Ex. $\frac{3}{7}$ $\frac{2}{7}$ $\frac{5}{7}$

1)



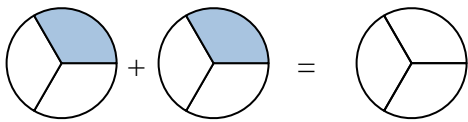
1. _____

2)



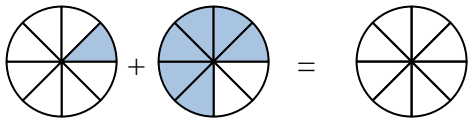
2. _____

3)



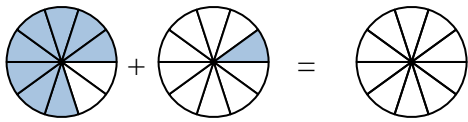
3. _____

4)



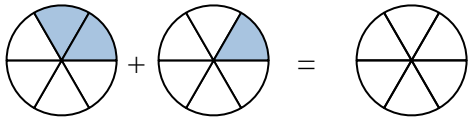
4. _____

5)



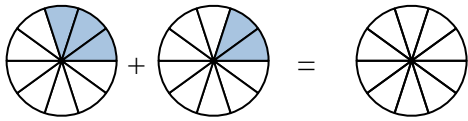
5. _____

6)



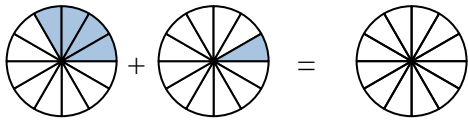
6. _____

7)



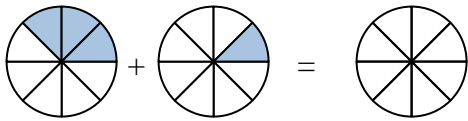
7. _____

8)



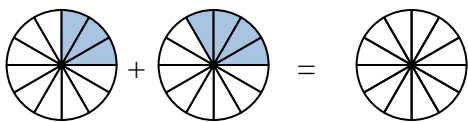
8. _____

9)



9. _____

10)

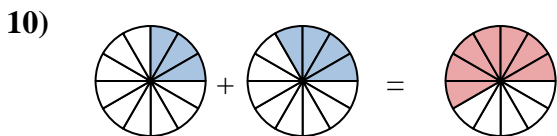
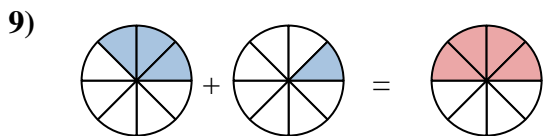
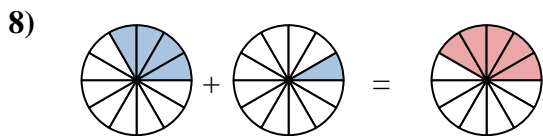
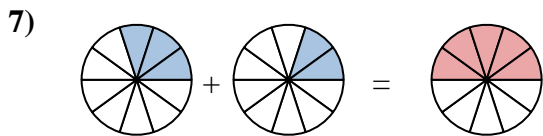
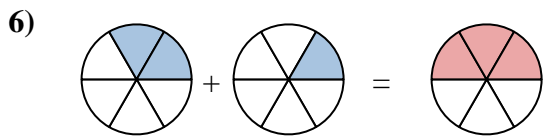
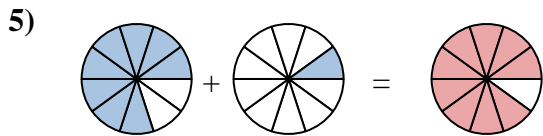
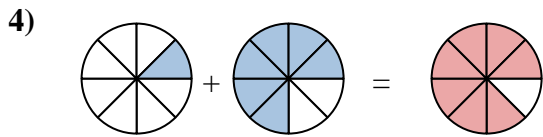
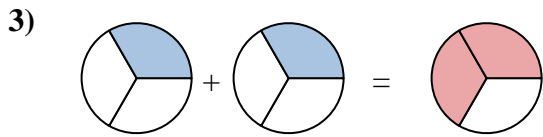
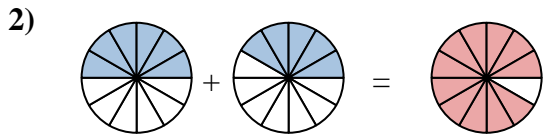
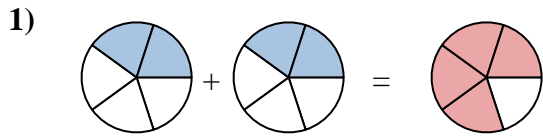
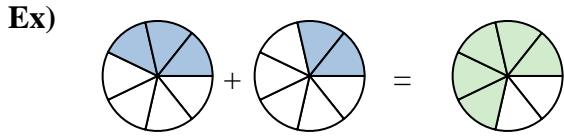


10. _____

Answers



Shade in the fraction to solve the problem.



Answers

Ex. $\frac{3}{7}$ $\frac{2}{7}$ $\frac{5}{7}$

1. $\frac{2}{5}$ $\frac{2}{5}$ $\frac{4}{5}$

2. $\frac{6}{12}$ $\frac{5}{12}$ $\frac{11}{12}$

3. $\frac{1}{3}$ $\frac{1}{3}$ $\frac{2}{3}$

4. $\frac{1}{8}$ $\frac{6}{8}$ $\frac{7}{8}$

5. $\frac{8}{10}$ $\frac{1}{10}$ $\frac{9}{10}$

6. $\frac{2}{6}$ $\frac{1}{6}$ $\frac{3}{6}$

7. $\frac{3}{10}$ $\frac{2}{10}$ $\frac{5}{10}$

8. $\frac{4}{12}$ $\frac{1}{12}$ $\frac{5}{12}$

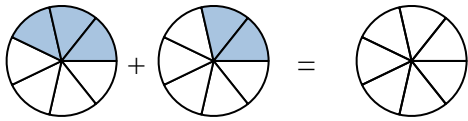
9. $\frac{3}{8}$ $\frac{1}{8}$ $\frac{4}{8}$

10. $\frac{3}{12}$ $\frac{4}{12}$ $\frac{7}{12}$



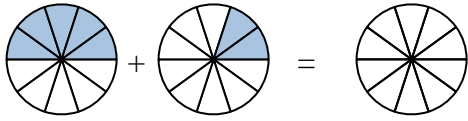
Shade in the fraction to solve the problem.

Ex)



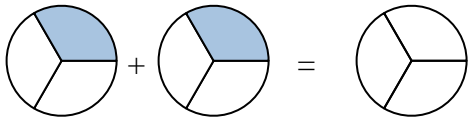
Ex. $\frac{3}{7}$ $\frac{2}{7}$ $\frac{5}{7}$

1)



1. _____

2)



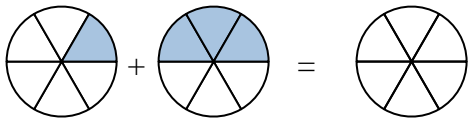
2. _____

3)



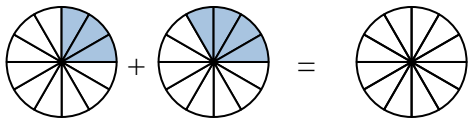
3. _____

4)



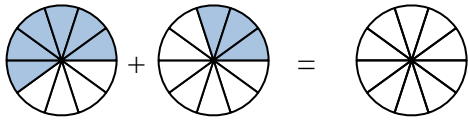
4. _____

5)



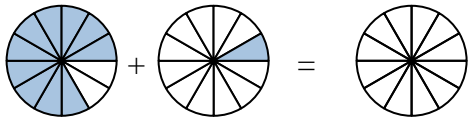
5. _____

6)



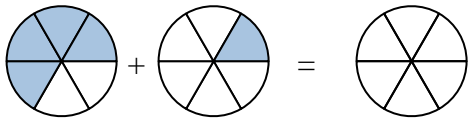
6. _____

7)



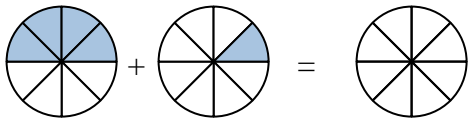
7. _____

8)



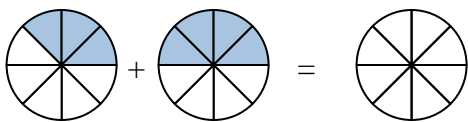
8. _____

9)



9. _____

10)

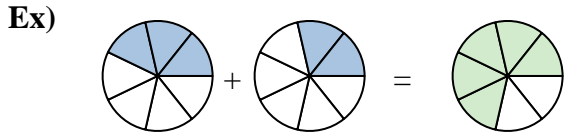


10. _____

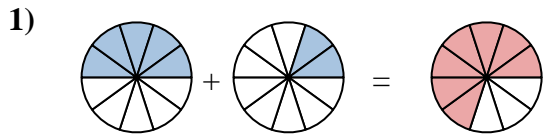
Answers



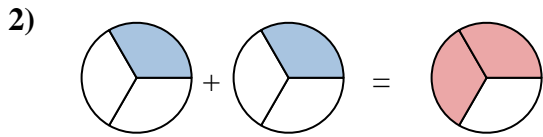
Shade in the fraction to solve the problem.



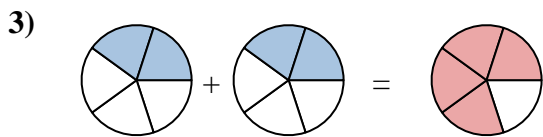
Ex. $\frac{3}{7}$ $\frac{2}{7}$ $\frac{5}{7}$



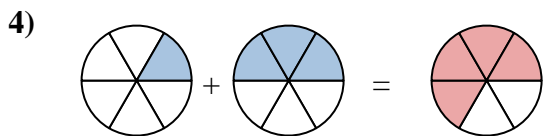
1. $\frac{5}{10}$ $\frac{2}{10}$ $\frac{7}{10}$



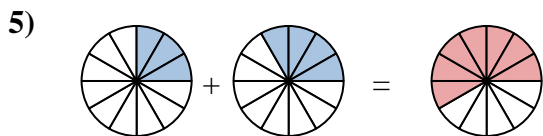
2. $\frac{1}{3}$ $\frac{1}{3}$ $\frac{2}{3}$



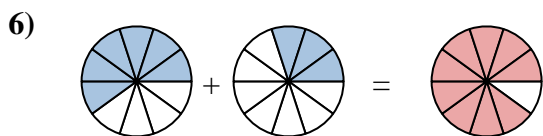
3. $\frac{2}{5}$ $\frac{2}{5}$ $\frac{4}{5}$



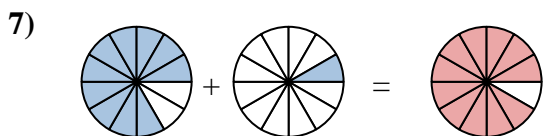
4. $\frac{1}{6}$ $\frac{3}{6}$ $\frac{4}{6}$



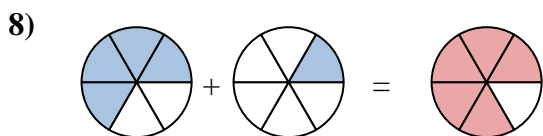
5. $\frac{3}{12}$ $\frac{4}{12}$ $\frac{7}{12}$



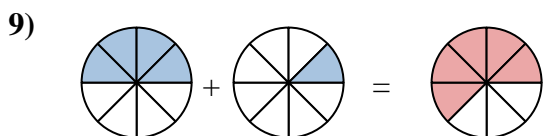
6. $\frac{6}{10}$ $\frac{3}{10}$ $\frac{9}{10}$



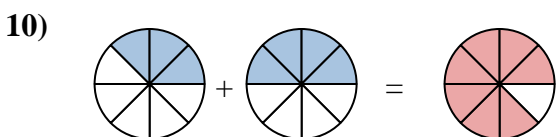
7. $\frac{10}{12}$ $\frac{1}{12}$ $\frac{11}{12}$



8. $\frac{4}{6}$ $\frac{1}{6}$ $\frac{5}{6}$



9. $\frac{4}{8}$ $\frac{1}{8}$ $\frac{5}{8}$



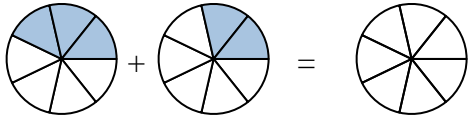
10. $\frac{3}{8}$ $\frac{4}{8}$ $\frac{7}{8}$

Answers



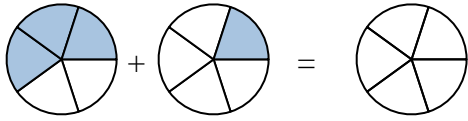
Shade in the fraction to solve the problem.

Ex)



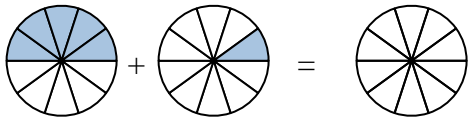
Ex. $\frac{3}{7}$ $\frac{2}{7}$ $\frac{5}{7}$

1)



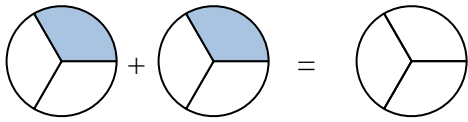
1. _____

2)



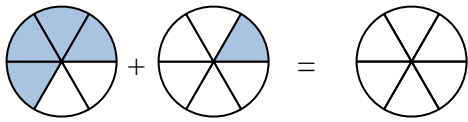
2. _____

3)



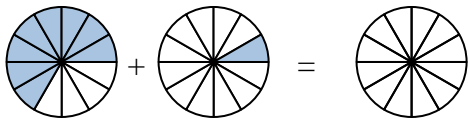
3. _____

4)



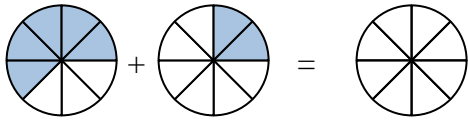
4. _____

5)



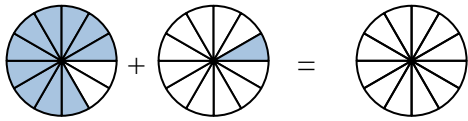
5. _____

6)



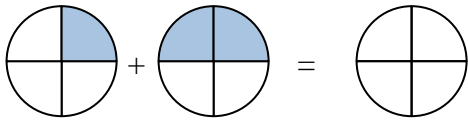
6. _____

7)



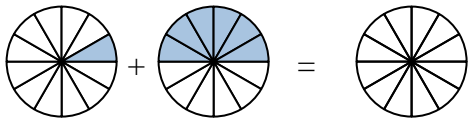
7. _____

8)



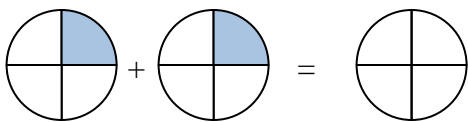
8. _____

9)



9. _____

10)

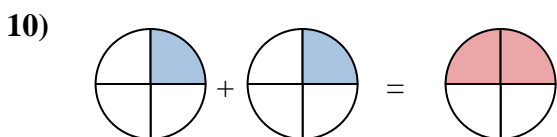
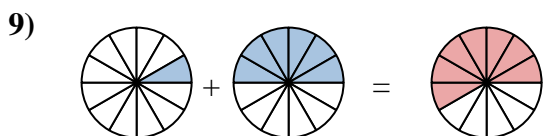
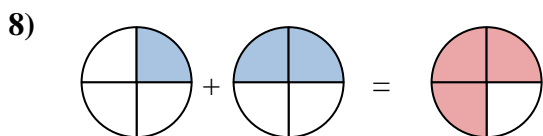
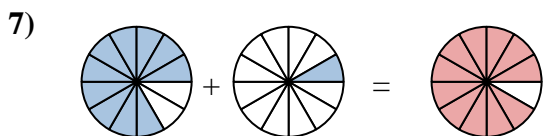
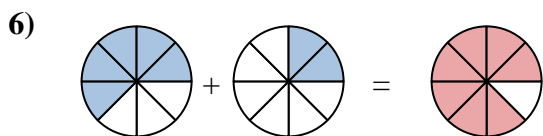
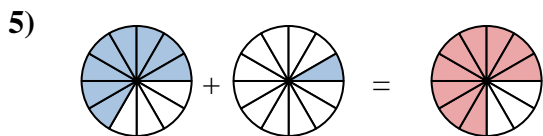
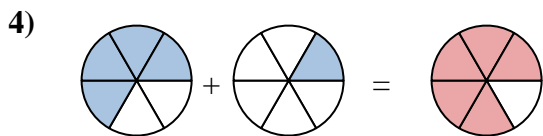
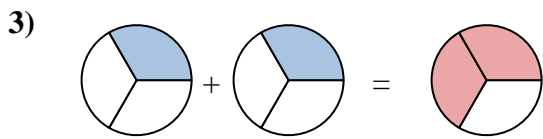
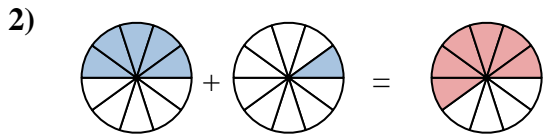
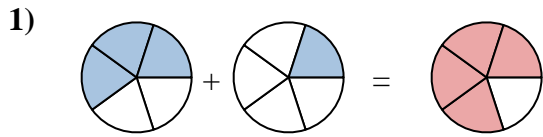
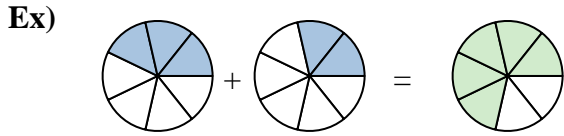


10. _____

Answers



Shade in the fraction to solve the problem.



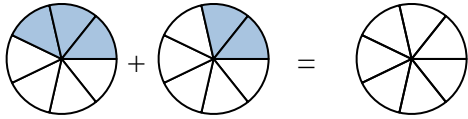
Answers

Ex.	$\frac{3}{7}$	$\frac{2}{7}$	$\frac{5}{7}$
1.	$\frac{3}{5}$	$\frac{1}{5}$	$\frac{4}{5}$
2.	$\frac{5}{10}$	$\frac{1}{10}$	$\frac{6}{10}$
3.	$\frac{1}{3}$	$\frac{1}{3}$	$\frac{2}{3}$
4.	$\frac{4}{6}$	$\frac{1}{6}$	$\frac{5}{6}$
5.	$\frac{8}{12}$	$\frac{1}{12}$	$\frac{9}{12}$
6.	$\frac{5}{8}$	$\frac{2}{8}$	$\frac{7}{8}$
7.	$\frac{10}{12}$	$\frac{1}{12}$	$\frac{11}{12}$
8.	$\frac{1}{4}$	$\frac{2}{4}$	$\frac{3}{4}$
9.	$\frac{1}{12}$	$\frac{6}{12}$	$\frac{7}{12}$
10.	$\frac{1}{4}$	$\frac{1}{4}$	$\frac{2}{4}$



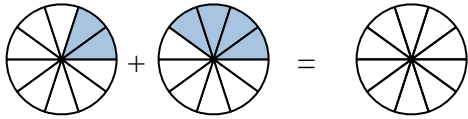
Shade in the fraction to solve the problem.

Ex)



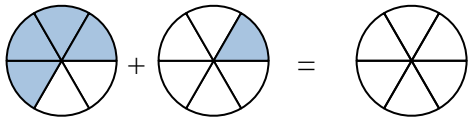
Ex. $\frac{3}{7}$ $\frac{2}{7}$ $\frac{5}{7}$

1)



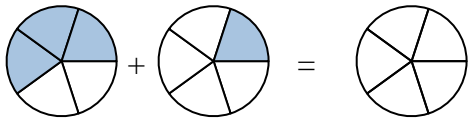
1. _____

2)



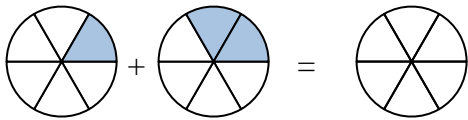
2. _____

3)



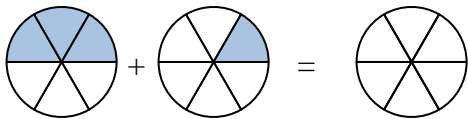
3. _____

4)



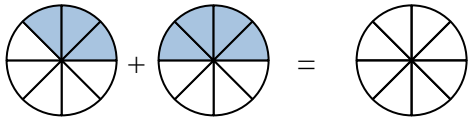
4. _____

5)



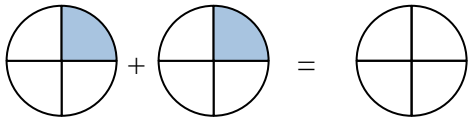
5. _____

6)



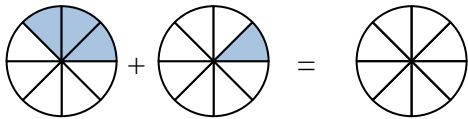
6. _____

7)



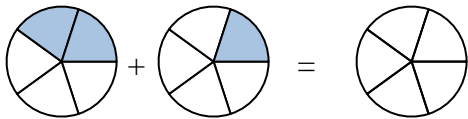
7. _____

8)



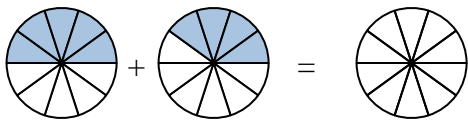
8. _____

9)



9. _____

10)

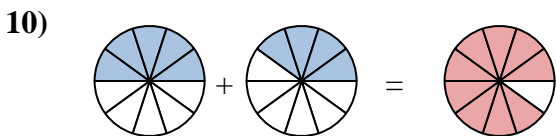
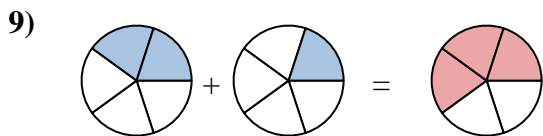
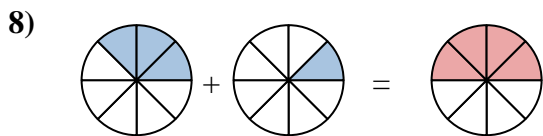
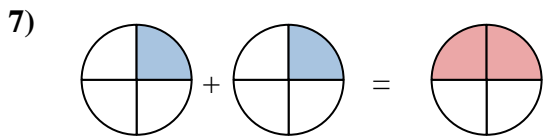
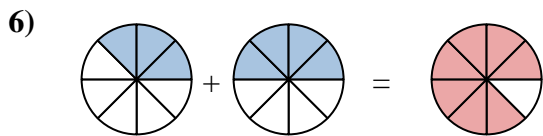
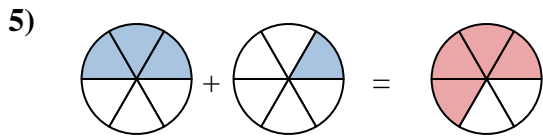
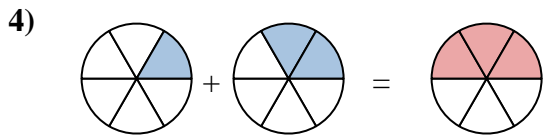
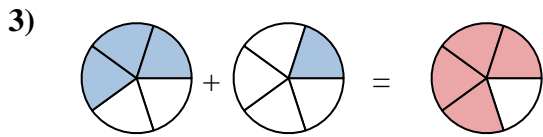
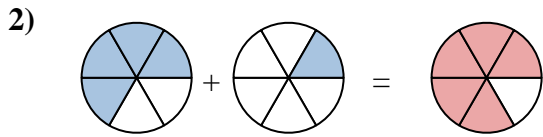
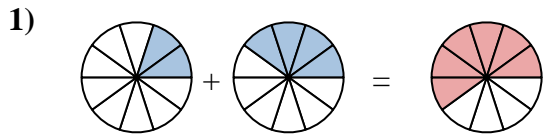


10. _____

Answers



Shade in the fraction to solve the problem.



Answers

Ex. $\frac{3}{7}$ $\frac{2}{7}$ $\frac{5}{7}$

1. $\frac{2}{10}$ $\frac{4}{10}$ $\frac{6}{10}$

2. $\frac{4}{6}$ $\frac{1}{6}$ $\frac{5}{6}$

3. $\frac{3}{5}$ $\frac{1}{5}$ $\frac{4}{5}$

4. $\frac{1}{6}$ $\frac{2}{6}$ $\frac{3}{6}$

5. $\frac{3}{6}$ $\frac{1}{6}$ $\frac{4}{6}$

6. $\frac{3}{8}$ $\frac{4}{8}$ $\frac{7}{8}$

7. $\frac{1}{4}$ $\frac{1}{4}$ $\frac{2}{4}$

8. $\frac{3}{8}$ $\frac{1}{8}$ $\frac{4}{8}$

9. $\frac{2}{5}$ $\frac{1}{5}$ $\frac{3}{5}$

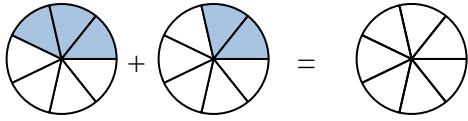
10. $\frac{5}{10}$ $\frac{4}{10}$ $\frac{9}{10}$



Shade in the fraction to solve the problem.

Answers

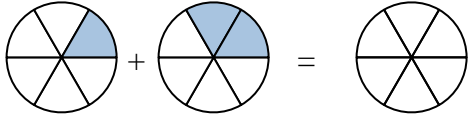
Ex)



Ex. $\frac{3}{7}$ $\frac{2}{7}$ $\frac{5}{7}$

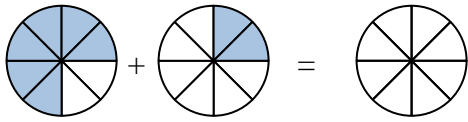
1. _____

1)



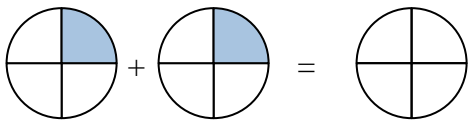
2. _____

2)



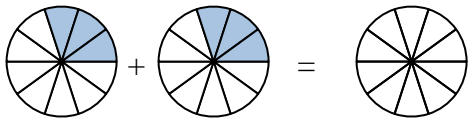
3. _____

3)



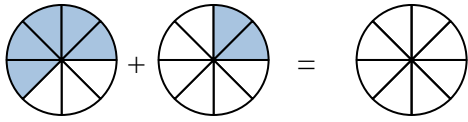
4. _____

4)



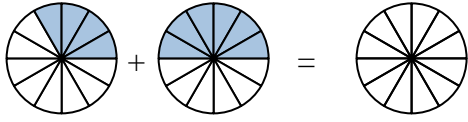
5. _____

5)



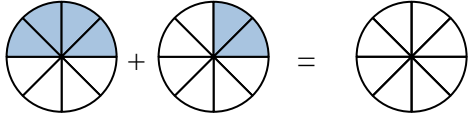
6. _____

6)



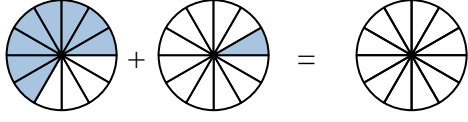
7. _____

7)



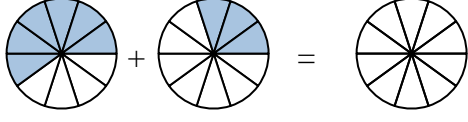
8. _____

8)



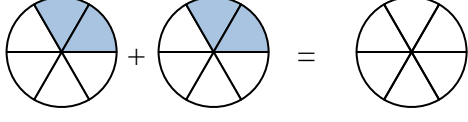
9. _____

9)



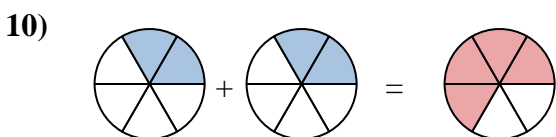
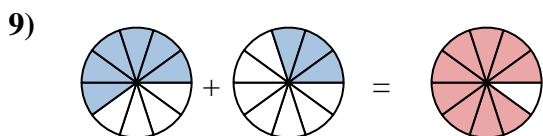
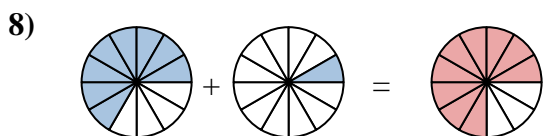
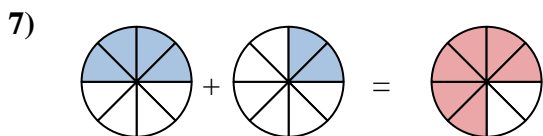
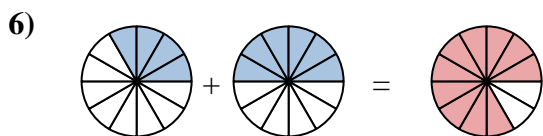
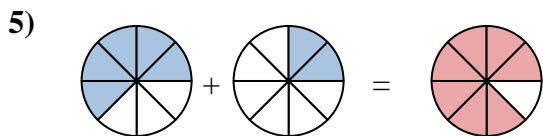
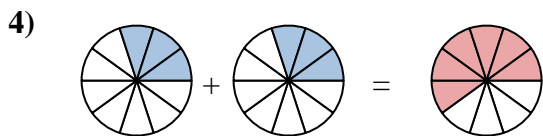
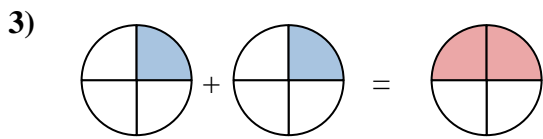
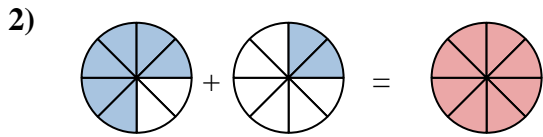
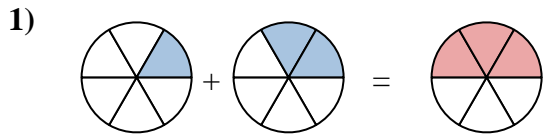
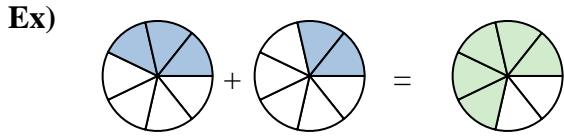
10. _____

10)





Shade in the fraction to solve the problem.



Answers

Ex. $\frac{3}{7}$ $\frac{2}{7}$ $\frac{5}{7}$

1. $\frac{1}{6}$ $\frac{2}{6}$ $\frac{3}{6}$

2. $\frac{6}{8}$ $\frac{2}{8}$ $\frac{8}{8}$

3. $\frac{1}{4}$ $\frac{1}{4}$ $\frac{2}{4}$

4. $\frac{3}{10}$ $\frac{3}{10}$ $\frac{6}{10}$

5. $\frac{5}{8}$ $\frac{2}{8}$ $\frac{7}{8}$

6. $\frac{4}{12}$ $\frac{6}{12}$ $\frac{10}{12}$

7. $\frac{4}{8}$ $\frac{2}{8}$ $\frac{6}{8}$

8. $\frac{8}{12}$ $\frac{1}{12}$ $\frac{9}{12}$

9. $\frac{6}{10}$ $\frac{3}{10}$ $\frac{9}{10}$

10. $\frac{2}{6}$ $\frac{2}{6}$ $\frac{4}{6}$