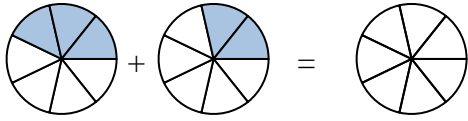




Shade in the fraction to solve the problem.

Answers

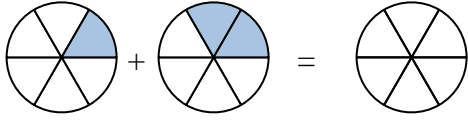
Ex)



Ex. $\frac{3}{7}$ $\frac{2}{7}$ $\frac{5}{7}$

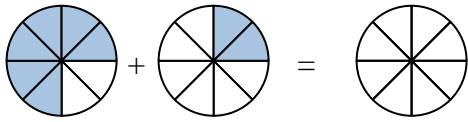
1. _____

1)



2. _____

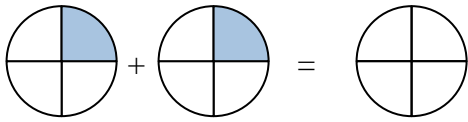
2)



3. _____

4. _____

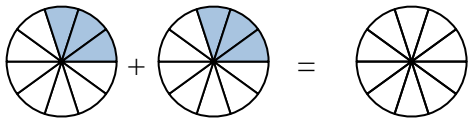
3)



5. _____

6. _____

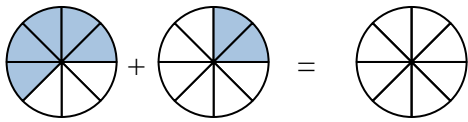
4)



7. _____

8. _____

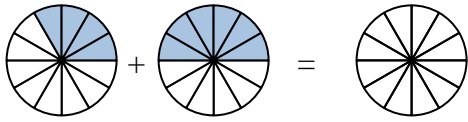
5)



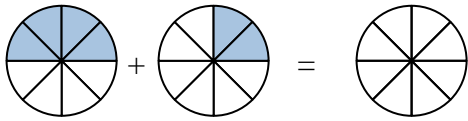
9. _____

10. _____

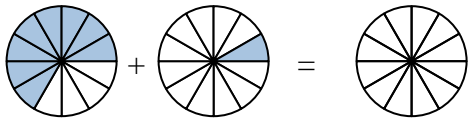
6)



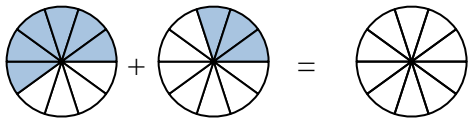
7)



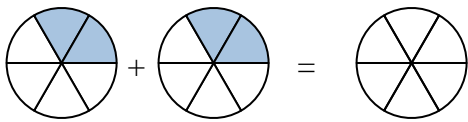
8)



9)

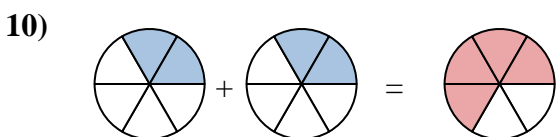
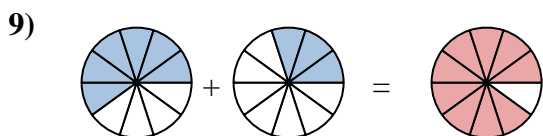
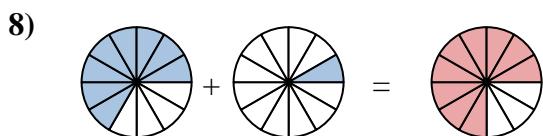
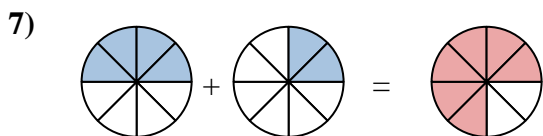
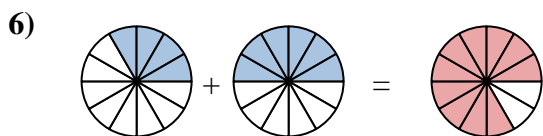
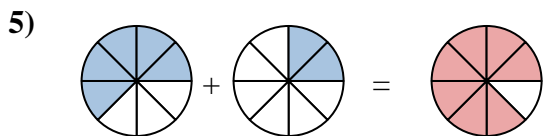
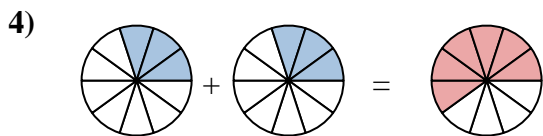
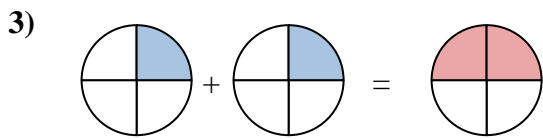
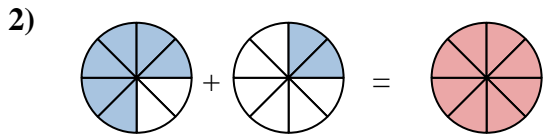
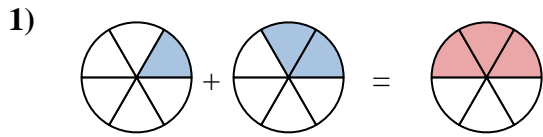


10)





Shade in the fraction to solve the problem.



Answers

Ex. $\frac{3}{7}$ $\frac{2}{7}$ $\frac{5}{7}$

1. $\frac{1}{6}$ $\frac{2}{6}$ $\frac{3}{6}$

2. $\frac{6}{8}$ $\frac{2}{8}$ $\frac{8}{8}$

3. $\frac{1}{4}$ $\frac{1}{4}$ $\frac{2}{4}$

4. $\frac{3}{10}$ $\frac{3}{10}$ $\frac{6}{10}$

5. $\frac{5}{8}$ $\frac{2}{8}$ $\frac{7}{8}$

6. $\frac{4}{12}$ $\frac{6}{12}$ $\frac{10}{12}$

7. $\frac{4}{8}$ $\frac{2}{8}$ $\frac{6}{8}$

8. $\frac{8}{12}$ $\frac{1}{12}$ $\frac{9}{12}$

9. $\frac{6}{10}$ $\frac{3}{10}$ $\frac{9}{10}$

10. $\frac{2}{6}$ $\frac{2}{6}$ $\frac{4}{6}$