



Determine which letter best represents the sum.

1) $\frac{4}{6} + \frac{5}{6}$

3) $\frac{3}{6} + \frac{2}{6}$

5) $\frac{5}{10} + \frac{2}{10}$

7) $\frac{4}{5} + \frac{3}{5}$

9) $\frac{7}{12} + \frac{6}{12}$

11) $\frac{2}{4} + \frac{3}{4}$

13) $\frac{7}{8} + \frac{4}{8}$

2) $\frac{8}{12} + \frac{10}{12}$

4) $\frac{3}{6} + \frac{5}{6}$

6) $\frac{2}{10} + \frac{7}{10}$

8) $\frac{1}{3} + \frac{1}{3}$

10) $\frac{1}{3} + \frac{2}{3}$

12) $\frac{2}{3} + \frac{2}{3}$

14) $\frac{1}{2} + \frac{1}{2}$

Answers

1. _____

2. _____

3. _____

4. _____

5. _____

6. _____

7. _____

8. _____

9. _____

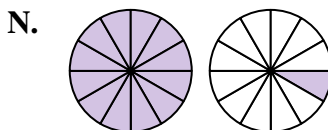
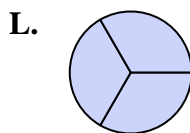
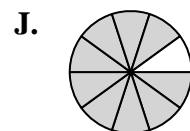
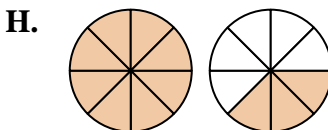
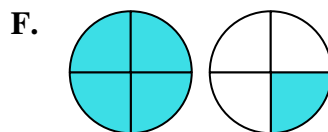
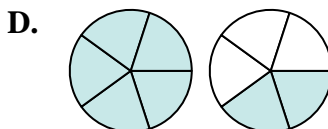
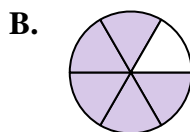
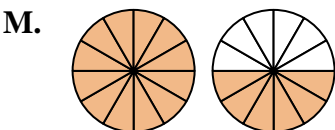
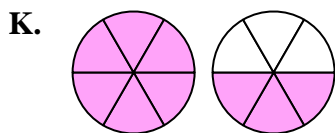
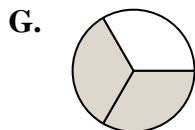
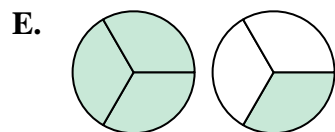
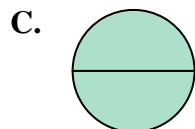
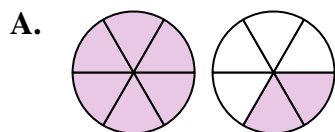
10. _____

11. _____

12. _____

13. _____

14. _____





Determine which letter best represents the sum.

1) $\frac{4}{6} + \frac{5}{6}$

2) $\frac{8}{12} + \frac{10}{12}$

3) $\frac{3}{6} + \frac{2}{6}$

4) $\frac{3}{6} + \frac{5}{6}$

5) $\frac{5}{10} + \frac{2}{10}$

6) $\frac{2}{10} + \frac{7}{10}$

7) $\frac{4}{5} + \frac{3}{5}$

8) $\frac{1}{3} + \frac{1}{3}$

9) $\frac{7}{12} + \frac{6}{12}$

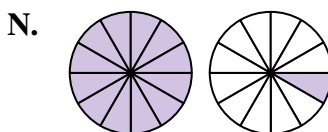
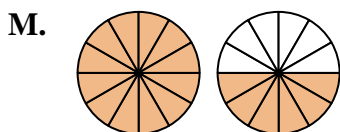
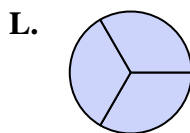
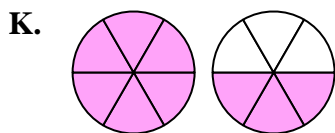
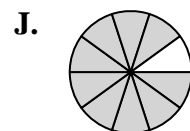
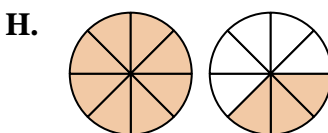
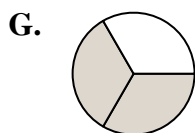
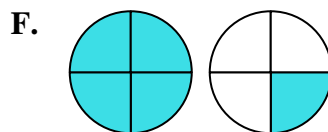
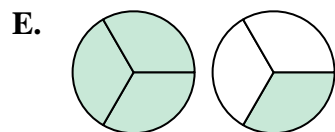
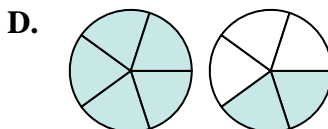
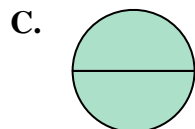
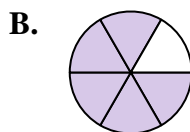
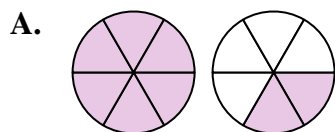
10) $\frac{1}{3} + \frac{2}{3}$

11) $\frac{2}{4} + \frac{3}{4}$

12) $\frac{2}{3} + \frac{2}{3}$

13) $\frac{7}{8} + \frac{4}{8}$

14) $\frac{1}{2} + \frac{1}{2}$



Answers

1. **K** $1\frac{3}{6}$

2. **M** $1\frac{6}{12}$

3. **B** $\frac{5}{6}$

4. **A** $1\frac{2}{6}$

5. **I** $\frac{7}{10}$

6. **J** $\frac{9}{10}$

7. **D** $1\frac{2}{5}$

8. **G** $\frac{2}{3}$

9. **N** $1\frac{1}{12}$

10. **L** $\frac{3}{3}$

11. **F** $1\frac{1}{4}$

12. **E** $1\frac{1}{3}$

13. **H** $1\frac{3}{8}$

14. **C** $\frac{2}{2}$