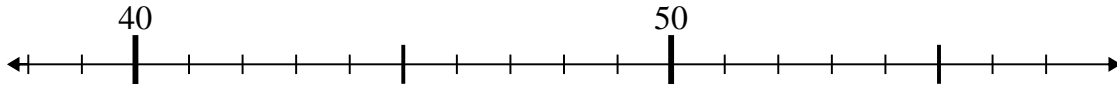




Use the numberlines to solve each problem.

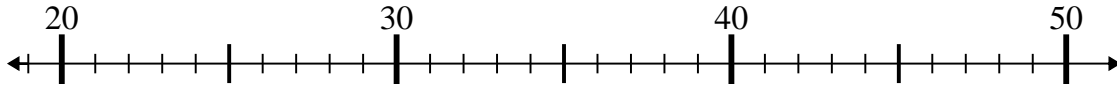
Answers

1)  $53 + 1 =$



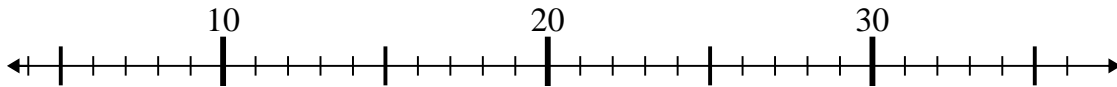
1. \_\_\_\_\_

2)  $20 + 6 =$



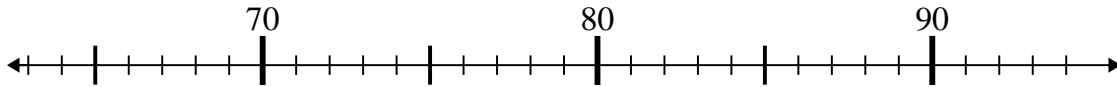
2. \_\_\_\_\_

3)  $13 + 23 =$



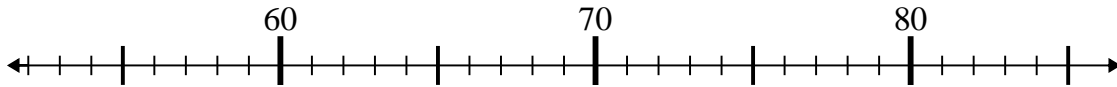
3. \_\_\_\_\_

4)  $92 - 9 =$



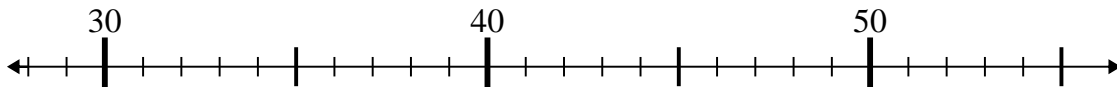
4. \_\_\_\_\_

5)  $61 + 12 =$



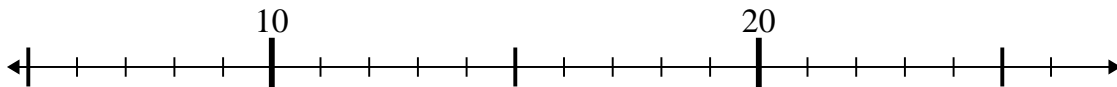
5. \_\_\_\_\_

6)  $39 - 5 =$



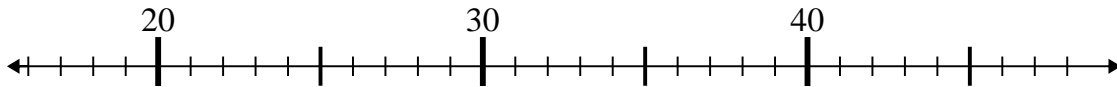
6. \_\_\_\_\_

7)  $11 + 1 =$



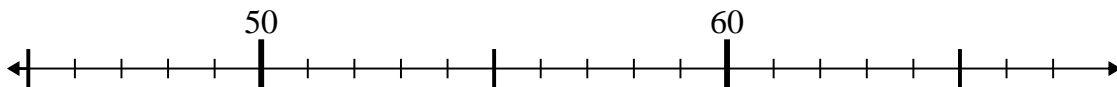
7. \_\_\_\_\_

8)  $31 + 4 =$



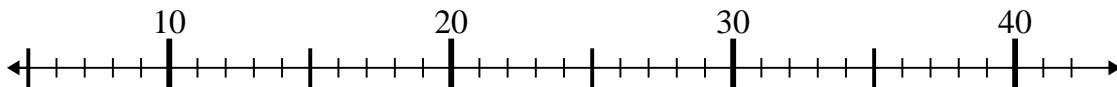
8. \_\_\_\_\_

9)  $55 - 10 =$



9. \_\_\_\_\_

10)  $8 + 28 =$

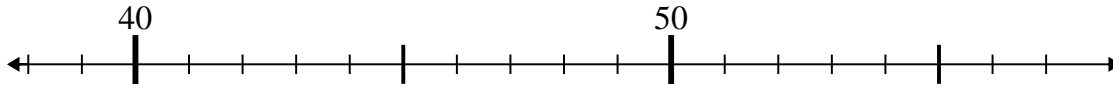


10. \_\_\_\_\_

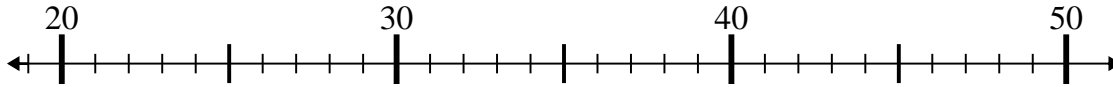


Use the numberlines to solve each problem.

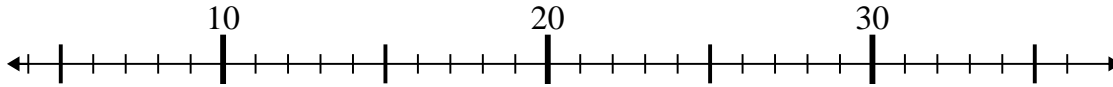
1)  $53 + 1 =$



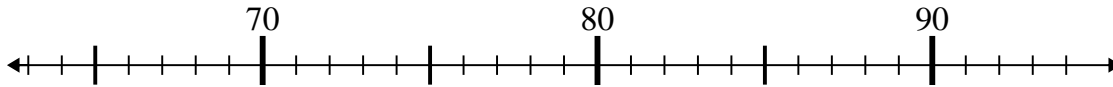
2)  $20 + 6 =$



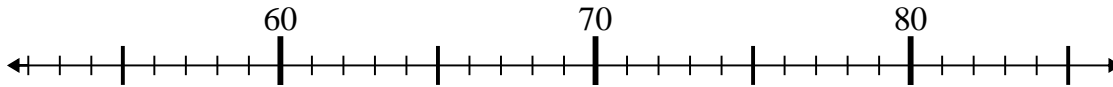
3)  $13 + 23 =$



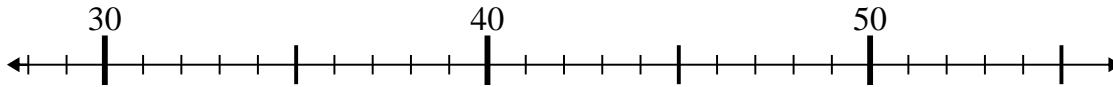
4)  $92 - 9 =$



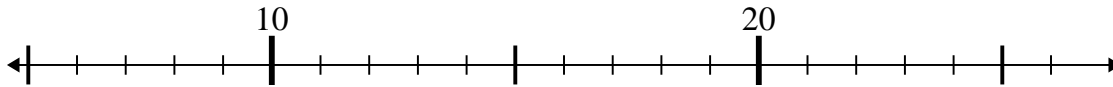
5)  $61 + 12 =$



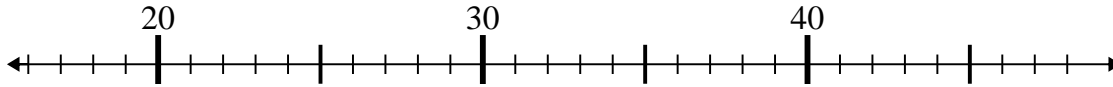
6)  $39 - 5 =$



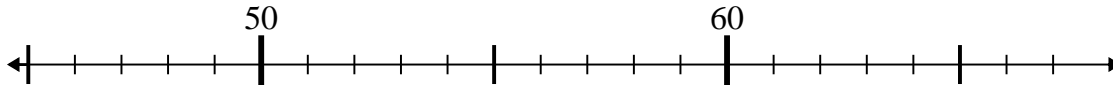
7)  $11 + 1 =$



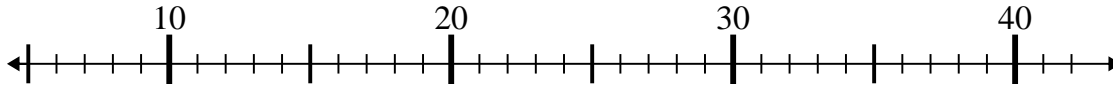
8)  $31 + 4 =$



9)  $55 - 10 =$



10)  $8 + 28 =$



Answers

1. 54

2. 26

3. 36

4. 83

5. 73

6. 34

7. 12

8. 35

9. 45

10. 36