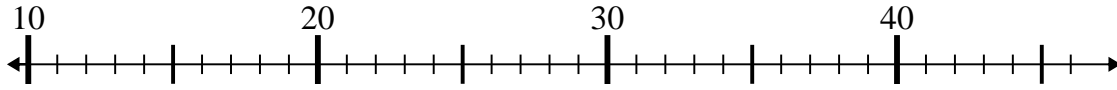




Use the numberlines to solve each problem.

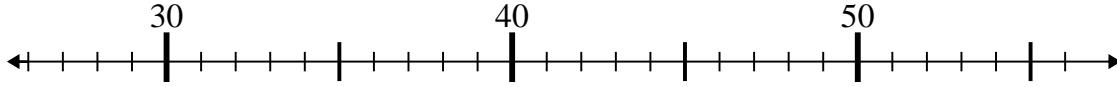
Answers

1)  $24 - 11 =$



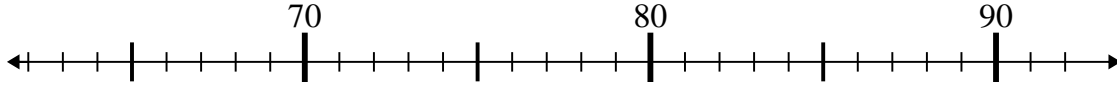
1. \_\_\_\_\_

2)  $29 + 6 =$



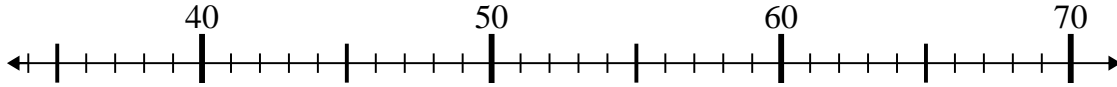
2. \_\_\_\_\_

3)  $72 + 7 =$



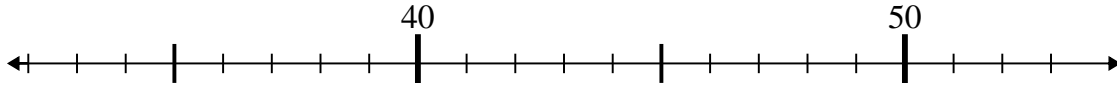
3. \_\_\_\_\_

4)  $41 + 16 =$



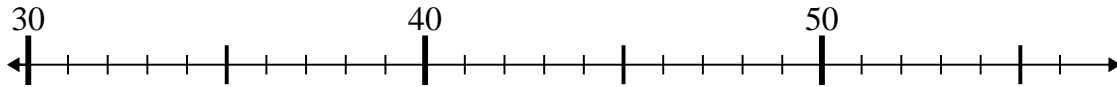
4. \_\_\_\_\_

5)  $51 - 3 =$



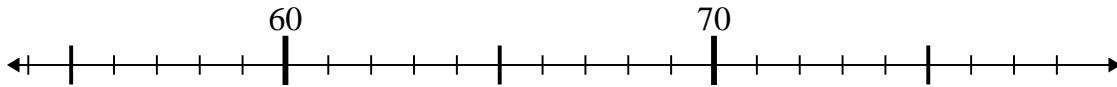
5. \_\_\_\_\_

6)  $35 - 0 =$



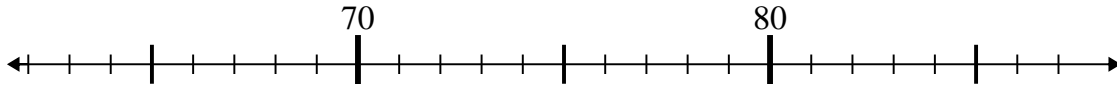
6. \_\_\_\_\_

7)  $65 + 10 =$



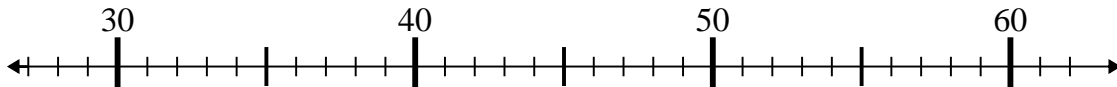
7. \_\_\_\_\_

8)  $65 + 14 =$



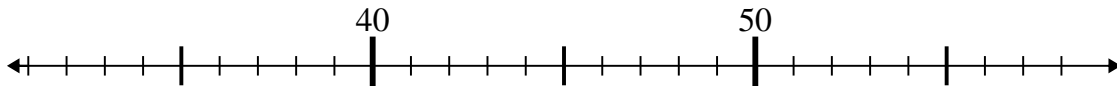
8. \_\_\_\_\_

9)  $57 - 16 =$



9. \_\_\_\_\_

10)  $58 - 19 =$

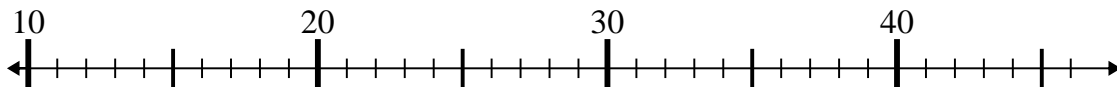


10. \_\_\_\_\_

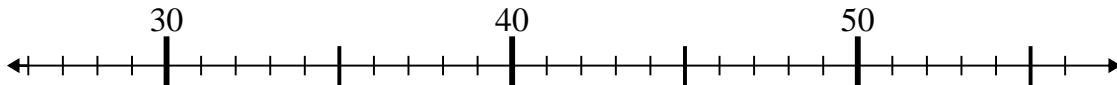


Use the numberlines to solve each problem.

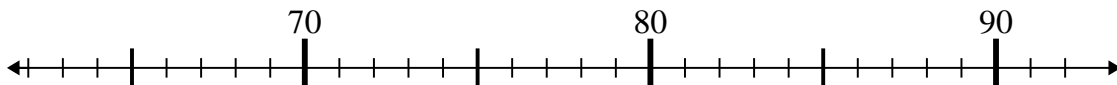
1)  $24 - 11 =$



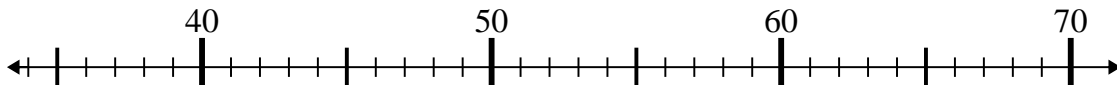
2)  $29 + 6 =$



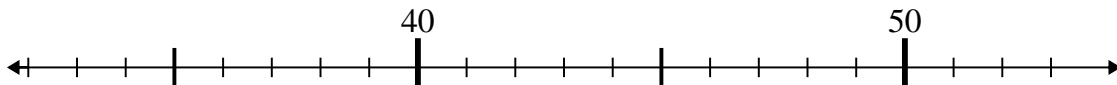
3)  $72 + 7 =$



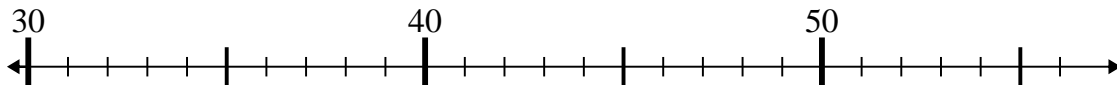
4)  $41 + 16 =$



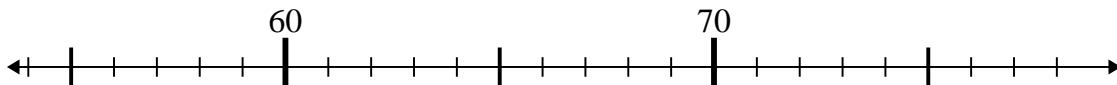
5)  $51 - 3 =$



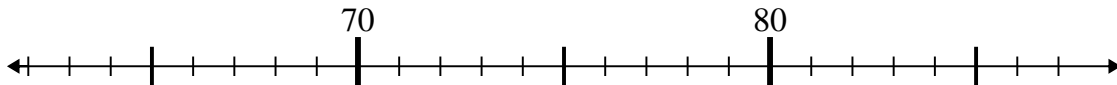
6)  $35 - 0 =$



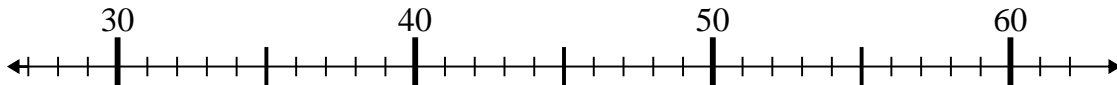
7)  $65 + 10 =$



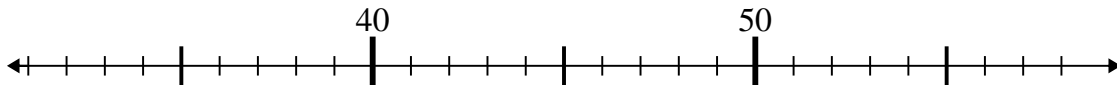
8)  $65 + 14 =$



9)  $57 - 16 =$



10)  $58 - 19 =$



Answers

1. **13**

2. **35**

3. **79**

4. **57**

5. **48**

6. **35**

7. **75**

8. **79**

9. **41**

10. **39**