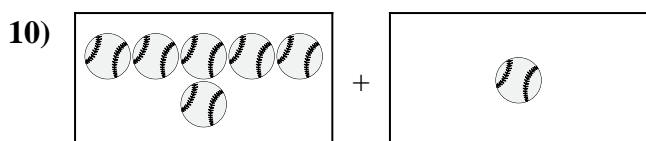
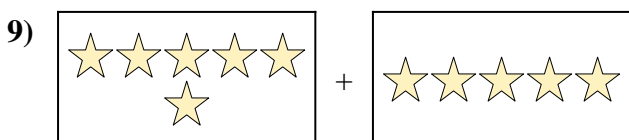
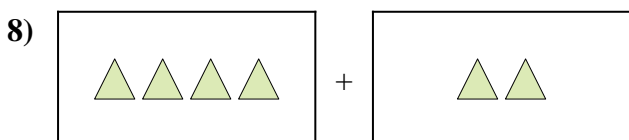
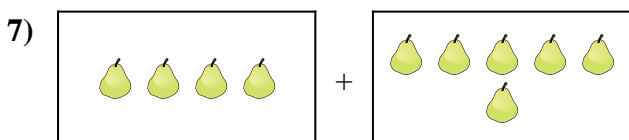
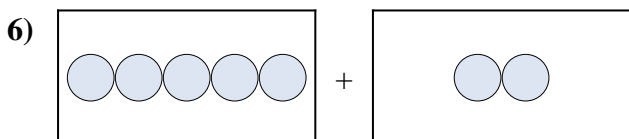
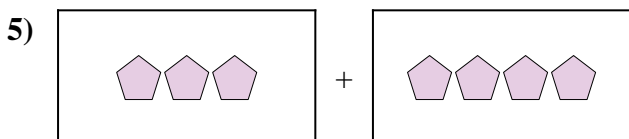
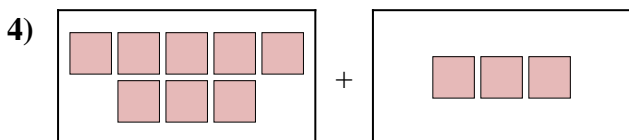

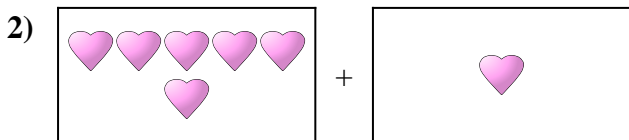
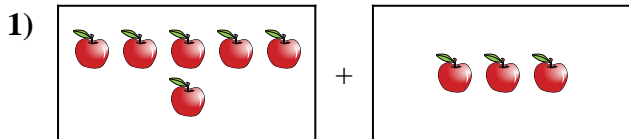




Express the visual problem as an equation with answer.

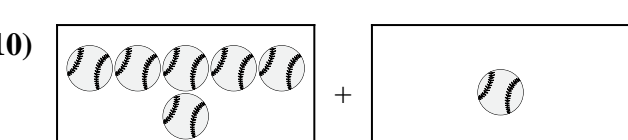
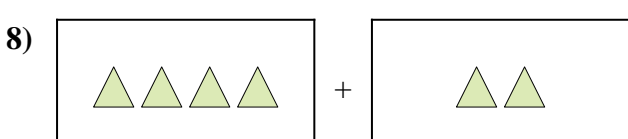
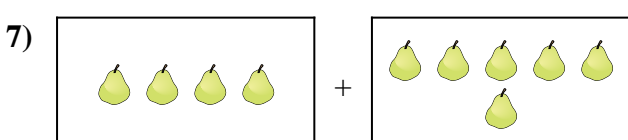
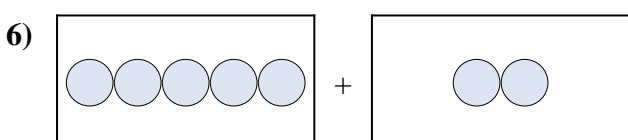
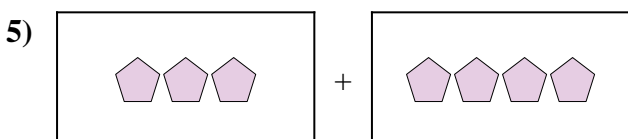
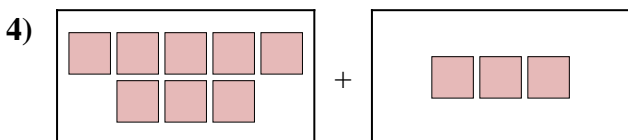

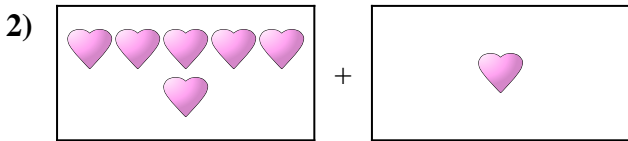
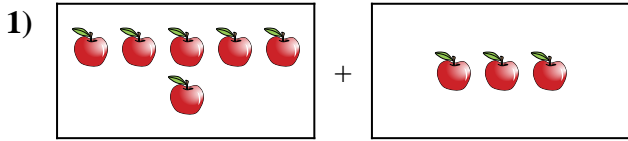


Answers

1. \_\_\_\_\_
2. \_\_\_\_\_
3. \_\_\_\_\_
4. \_\_\_\_\_
5. \_\_\_\_\_
6. \_\_\_\_\_
7. \_\_\_\_\_
8. \_\_\_\_\_
9. \_\_\_\_\_
10. \_\_\_\_\_



Express the visual problem as an equation with answer.



Answers

1.  $6 + 3 = 9$

2.  $6 + 1 = 7$

3.  $10 + 4 = 14$

4.  $8 + 3 = 11$

5.  $3 + 4 = 7$

6.  $5 + 2 = 7$

7.  $4 + 6 = 10$

8.  $4 + 2 = 6$

9.  $6 + 5 = 11$

10.  $6 + 1 = 7$