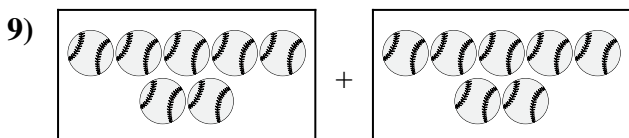
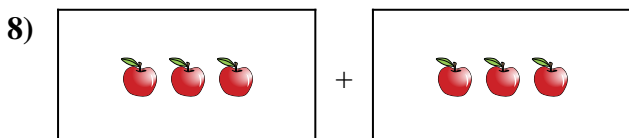
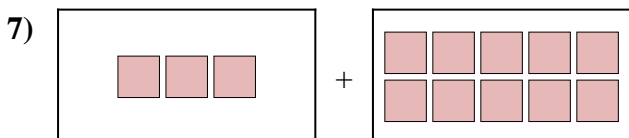
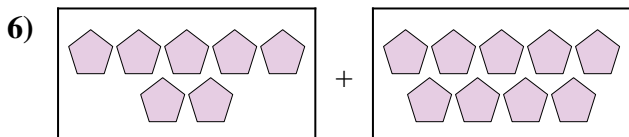
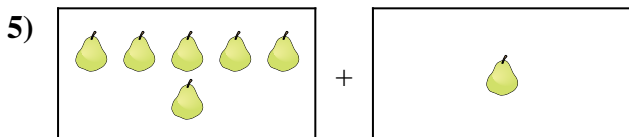
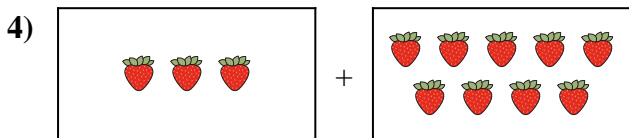
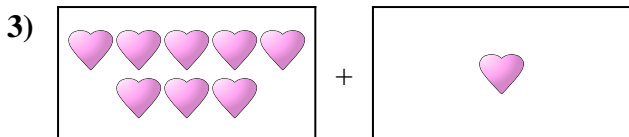
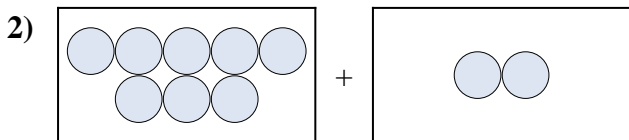





Express the visual problem as an equation with answer.

Answers



1. _____

2. _____

3. _____

4. _____

5. _____

6. _____

7. _____

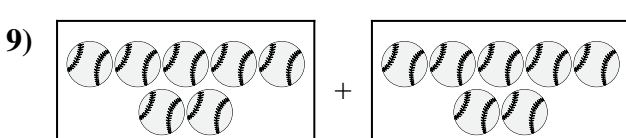
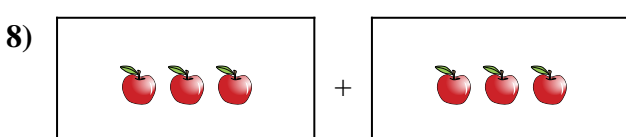
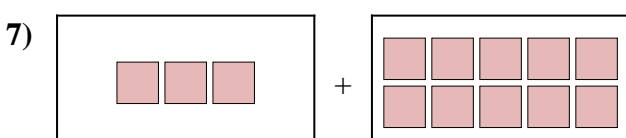
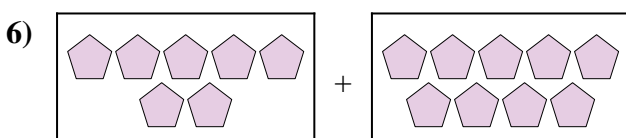
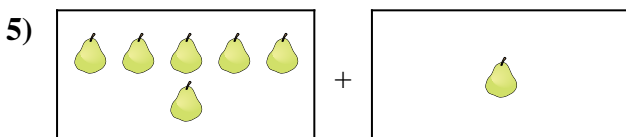
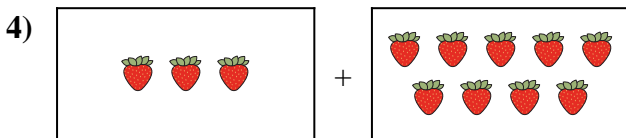
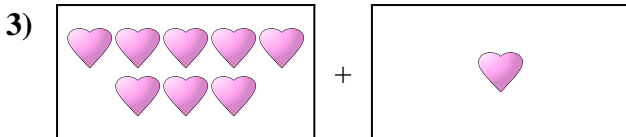
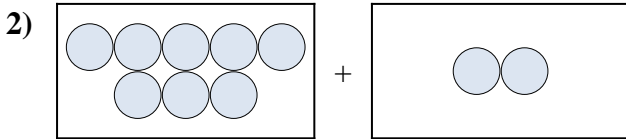

8. _____

9. _____

10. _____



Express the visual problem as an equation with answer.



Answers

1. $9 + 1 = 10$

2. $8 + 2 = 10$

3. $8 + 1 = 9$

4. $3 + 9 = 12$

5. $6 + 1 = 7$

6. $7 + 9 = 16$

7. $3 + 10 = 13$

8. $3 + 3 = 6$

9. $7 + 7 = 14$

10. $5 + 2 = 7$