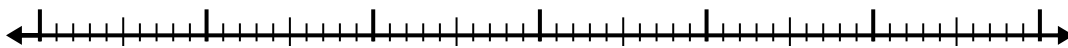


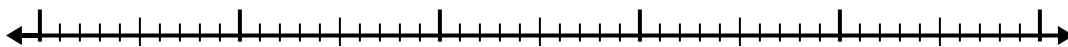


Use the number line to solve each problem.

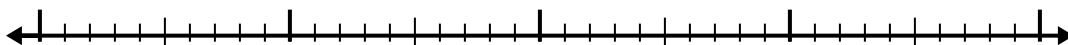
1) $9.7 - 3.2 =$



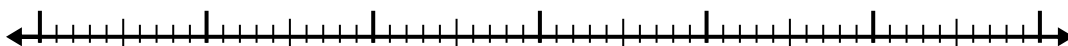
2) $9.1 - 3.8 =$



3) $4.2 - 1.1 =$



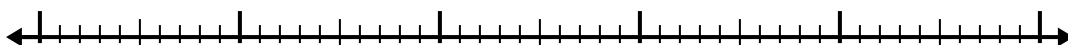
4) $11.6 - 3.2 =$



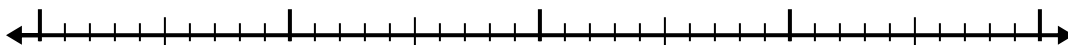
5) $6.9 - 1.2 =$




6) $4.8 - 2.8 =$



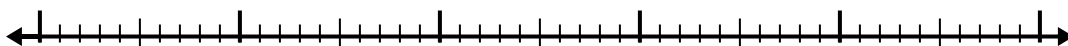
7) $6 - 1.8 =$



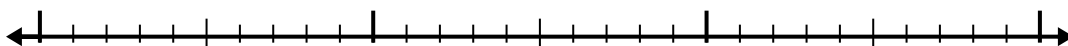
8) $8 - 1.4 =$



9) $8.2 - 3.9 =$



10) $2.5 - 1.4 =$

**Answers**

1. _____

2. _____

3. _____

4. _____

5. _____

6. _____

7. _____

8. _____

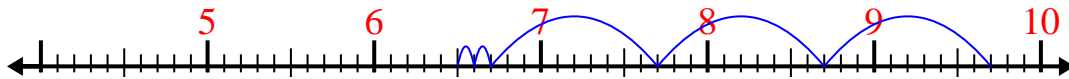
9. _____

10. _____




Use the number line to solve each problem.

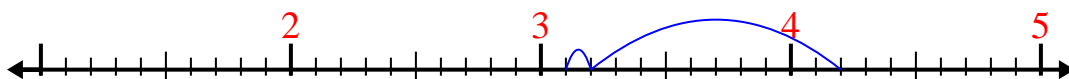
1) $9.7 - 3.2 =$



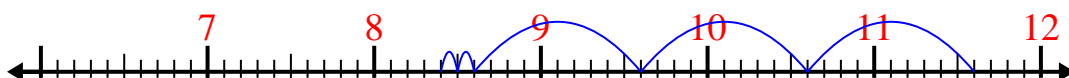
2) $9.1 - 3.8 =$



3) $4.2 - 1.1 =$



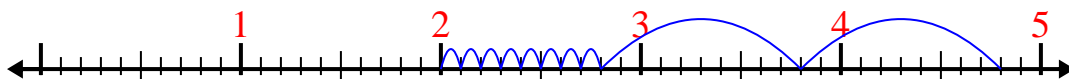
4) $11.6 - 3.2 =$



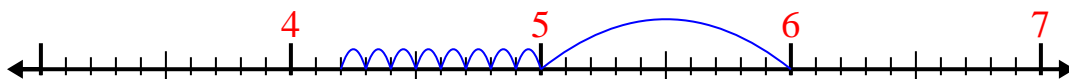
5) $6.9 - 1.2 =$



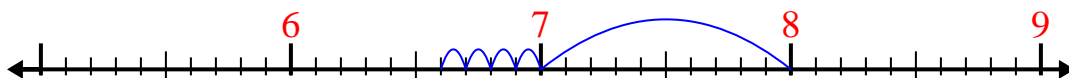
6) $4.8 - 2.8 =$



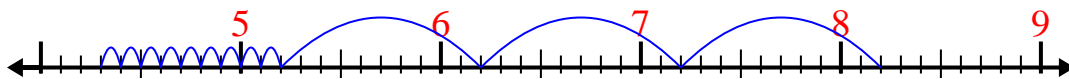
7) $6 - 1.8 =$



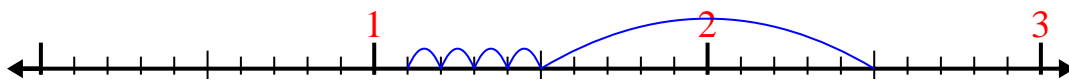
8) $8 - 1.4 =$



9) $8.2 - 3.9 =$



10) $2.5 - 1.4 =$

Answers1. 6.52. 5.33. 3.14. 8.45. 5.76. 27. 4.28. 6.69. 4.310. 1.1