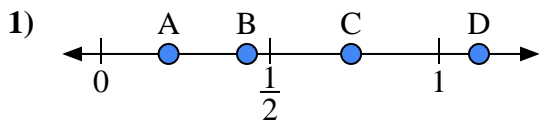


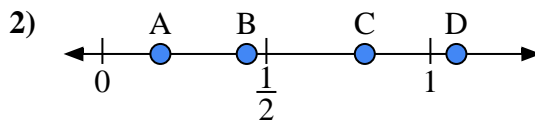


Use the number lines to answer the questions.

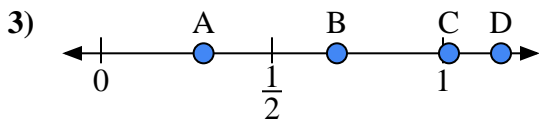
Answers



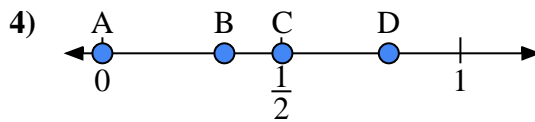
- a) Which letter best represents the location of 0.20?
- b) Which letter best represents the location of 0.74?



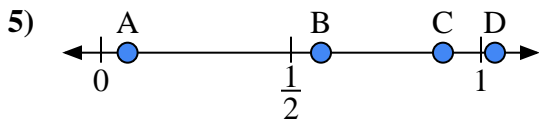
- a) Which letter best represents the location of 0.8?
- b) Which letter best represents the location of 0.44?



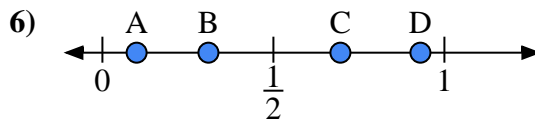
- a) Which letter best represents the location of 0.30?
- b) Which letter best represents the location of 0.69?



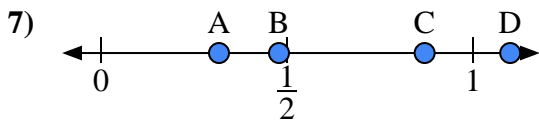
- a) Which letter best represents the location of 0.0?
- b) Which letter best represents the location of 0.80?



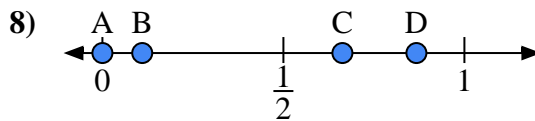
- a) Which letter best represents the location of 0.90?
- b) Which letter best represents the location of 0.07?



- a) Which letter best represents the location of 0.10?
- b) Which letter best represents the location of 0.31?



- a) Which letter best represents the location of 1.10?
- b) Which letter best represents the location of 0.87?

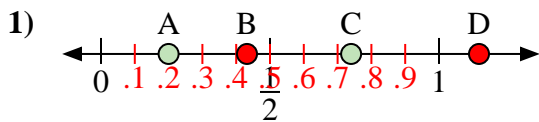


- a) Which letter best represents the location of 0.00?
- b) Which letter best represents the location of 0.11?

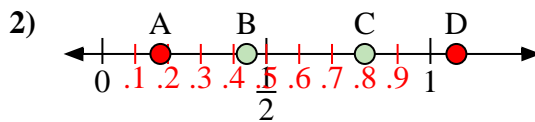
- 1. _____
- 2. _____
- 3. _____
- 4. _____
- 5. _____
- 6. _____
- 7. _____
- 8. _____



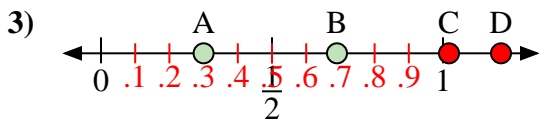
Use the number lines to answer the questions.



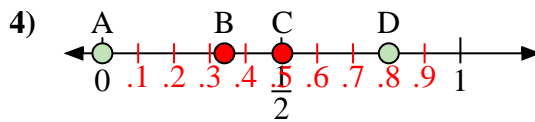
- a) Which letter best represents the location of 0.20?
- b) Which letter best represents the location of 0.74?



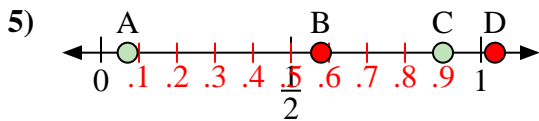
- a) Which letter best represents the location of 0.8?
- b) Which letter best represents the location of 0.44?



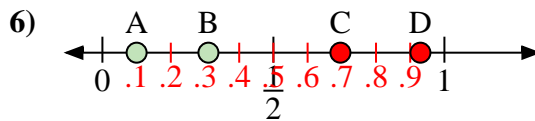
- a) Which letter best represents the location of 0.30?
- b) Which letter best represents the location of 0.69?



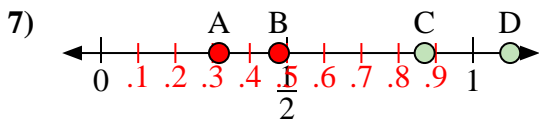
- a) Which letter best represents the location of 0.0?
- b) Which letter best represents the location of 0.80?



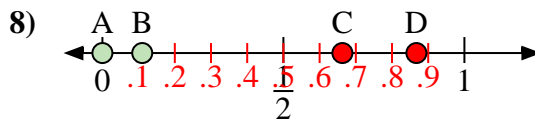
- a) Which letter best represents the location of 0.90?
- b) Which letter best represents the location of 0.07?



- a) Which letter best represents the location of 0.10?
- b) Which letter best represents the location of 0.31?



- a) Which letter best represents the location of 1.10?
- b) Which letter best represents the location of 0.87?



- a) Which letter best represents the location of 0.00?
- b) Which letter best represents the location of 0.11?

Answers

- 1. A C
- 2. C B
- 3. A B
- 4. A D
- 5. C A
- 6. A B
- 7. D C
- 8. A B