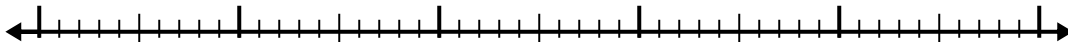


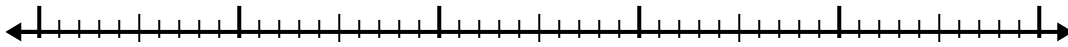


Use the number line to solve each problem.

1)  $4.8 + 3.8 =$



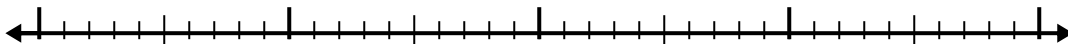
2)  $6.1 + 2.7 =$



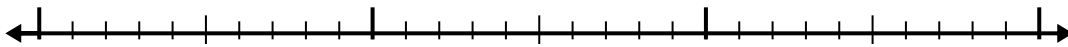
3)  $5.5 + 1.3 =$



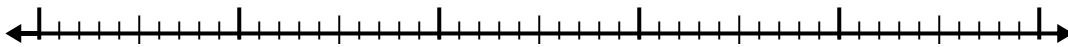
4)  $2.8 + 2.4 =$



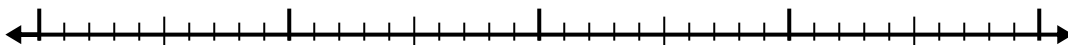
5)  $1.4 + 1.3 =$




6)  $4.6 + 2.4 =$



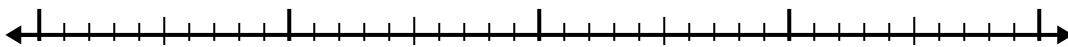
7)  $8 + 2.5 =$



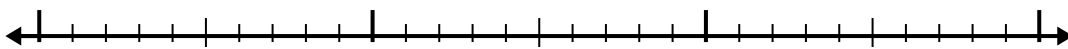
8)  $8.5 + 3.8 =$



9)  $1.5 + 2.7 =$



10)  $1.7 + 1.3 =$



Answers

1. \_\_\_\_\_

2. \_\_\_\_\_

3. \_\_\_\_\_

4. \_\_\_\_\_

5. \_\_\_\_\_

6. \_\_\_\_\_

7. \_\_\_\_\_

8. \_\_\_\_\_


9. \_\_\_\_\_

10. \_\_\_\_\_

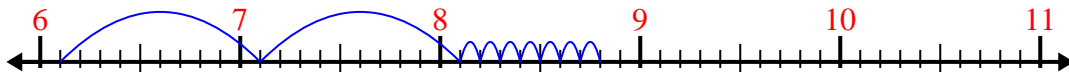


Use the number line to solve each problem.

1)  $4.8 + 3.8 =$



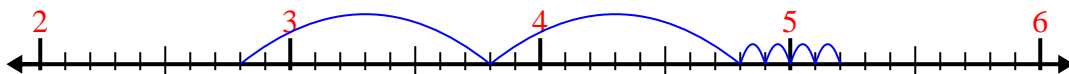
2)  $6.1 + 2.7 =$



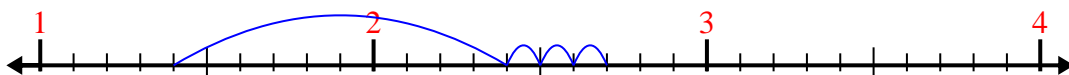
3)  $5.5 + 1.3 =$



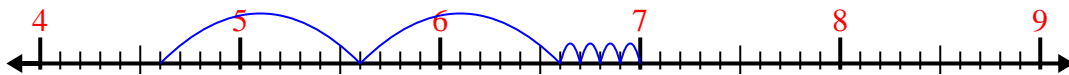
4)  $2.8 + 2.4 =$



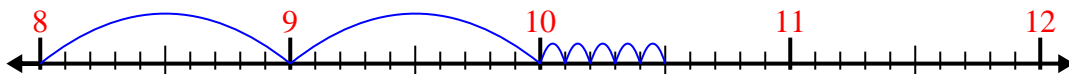
5)  $1.4 + 1.3 =$



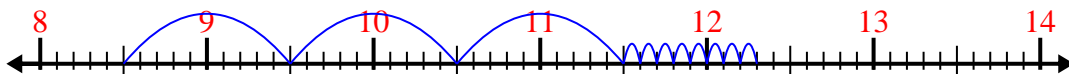
6)  $4.6 + 2.4 =$



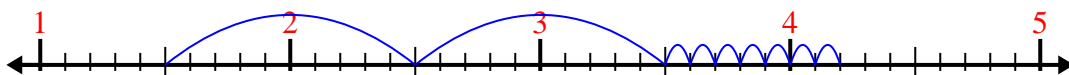
7)  $8 + 2.5 =$



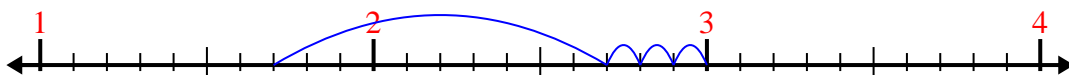
8)  $8.5 + 3.8 =$



9)  $1.5 + 2.7 =$



10)  $1.7 + 1.3 =$



Answers

1. 8.6

2. 8.8

3. 6.8

4. 5.2

5. 2.7

6. 7.0

7. 10.5

8. 12.3

9. 4.2

10. 3.0