



Determine which letter best represents the volume.

Milliliter

A milliliter is equal to about 20 drops of water.



Liter

Many large soda bottles are either 1 or 2 liters.

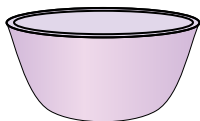
1 Liter = 1,000 Milliliters



Answers

1. _____
2. _____
3. _____
4. _____
5. _____
6. _____
7. _____
8. _____
9. _____


1)



Cereal Bowl

- A. 50 milliliters
- B. 475 milliliters
- C. 1 milliliter
- D. 2 liters

2)



Eyedropper holds

- A. 500 milliliters
- B. 1000 milliliters
- C. 2 milliliters
- D. 2 liters

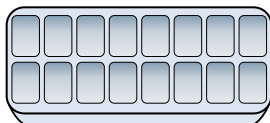
3)



Cafeteria Milk

- A. 1 liter
- B. 237 milliliters
- C. 237 liters
- D. 2 liters


4)



Water in an ice tray

- A. 2 milliliters
- B. 0.5 liters
- C. 50 milliliters
- D. 2 liters


5)



Soda in a can

- A. 350 milliliters
- B. 2 milliliters
- C. 2 liters
- D. 350 liters

6)



Gas tank in a car

- A. 15 milliliters
- B. 60 liters
- C. 70 milliliters
- D. 3 liters

7)



Flour in a pan of brownies

- A. 3 liters
- B. 0.5 liters
- C. 16 liters
- D. 10 milliliters

8)



Water for a house plant

- A. 2 milliliters
- B. 3 liters
- C. 500 milliliters
- D. 80 liters

9)



Shampoo in a bottle

- A. 20 liters
- B. 1.5 liters
- C. 20 milliliters
- D. 1 milliliter



Determine which letter best represents the volume.

Milliliter

A milliliter is equal to about 20 drops of water.



Liter

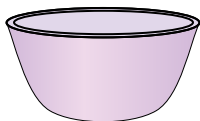
Many large soda bottles are either 1 or 2 liters.

1 Liter = 1,000 Milliliters



Answers


1)



Cereal Bowl

- A. 50 milliliters
- B. 475 milliliters
- C. 1 milliliter
- D. 2 liters

2)



Eyedropper holds

- A. 500 milliliters
- B. 1000 milliliters
- C. 2 milliliters
- D. 2 liters

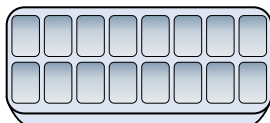
3)



Cafeteria Milk

- A. 1 liter
- B. 237 milliliters
- C. 237 liters
- D. 2 liters


4)



Water in an ice tray

- A. 2 milliliters
- B. 0.5 liters
- C. 50 milliliters
- D. 2 liters


5)



Soda in a can

- A. 350 milliliters
- B. 2 milliliters
- C. 2 liters
- D. 350 liters

6)



Gas tank in a car

- A. 15 milliliters
- B. 60 liters
- C. 70 milliliters
- D. 3 liters

7)



Flour in a pan of brownies

- A. 3 liters
- B. 0.5 liters
- C. 16 liters
- D. 10 milliliters

8)



Water for a house plant

- A. 2 milliliters
- B. 3 liters
- C. 500 milliliters
- D. 80 liters

9)



Shampoo in a bottle

- A. 20 liters
- B. 1.5 liters
- C. 20 milliliters
- D. 1 milliliter

- 1. **B**
- 2. **C**
- 3. **B**
- 4. **B**
- 5. **A**
- 6. **B**
- 7. **B**
- 8. **C**
- 9. **B**