



Determine which letter best represents the volume.

Answers

**Cup**

A cup is about the amount of milk you get from the cafeteria.

**Pint**

A pint is about the amount you get in a large glass.

1 pint = 2 cups

**Quart**

A quart is about the amount you get in a large milk container.

1 quart = 2 pints

**Gallon**

A gallon is the amount that comes in the large plastic container.

1 gallon = 4 quarts



1. \_\_\_\_\_
2. \_\_\_\_\_
3. \_\_\_\_\_
4. \_\_\_\_\_
5. \_\_\_\_\_
6. \_\_\_\_\_
7. \_\_\_\_\_
8. \_\_\_\_\_
9. \_\_\_\_\_


1)



Glue in a bottle

- A. 1 pint
- B. 3 gallons
- C. 2 quarts
- D. 0.5 cups


2)



Sand a wheel barrow holds

- A. 8 quarts
- B. 45 gallons
- C. 4 cups
- D. 1000 grams

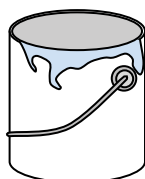
3)



Ice Chest

- A. 16 cups
- B. 2 quarts
- C. 100 quarts
- D. 5 gallons


4)



Paint in a can

- A. 3 fluid ounces
- B. 1 cup
- C. 0.5 pints
- D. 1 gallon

5)



Eyedropper holds

- A. 3 gallons
- B. 1 pint
- C. less than 1 cup
- D. 1 cup

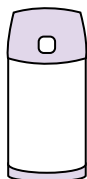
6)



Toothpaste in a tube

- A. 0.5 cups
- B. 5 grams
- C. 5 quarts
- D. 0.5 gallons

7)



Liquid in a thermos

- A. 1 gallon
- B. 1 cup
- C. 4 quarts
- D. 2 pounds

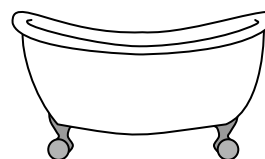
8)



Sand in a pail

- A. 32 gallons
- B. 1 cup
- C. 1 gallon
- D. 7 fluid ounces

9)



Bathtub

- A. 20 pints
- B. 45 gallons
- C. 40 cups
- D. 8 quarts



Determine which letter best represents the volume.

**Cup**

A cup is about the amount of milk you get from the cafeteria.

**Pint**

A pint is about the amount you get in a large glass.

1 pint = 2 cups

**Quart**

A quart is about the amount you get in a large milk container.

1 quart = 2 pints

**Gallon**

A gallon is the amount that comes in the large plastic container.

1 gallon = 4 quarts




1)



Glue in a bottle

- A. 1 pint
- B. 3 gallons
- C. 2 quarts
- D. 0.5 cups


2)



Sand a wheel barrow holds

- A. 8 quarts
- B. 45 gallons
- C. 4 cups
- D. 1000 grams

3)



Ice Chest

- A. 16 cups
- B. 2 quarts
- C. 100 quarts
- D. 5 gallons


4)



Paint in a can

- A. 3 fluid ounces
- B. 1 cup
- C. 0.5 pints
- D. 1 gallon

5)



Eyedropper holds

- A. 3 gallons
- B. 1 pint
- C. less than 1 cup
- D. 1 cup

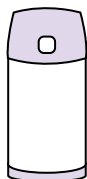
6)



Toothpaste in a tube

- A. 0.5 cups
- B. 5 grams
- C. 5 quarts
- D. 0.5 gallons

7)



Liquid in a thermos

- A. 1 gallon
- B. 1 cup
- C. 4 quarts
- D. 2 pounds

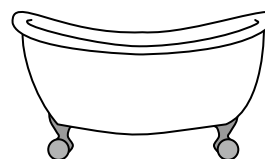
8)



Sand in a pail

- A. 32 gallons
- B. 1 cup
- C. 1 gallon
- D. 7 fluid ounces

9)



Bathtub

- A. 20 pints
- B. 45 gallons
- C. 40 cups
- D. 8 quarts

**Answers**

1. **D**

2. **B**

3. **C**

4. **D**

5. **C**

6. **A**

7. **B**

8. **C**

9. **B**