



Determine which letter best represents the volume.

Answers

Cup

A cup is about the amount of milk you get from the cafeteria.

Pint

A pint is about the amount you get in a large glass.

1 pint = 2 cups

Quart

A quart is about the amount you get in a large milk container.

1 quart = 2 pints

Gallon

A gallon is the amount that comes in the large plastic container.

1 gallon = 4 quarts




1)



Water for a house plant

- A. 3 gallons
- B. 2 cups
- C. 6 quarts
- D. 4 pounds

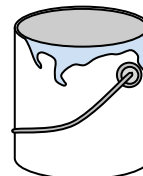
2)



Water a barrel holds

- A. 20 cups
- B. 50 gallons
- C. 3 inches
- D. 10 pints

3)



Paint in a can

- A. 3 fluid ounces
- B. 1 cup
- C. 1 gallon
- D. 0.5 pints


4)



Ink in a pen

- A. 1 quart
- B. less than 1 cup
- C. 1 gallon
- D. 2 pints


5)



Cereal Bowl

- A. 2 gallons
- B. 1 pint
- C. 4 pints
- D. 0.5 gallons

6)



Liquid in a thermos

- A. 2 pounds
- B. 4 quarts
- C. 1 gallon
- D. 1 cup

7)



Liquid in a tea cup

- A. 1 pint
- B. 1 quart
- C. 1 cup
- D. 1 gallon


8)



Flour in a batch of cookies

- A. 2 quarts
- B. 1.5 cups
- C. 2 gallons
- D. 5 gallons

9)



Liquid in a pitcher

- A. 1 pint
- B. 2 quarts
- C. 8 gallons
- D. 2 cups

- 1. _____
- 2. _____
- 3. _____
- 4. _____
- 5. _____
- 6. _____
- 7. _____
- 8. _____
- 9. _____



Determine which letter best represents the volume.

Cup

A cup is about the amount of milk you get from the cafeteria.

Pint

A pint is about the amount you get in a large glass.

1 pint = 2 cups

Quart

A quart is about the amount you get in a large milk container.

1 quart = 2 pints

Gallon

A gallon is the amount that comes in the large plastic container.

1 gallon = 4 quarts




1)



Water for a house plant

- A. 3 gallons
- B. 2 cups
- C. 6 quarts
- D. 4 pounds

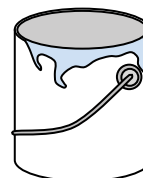
2)



Water a barrel holds

- A. 20 cups
- B. 50 gallons
- C. 3 inches
- D. 10 pints

3)



Paint in a can

- A. 3 fluid ounces
- B. 1 cup
- C. 1 gallon
- D. 0.5 pints

4)



Ink in a pen

- A. 1 quart
- B. less than 1 cup
- C. 1 gallon
- D. 2 pints

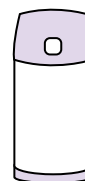
5)



Cereal Bowl

- A. 2 gallons
- B. 1 pint
- C. 4 pints
- D. 0.5 gallons

6)



Liquid in a thermos

- A. 2 pounds
- B. 4 quarts
- C. 1 gallon
- D. 1 cup

7)



Liquid in a tea cup

- A. 1 pint
- B. 1 quart
- C. 1 cup
- D. 1 gallon


8)



Flour in a batch of cookies

- A. 2 quarts
- B. 1.5 cups
- C. 2 gallons
- D. 5 gallons

9)



Liquid in a pitcher

- A. 1 pint
- B. 2 quarts
- C. 8 gallons
- D. 2 cups

Answers

1. **B**

2. **B**

3. **C**

4. **B**

5. **B**

6. **D**

7. **C**

8. **B**

9. **B**