



Determine which letter best represents the volume.

Answers

Cup

A cup is about the amount of milk you get from the cafeteria.

Pint

A pint is about the amount you get in a large glass.

1 pint = 2 cups

Quart

A quart is about the amount you get in a large milk container.

1 quart = 2 pints


Gallon

A gallon is the amount that comes in the large plastic container.

1 gallon = 4 quarts




1)



Bathtub

- A. 40 cups
- B. 8 quarts
- C. 20 pints
- D. 45 gallons


2)



Eyedropper holds

- A. 1 pint
- B. 3 gallons
- C. less than 1 cup
- D. 1 cup

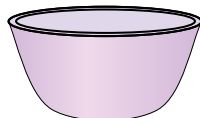
3)



Liquid in a pitcher

- A. 2 cups
- B. 1 pint
- C. 2 quarts
- D. 8 gallons

4)



Cereal Bowl

- A. 0.5 gallons
- B. 4 pints
- C. 2 gallons
- D. 1 pint

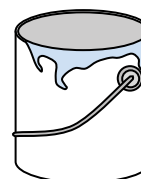
5)



Liquid a spoon holds

- A. Less than a cup
- B. 1 cup
- C. 1 pint
- D. 1 quart

6)



Paint in a can

- A. 3 fluid ounces
- B. 1 gallon
- C. 1 cup
- D. 0.5 pints

7)



2 liter of Soda

- A. 0.5 gallons
- B. 5 gallons
- C. 1 pint
- D. 2 cups


8)



Soda in a can

- A. 4 cups
- B. 1.5 cups
- C. 4 pints
- D. 1 gallon

9)



Ice Chest

- A. 100 quarts
- B. 16 cups
- C. 5 gallons
- D. 2 quarts

- 1. _____
- 2. _____
- 3. _____
- 4. _____
- 5. _____
- 6. _____
- 7. _____
- 8. _____
- 9. _____



Determine which letter best represents the volume.

Cup

A cup is about the amount of milk you get from the cafeteria.

Pint

A pint is about the amount you get in a large glass.

1 pint = 2 cups

Quart

A quart is about the amount you get in a large milk container.

1 quart = 2 pints


Gallon

A gallon is the amount that comes in the large plastic container.

1 gallon = 4 quarts




1)



Bathtub

- A. 40 cups
- B. 8 quarts
- C. 20 pints
- D. 45 gallons


2)



Eyedropper holds

- A. 1 pint
- B. 3 gallons
- C. less than 1 cup
- D. 1 cup

3)



Liquid in a pitcher

- A. 2 cups
- B. 1 pint
- C. 2 quarts
- D. 8 gallons

4)



Cereal Bowl

- A. 0.5 gallons
- B. 4 pints
- C. 2 gallons
- D. 1 pint

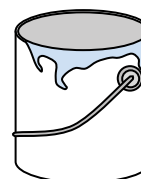
5)



Liquid a spoon holds

- A. Less than a cup
- B. 1 cup
- C. 1 pint
- D. 1 quart

6)



Paint in a can

- A. 3 fluid ounces
- B. 1 gallon
- C. 1 cup
- D. 0.5 pints

7)



2 liter of Soda

- A. 0.5 gallons
- B. 5 gallons
- C. 1 pint
- D. 2 cups


8)



Soda in a can

- A. 4 cups
- B. 1.5 cups
- C. 4 pints
- D. 1 gallon

9)



Ice Chest

- A. 100 quarts
- B. 16 cups
- C. 5 gallons
- D. 2 quarts

Answers

1. **D**

2. **C**

3. **C**

4. **D**

5. **A**

6. **B**

7. **A**

8. **B**

9. **A**