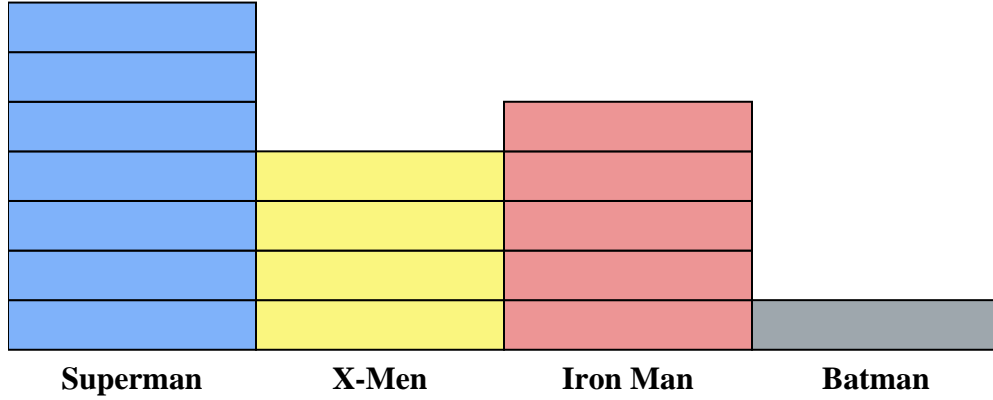




Solve each problem.



Each  = 2 issues sold

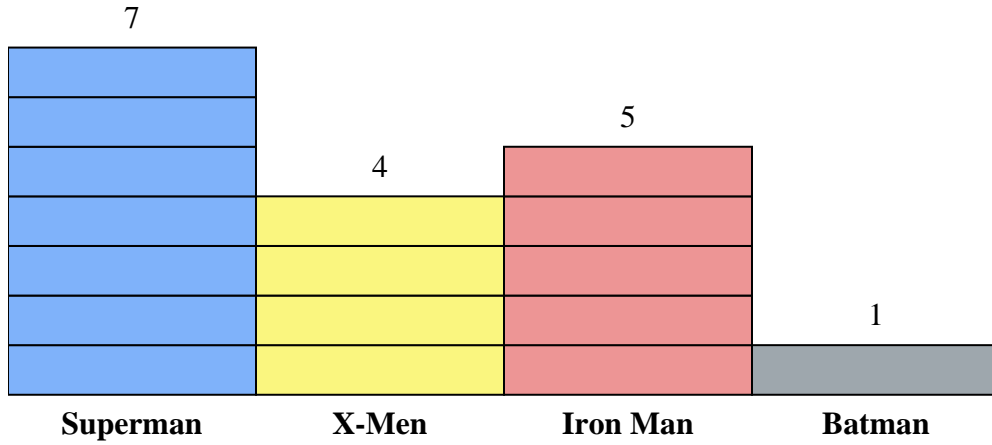
Answers

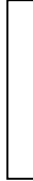
1. \_\_\_\_\_
2. \_\_\_\_\_
3. \_\_\_\_\_
4. \_\_\_\_\_
5. \_\_\_\_\_
6. \_\_\_\_\_
7. \_\_\_\_\_
8. \_\_\_\_\_
9. \_\_\_\_\_
10. \_\_\_\_\_

- 1) How many more issues of Superman were sold than issues of Batman?
- 2) Which comic series sold the most issues?
- 3) Which comic series sold the fewest issues?
- 4) What is the total number of issues sold for all the comics?
- 5) Which sold fewer, issues of Batman or issues of Iron Man?
- 6) Which comic series sold more, Superman or X-Men?
- 7) Which comic series sold exactly 8 issues?
- 8) How many issues of Iron Man were sold?
- 9) What is the combined number of Iron Man and Superman issues sold?
- 10) What is the difference in the number of X-Men issues sold and the number of Batman issues sold?



Solve each problem.



Each  = 2 issues sold

Answers

1. 12
2. Superman
3. Batman
4. 34
5. Batman
6. Superman
7. X-Men
8. 10
9. 24
10. 6

- 1) How many more issues of Superman were sold than issues of Batman?
- 2) Which comic series sold the most issues?
- 3) Which comic series sold the fewest issues?
- 4) What is the total number of issues sold for all the comics?
- 5) Which sold fewer, issues of Batman or issues of Iron Man?
- 6) Which comic series sold more, Superman or X-Men?
- 7) Which comic series sold exactly 8 issues?
- 8) How many issues of Iron Man were sold?
- 9) What is the combined number of Iron Man and Superman issues sold?
- 10) What is the difference in the number of X-Men issues sold and the number of Batman issues sold?