

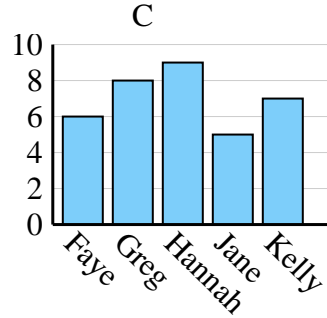
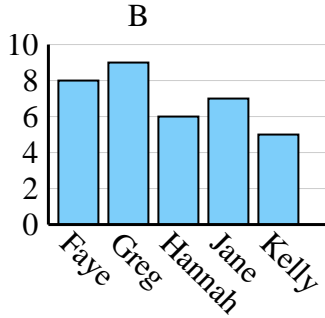
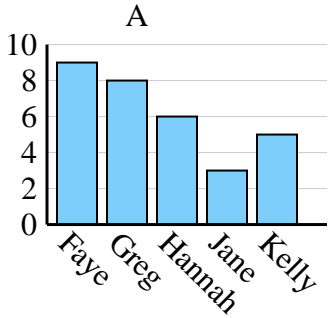


Determine which graph (A, B or C) best represents the information in the table.

Answers

1)

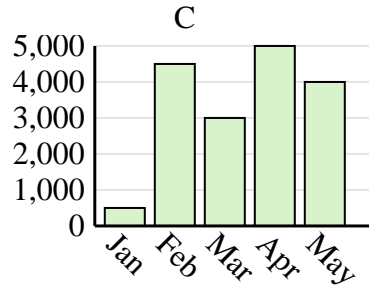
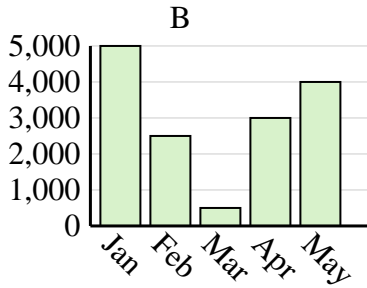
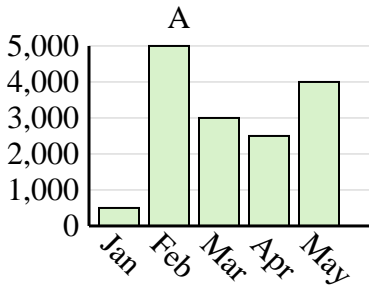
Name	Faye	Greg	Hannah	Jane	Kelly
States Lived In	6	8	9	5	7



1. \_\_\_\_\_
2. \_\_\_\_\_
3. \_\_\_\_\_
4. \_\_\_\_\_

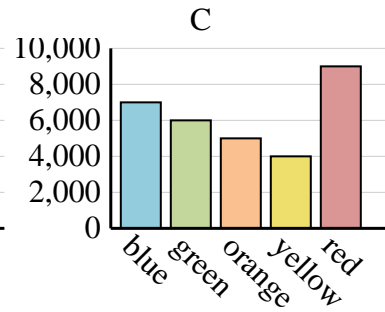
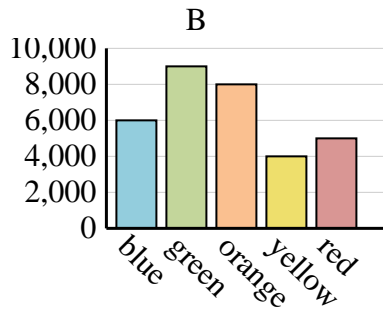
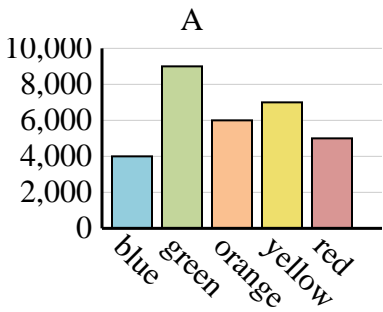
2)

Sales	Jan	Feb	Mar	Apr	May
Month	500	4,500	3,000	5,000	4,000



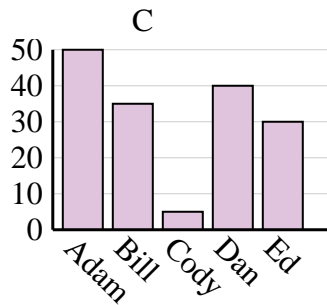
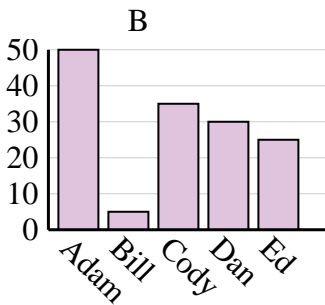
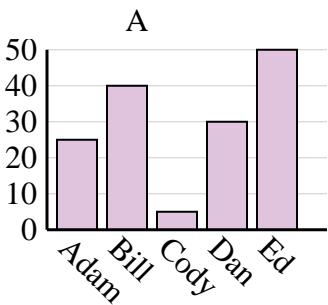
3)

Favorite Color	blue	green	orange	yellow	red
People	4,000	9,000	6,000	7,000	5,000



4)

Name	Adam	Bill	Cody	Dan	Ed
Points	50	35	5	40	30

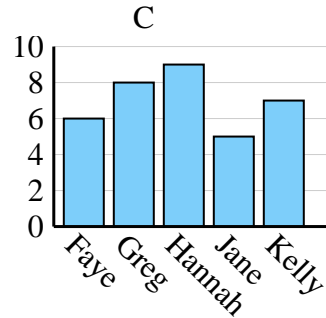
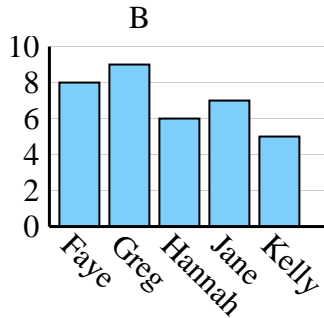
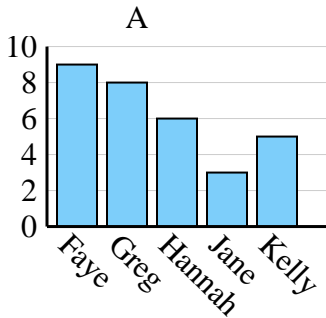




Determine which graph (A, B or C) best represents the information in the table.

Answers

<b>Name</b>	Faye	Greg	Hannah	Jane	Kelly
<b>States Lived In</b>	6	8	9	5	7



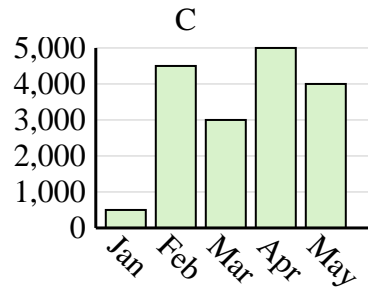
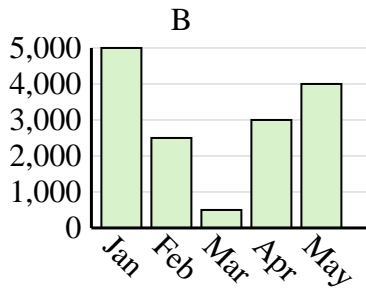
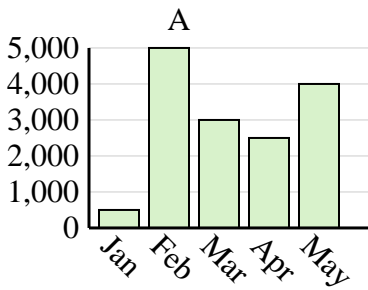
1. **C**

2. **C**

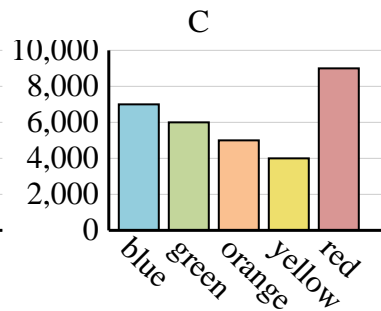
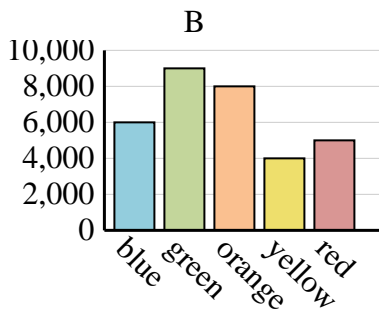
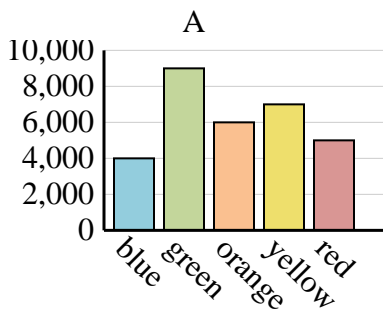
3. **A**

4. **C**

<b>Sales</b>	Jan	Feb	Mar	Apr	May
<b>Month</b>	500	4,500	3,000	5,000	4,000



<b>Favorite Color</b>	blue	green	orange	yellow	red
<b>People</b>	4,000	9,000	6,000	7,000	5,000



<b>Name</b>	Adam	Bill	Cody	Dan	Ed
<b>Points</b>	50	35	5	40	30

