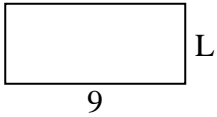




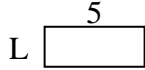
Determine the value of 'L'. Lengths are in cm (not to scale).

Answers

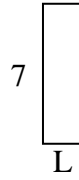
1) perimeter = 26



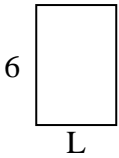
2) perimeter = 14



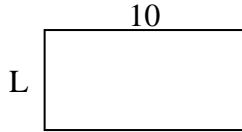
3) perimeter = 18



4) perimeter = 20



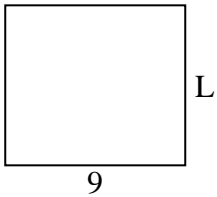
5) perimeter = 30




6) perimeter = 10



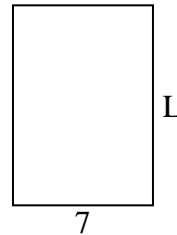
7) perimeter = 34



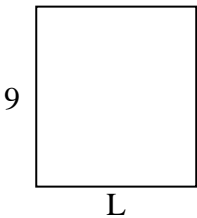
8) perimeter = 24



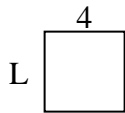
9) perimeter = 34



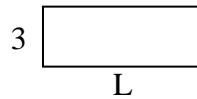
10) perimeter = 34




11) perimeter = 16



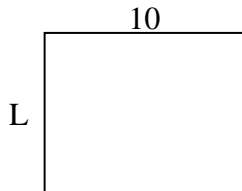
12) perimeter = 22



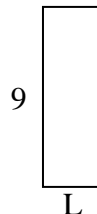
13) perimeter = 18



14) perimeter = 36



15) perimeter = 24

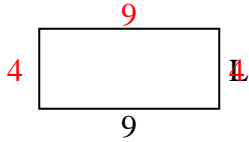


1. \_\_\_\_\_
2. \_\_\_\_\_
3. \_\_\_\_\_
4. \_\_\_\_\_
5. \_\_\_\_\_
6. \_\_\_\_\_
7. \_\_\_\_\_
8. \_\_\_\_\_
9. \_\_\_\_\_
10. \_\_\_\_\_
11. \_\_\_\_\_
12. \_\_\_\_\_
13. \_\_\_\_\_
14. \_\_\_\_\_
15. \_\_\_\_\_

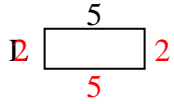


Determine the value of 'L'. Lengths are in cm (not to scale).

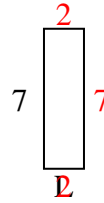
1) perimeter = 26



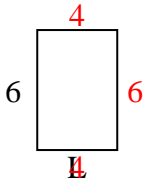
2) perimeter = 14



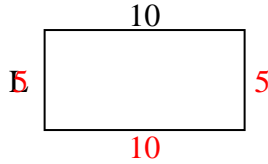
3) perimeter = 18



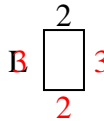
4) perimeter = 20



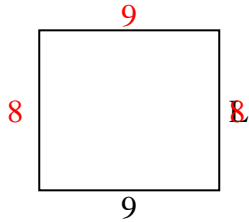
5) perimeter = 30



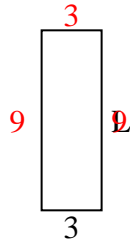
6) perimeter = 10



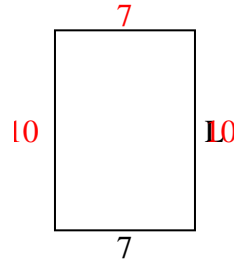
7) perimeter = 34



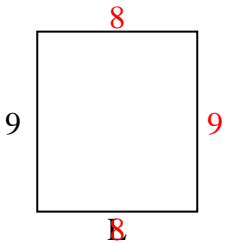
8) perimeter = 24



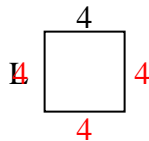
9) perimeter = 34



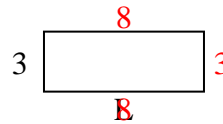
10) perimeter = 34



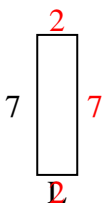
11) perimeter = 16



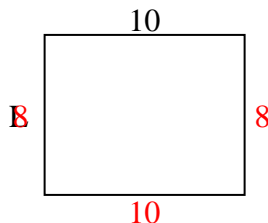
12) perimeter = 22



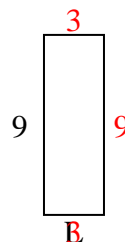
13) perimeter = 18



14) perimeter = 36



15) perimeter = 24



Answers

1. 4 cm

2. 2 cm

3. 2 cm

4. 4 cm

5. 5 cm

6. 3 cm

7. 8 cm

8. 9 cm

9. 10 cm

10. 8 cm

11. 4 cm

12. 8 cm

13. 2 cm

14. 8 cm

15. 3 cm