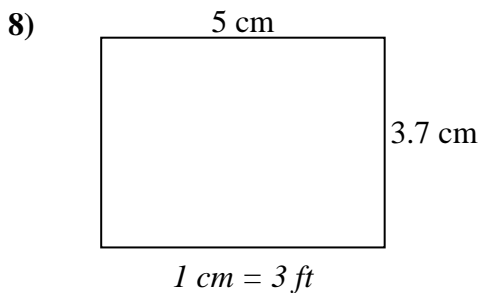
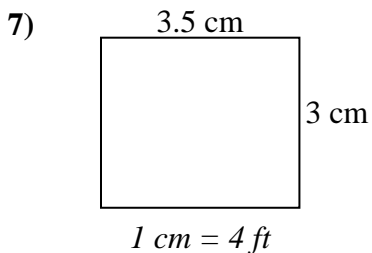
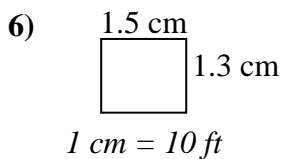
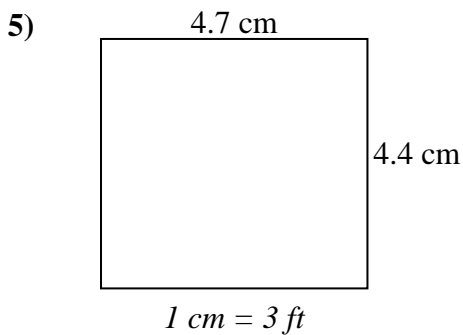
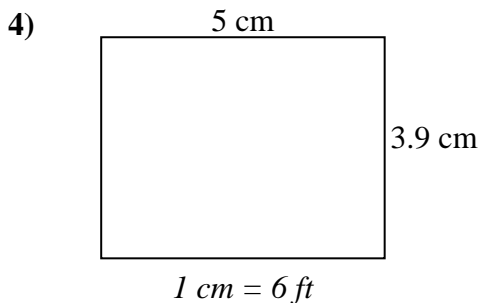
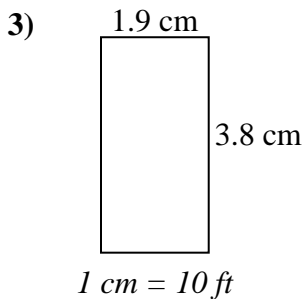
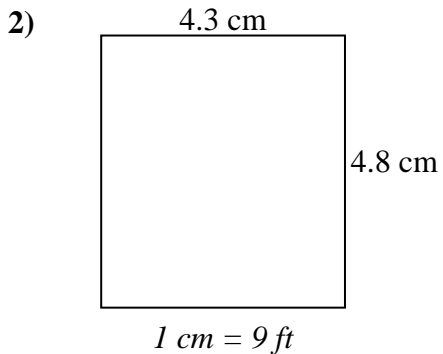
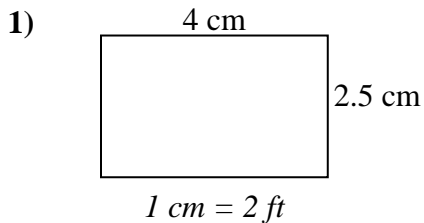




Determine the actual width, height and area of each scale rectangle.

Round the area to the nearest whole number.



Answers

1. _____

2. _____

3. _____

4. _____

5. _____

6. _____

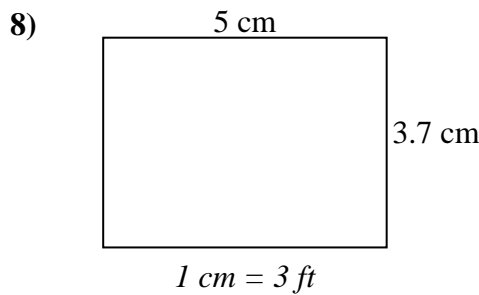
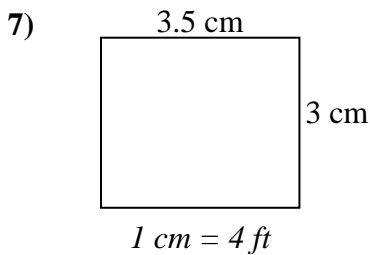
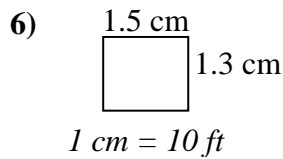
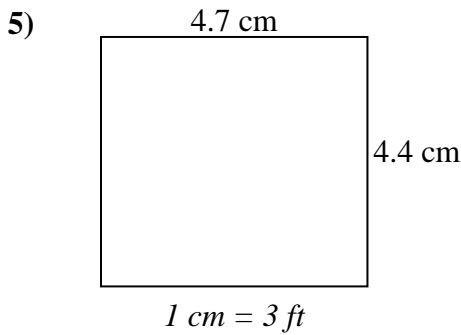
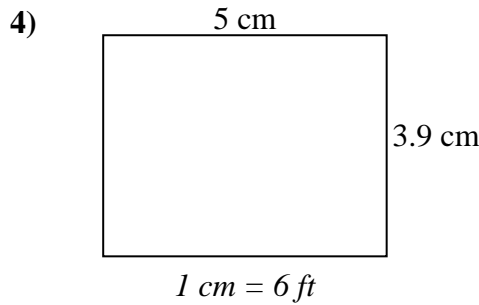
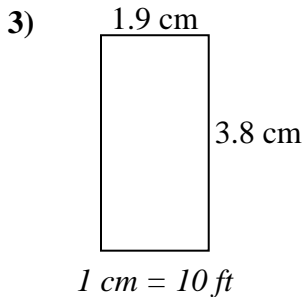
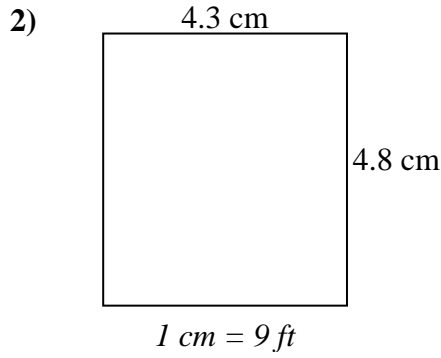
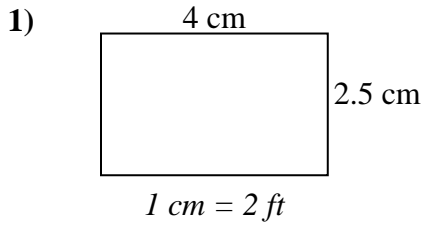
7. _____

8. _____



Determine the actual width, height and area of each scale rectangle.

Round the area to the nearest whole number.



Answers

| | | | |
|----|-------------|-------------|--------------|
| 1. | <u>8</u> | <u>5</u> | <u>40</u> |
| 2. | <u>38.7</u> | <u>43.2</u> | <u>1,672</u> |
| 3. | <u>19</u> | <u>38</u> | <u>722</u> |
| 4. | <u>30</u> | <u>23.4</u> | <u>702</u> |
| 5. | <u>14.1</u> | <u>13.2</u> | <u>186</u> |
| 6. | <u>15</u> | <u>13</u> | <u>195</u> |
| 7. | <u>14</u> | <u>12</u> | <u>168</u> |
| 8. | <u>15</u> | <u>11.1</u> | <u>167</u> |